



**School of Computing  
Faculty of Engineering  
UNIVERSITI TEKNOLOGI MALAYSIA**

**SUBJECT : SECR1013 DIGITAL LOGIC**

**SESSION/SEM : 20202021/1**

**LAB 3 : SYNCHRONOUS DIGITAL COUNTER**

**NAME : RADIN NAZHAN BIN RADIN JAMZULKOMAR(A20EC0136)  
MUHAMMAD HAFIZZUL BIN ABDUL MANAP(A20EC0211)**

**DATE : 28 JAN 2021**

## Lab #3

### **Identifying the Properties of a Synchronous Counter**

#### **A. Aims**

- 1) Expose the student with experience on constructing synchronous counter circuit using Flip-Flop IC, Basic Gate ICs, Breadboard and ETS-5000 Digital Kit.
- 2) Promote critical thinking among students by analysing the given circuit and identifying the behaviour of the digital circuit.

#### **B. Objectives**

The objectives of this lab activity are to:

- 1) Implement a synchronous counter circuit into physical circuit using Breadboard, Flip-Flops, Basic Gates and Switches.
- 2) Completing the next-state table of the counter circuit.
- 3) Sketch the state diagram of the counter circuit.
- 4) Identify the properties of the counter.

#### **C. Materials And Equipment**



Materials and equipment required for this lab are as follows:

Item Name	Number of Item
1. Breadboard	1
2. 7408 Quad 2-Input AND	1
3. 7404 Hex Inverter	1
4. 7432 Quad 2-input OR	1
5. 7476 Dual J-K Flip Flop	1
6. ETS-5000 Digital Kit	1

#### D. Preliminary Works

- 1) Determine the logic level for each input combinations in Table 1 so that the desired result can be realized.

Table 1

Desired Result			J	K	CLK	Q
Set initial value $Q = 1$	0	1	X	X	--	1
Output Q stays the same	1	1	0	0	↓	1
Output Q become 0, no change in asynchronous input	1	1	0	1	↓	0
Output Q is not the previous Q	1	1	1	0	↓	1
RESET Q	1	1	0	1	↓	0
SET Q	1	1	1	0	↓	1

- 2) Answer all questions.

- a) Which state that JK flip-flop has, but not on SR flip-flop.

- Toggle state

---

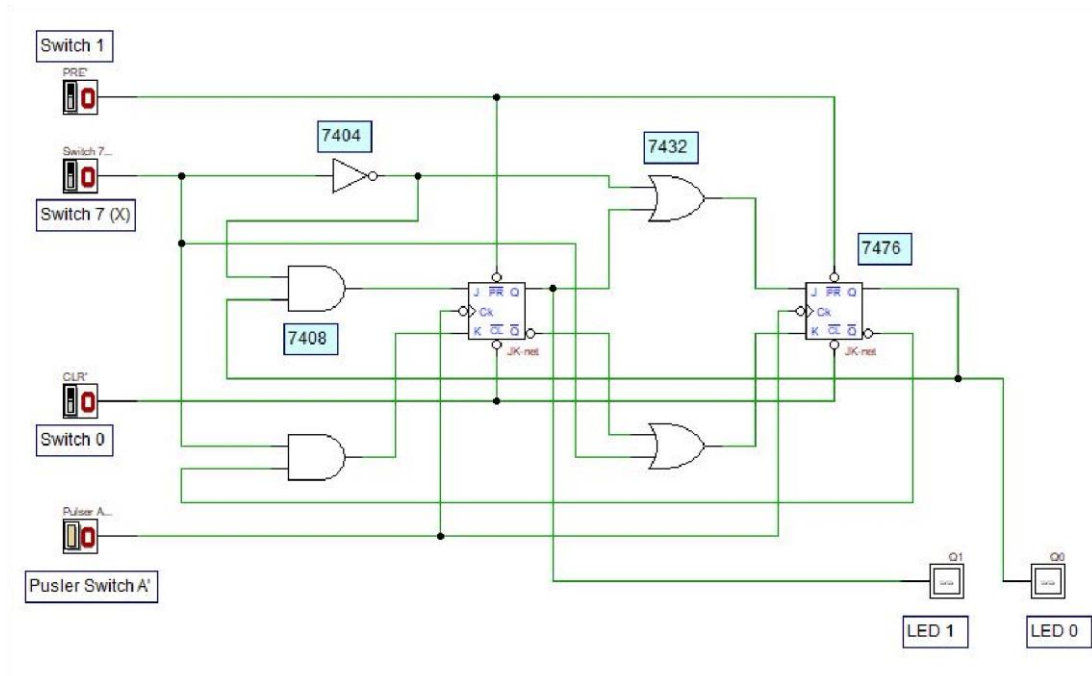
- b) Identify whether the JK flip flop in 7476, is a positive-edge triggered or negative-edge triggered flip flop.

- Negative edge triggered

---

## E. Lab Activities

- 1) You are given a counter circuit as shown in Figure 4.



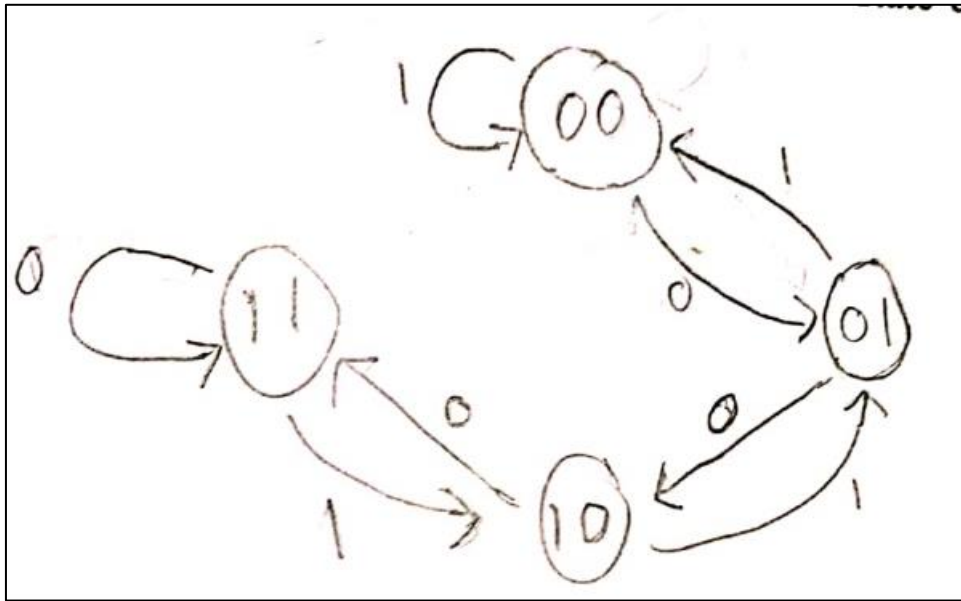
**Figure 4: A Synchronous Counter Circuit**

- 2) By using all materials and equipment's listed in section C, construct the physical circuit of Figure 4. (Make sure all ICs are connected to Vcc and GND).
- 3) Investigate the behaviour of the counter by observing the next state of the counter for all combination of *Present State* and *X* values. Complete the *NextState* table of the counter in Table 2. Ensure the Switch 0 is in HIGH state. (0=LOW, 1=HIGH)

**Table 2**

Switch 7	Present State		Next State	
X	Q1 LED 1	Q0 LED 0	Q1 LED 1	Q0 LED 0
0	0	0	0	1
0	0	1	1	0
0	1	0	1	1
0	1	1	1	1
1	0	0	0	0
1	0	1	0	0
1	1	0	0	1
1	1	1	1	0

4) By referring to the *Next-State* in Table 2, sketch the state diagram of the counter.



5) By referring to the *Next-State* in Table 2 and the state diagram in (4), answer all questions.

a) What is the main indicator to decide that the counter is a synchronous counter?

- Both flip flop is connected to the same clock source or common clock source which is pulse switch A.

b) How many states are available for the counter and what are they?

- There are 4 states available which are 00, 01, 10, 11

c) What is the function of Switch 7 (X) in the circuit?

- To control the count direction either up or down.

d) What is the function of Switch 0 and Switch 1 in the circuit?

- Act as asynchronous input switch and to initialize (reset/set) the counter with a number either 00 or 11.

e) Is the counter a saturated counter or recycle counter?

- The counter is saturated counter

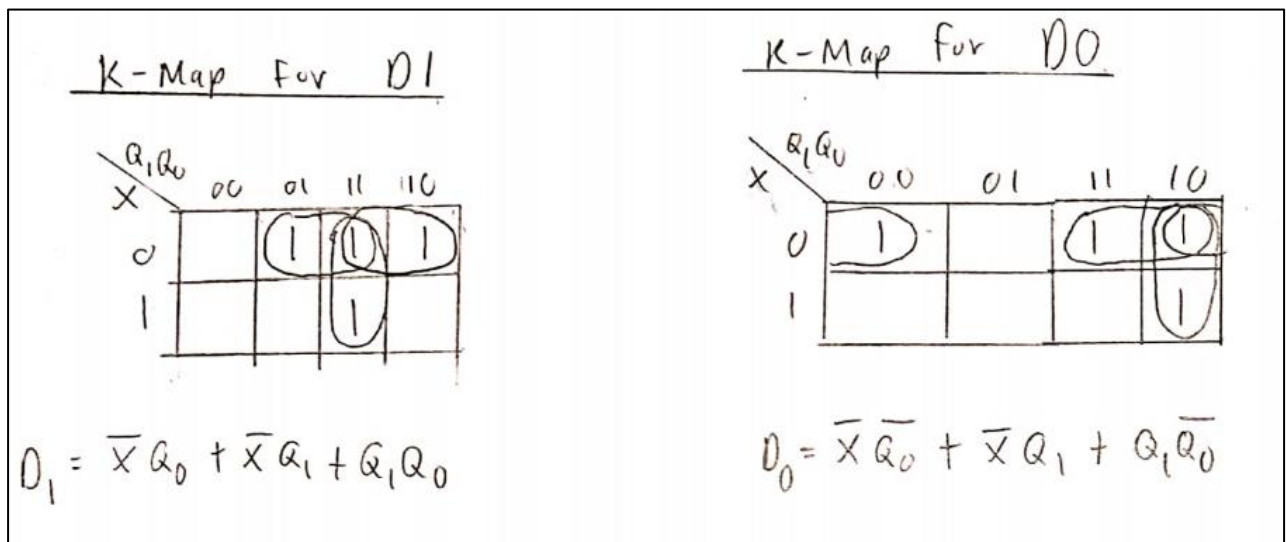
6) Referring to state diagram in 4, draw and built a synchronous counter using D flip-flop.

a) Built the next state and transition table using the header in Table 3

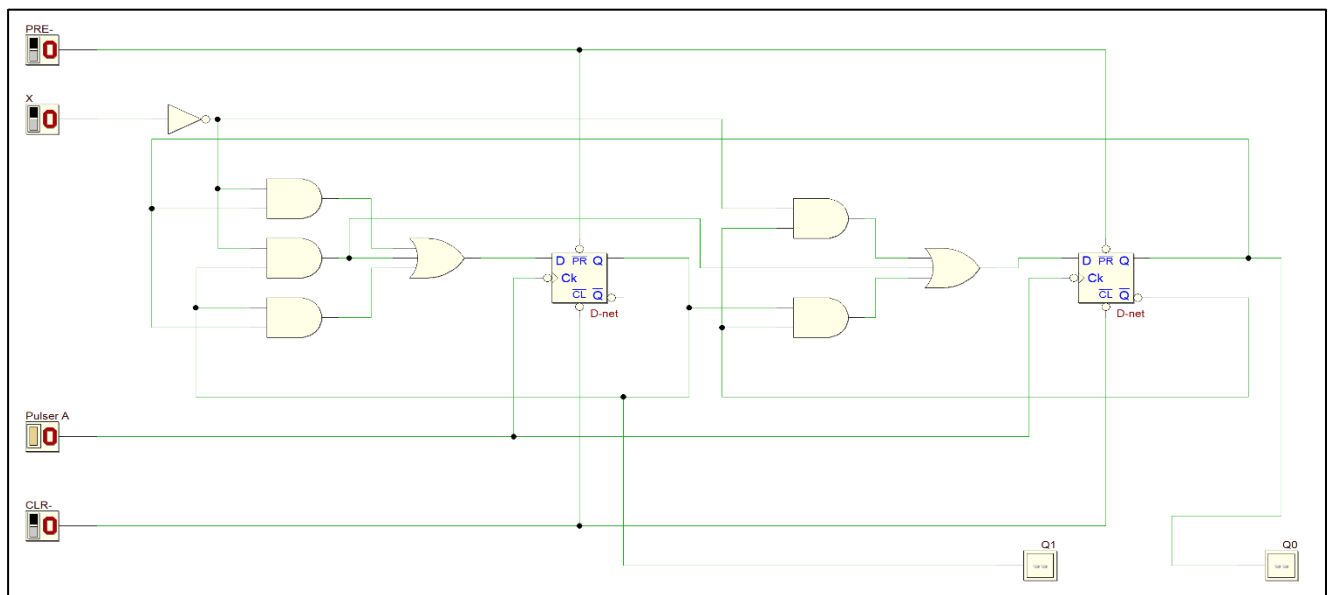
Input X	Present State		Next State		D FF Transition	
	Q1	Q0	Q1+	Q0+	D1	D0

Input X	Present State		Next State		D FF Transition	
	Q1	Q0	Q1+	Q0+	D1	D0
0	0	0	0	1	0	1
0	0	1	1	0	1	0
0	1	0	1	1	1	1
0	1	1	1	1	1	1
1	0	0	0	0	0	0
1	0	1	0	0	0	0
1	1	0	0	1	0	1
1	1	1	1	0	1	0

- b) Get the optimized Boolean expression.

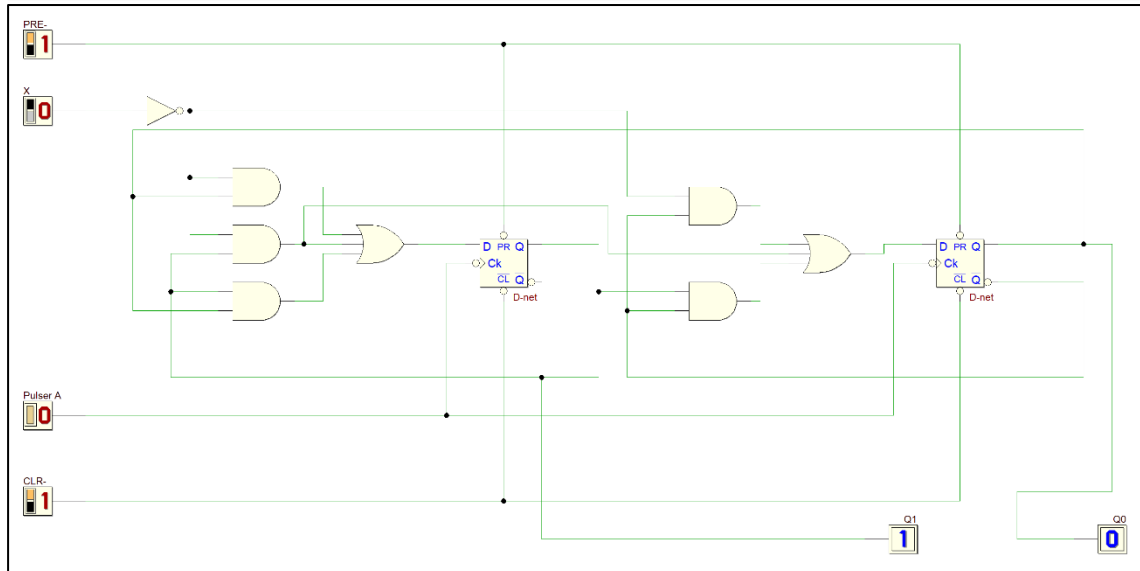
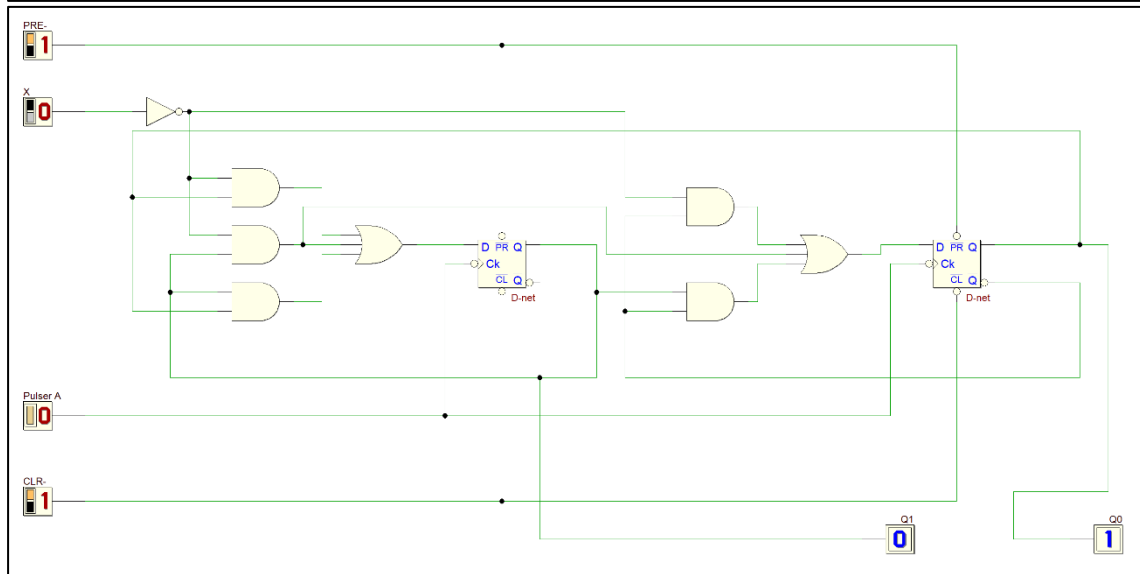
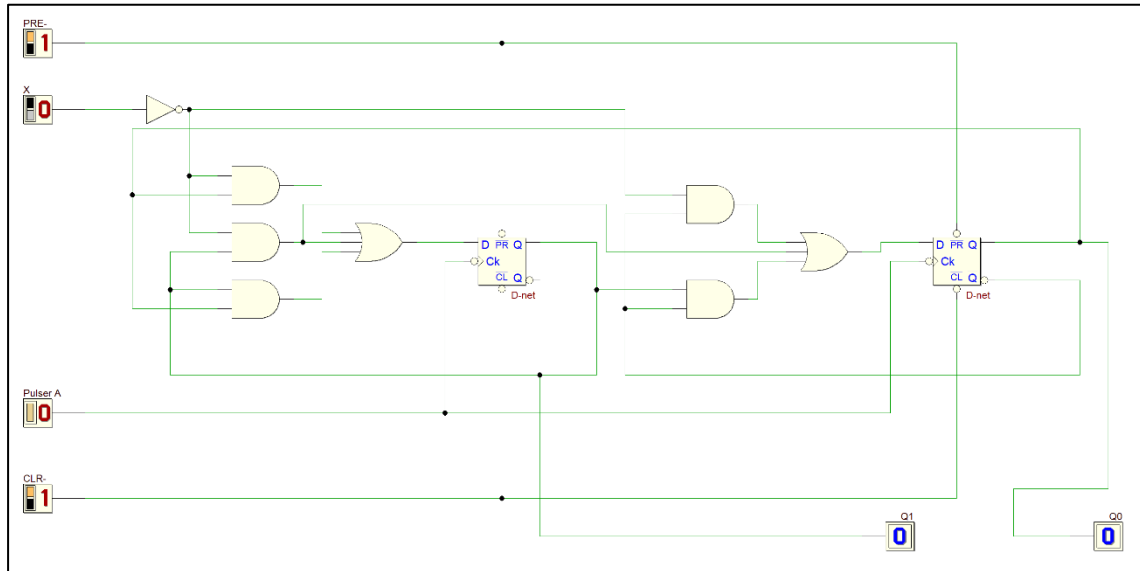


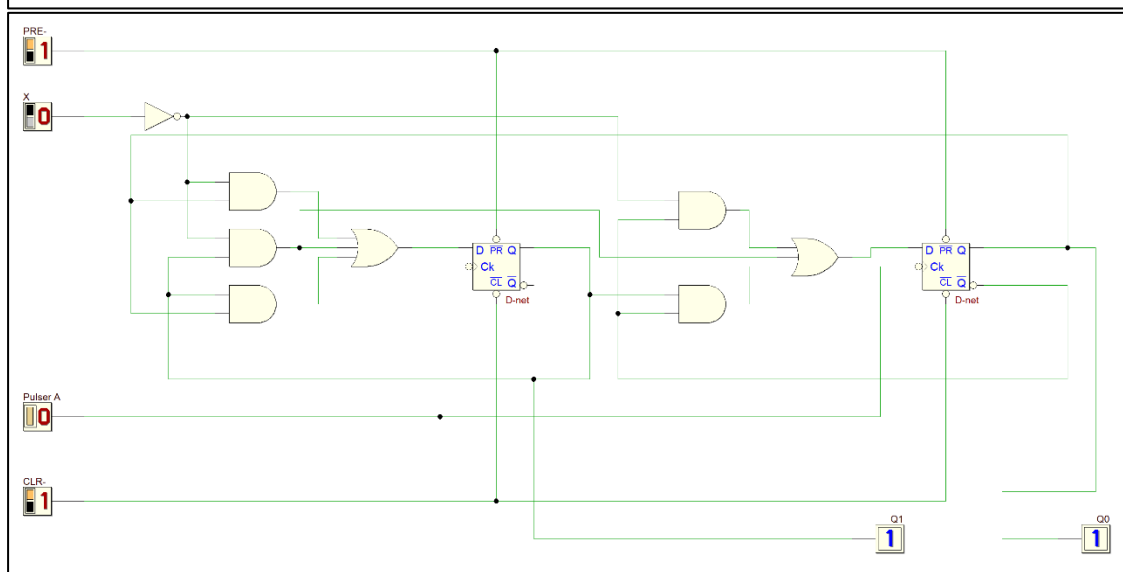
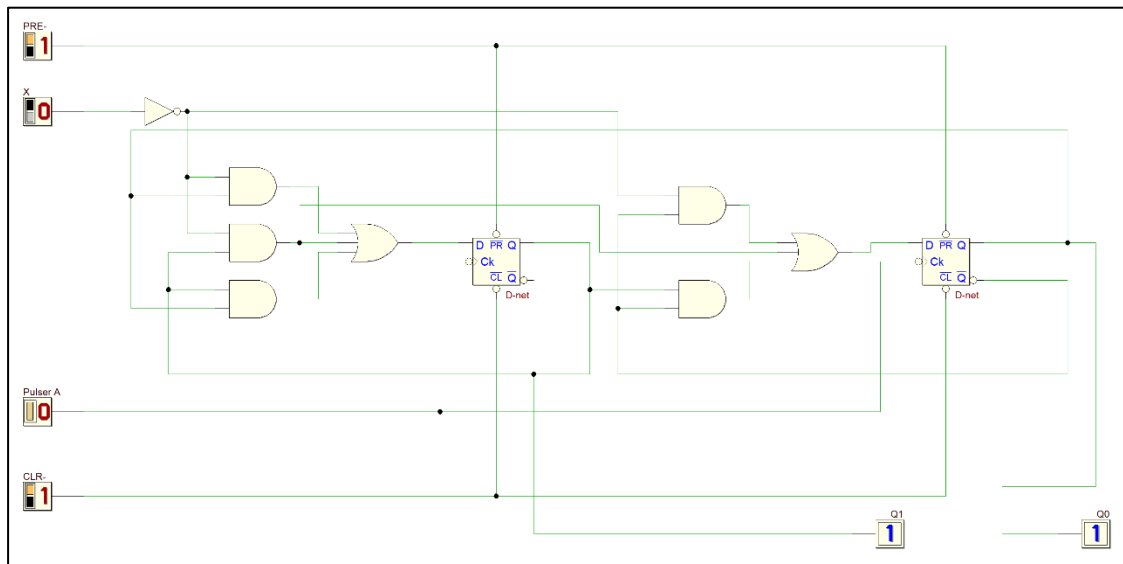
- c) Draw the complete final circuit design in Deeds.



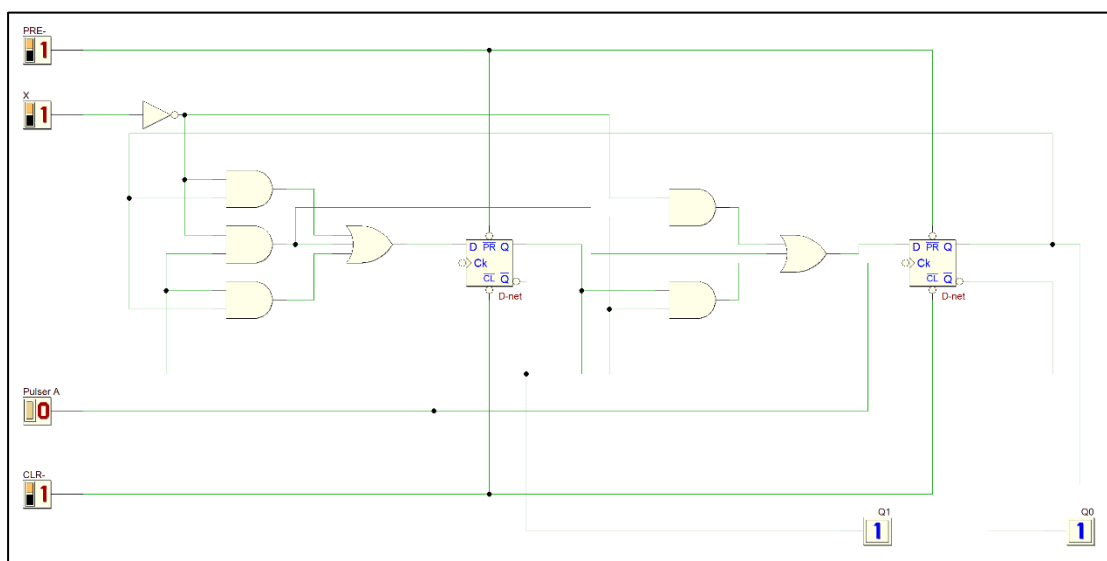
- d) Simulate the circuit to prove that your Table 3 is correct.

When input  $X = 0$

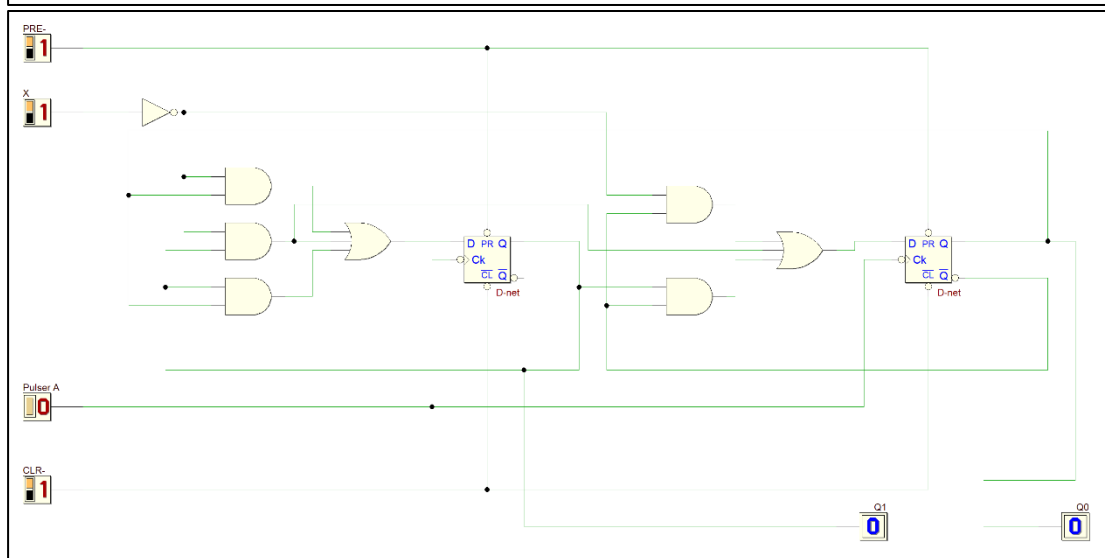
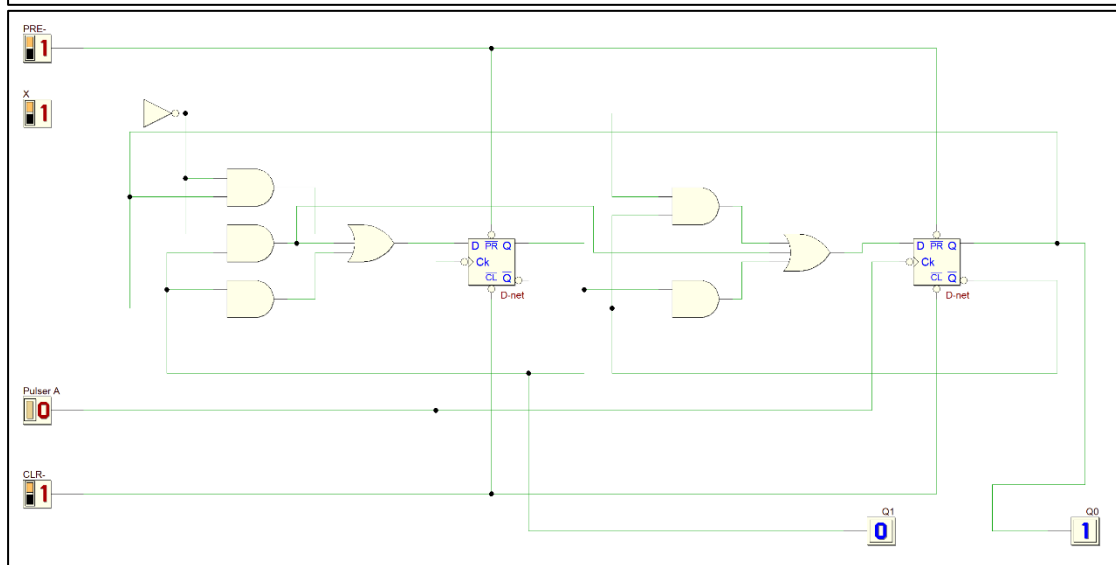
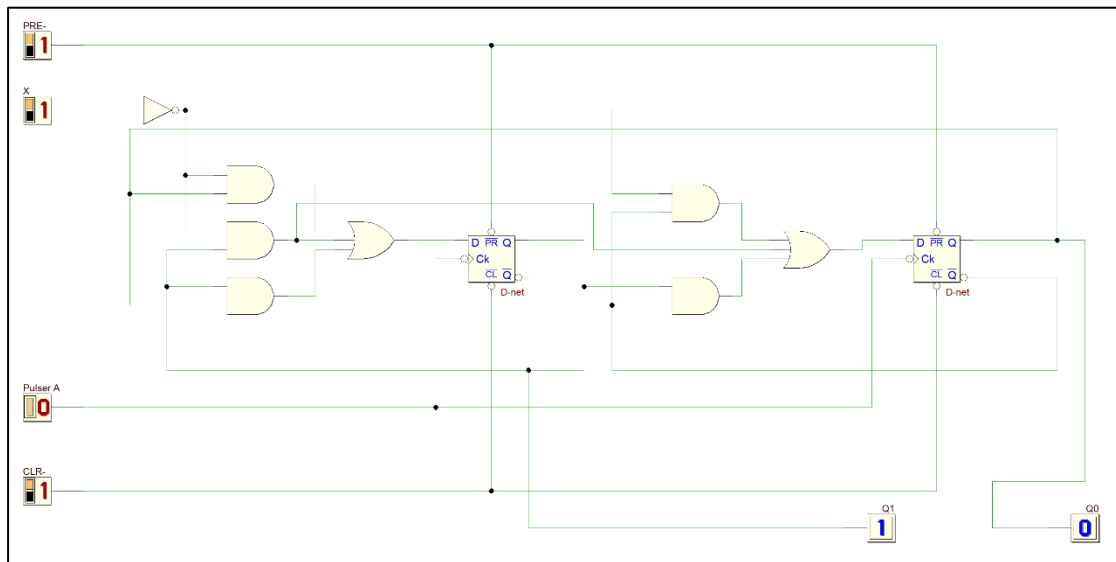


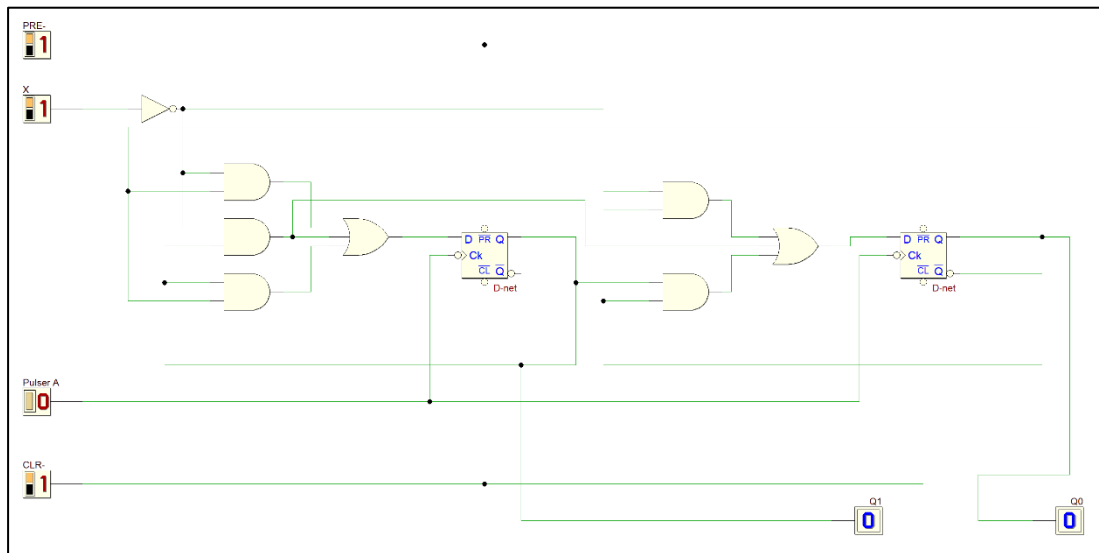


When Input X = 1







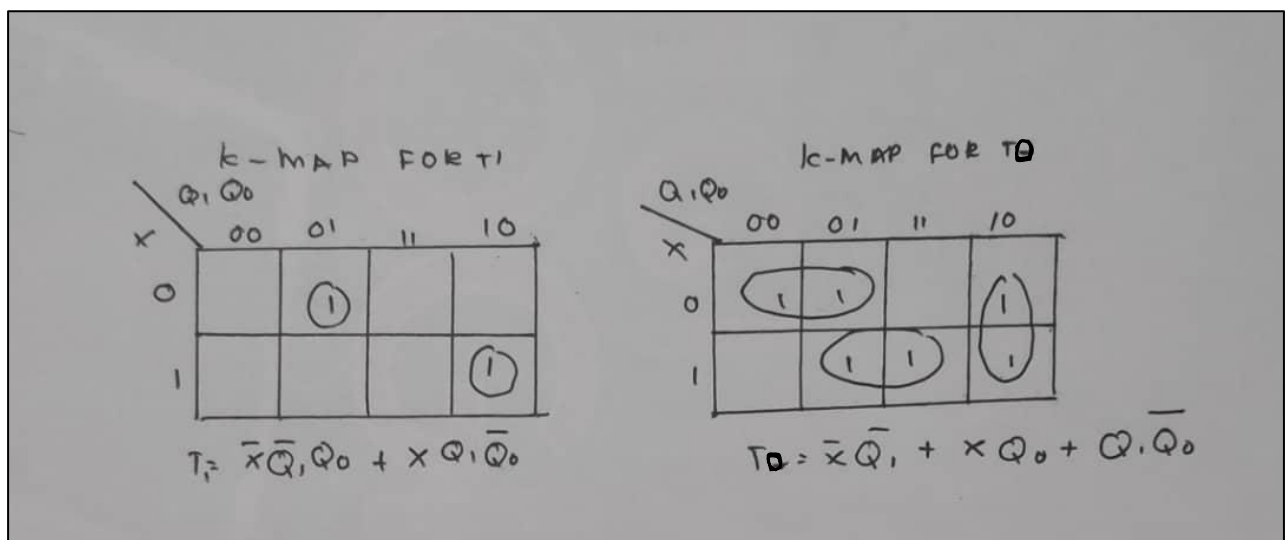


7) Repeat steps in Q(6) using T flip-flop.

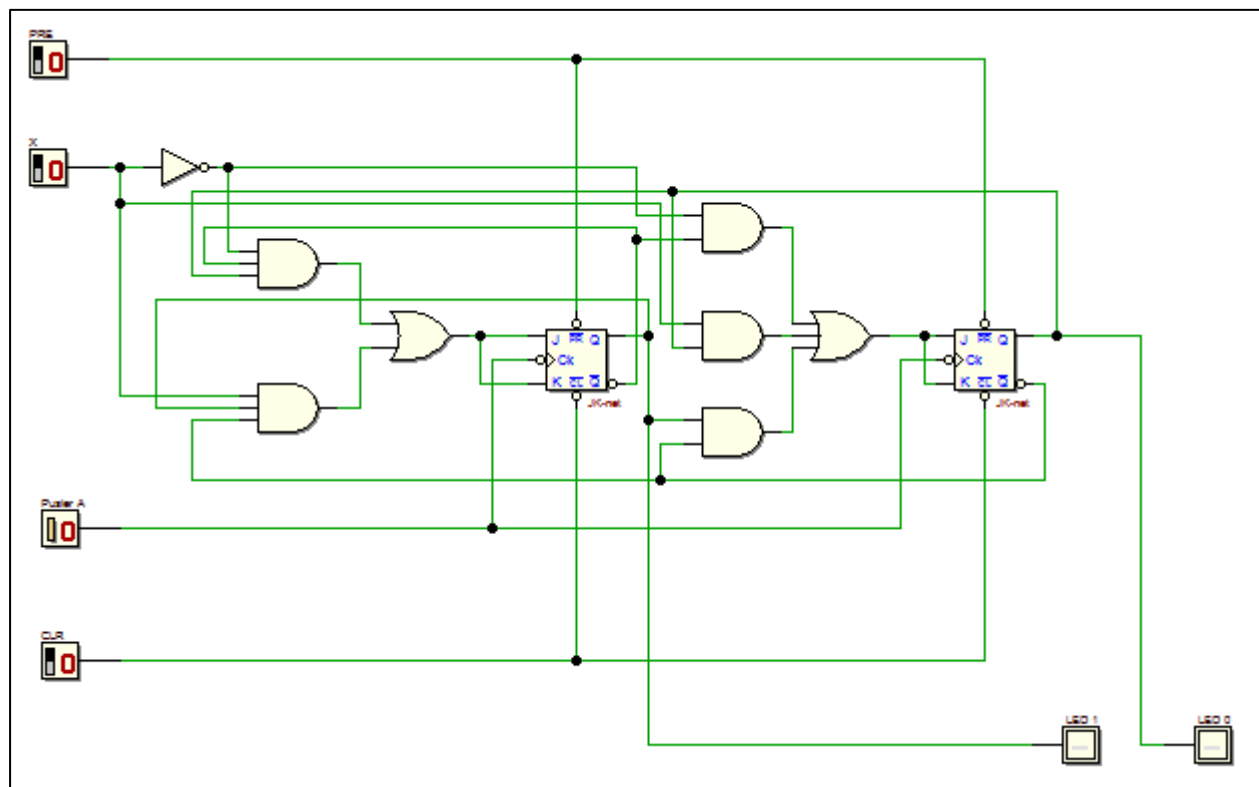
a) Built the next state and transition table

Input X	Present State		Next State		T FF Transition	
	Q1	Q0	Q1+	Q0+	T1	T0
0	0	0	0	1	0	1
0	0	1	1	0	1	1
0	1	0	1	1	0	1
0	1	1	1	1	0	0
1	0	0	0	0	0	0
1	0	1	0	0	0	1
1	1	0	0	1	1	1
1	1	1	1	0	0	1

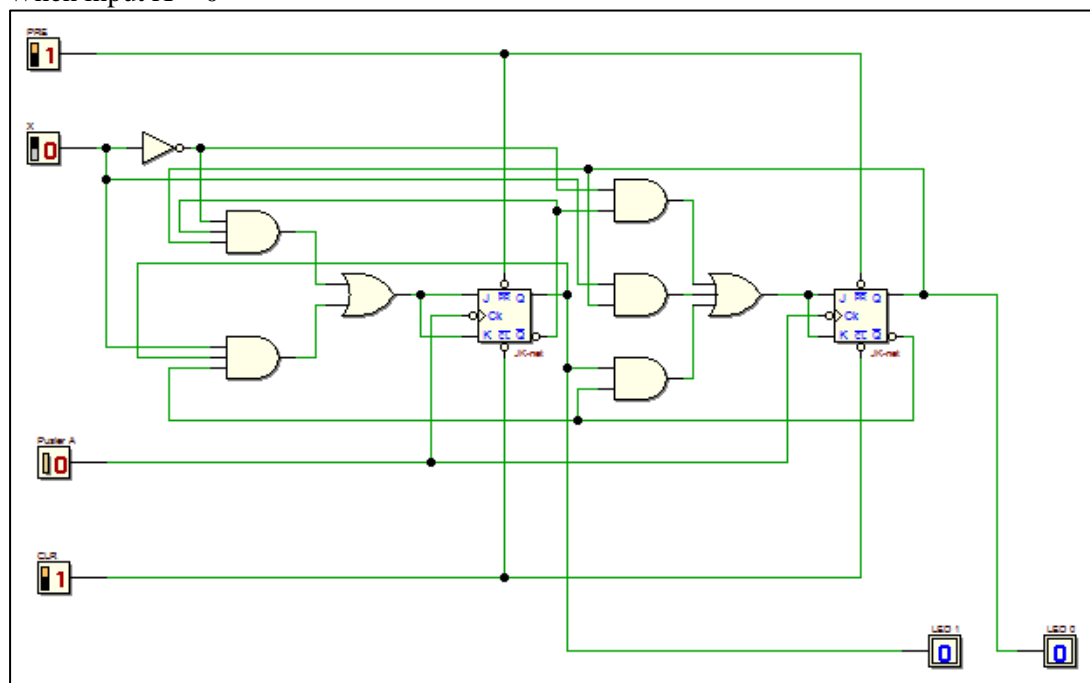
b) Get the optimized Boolean expression.



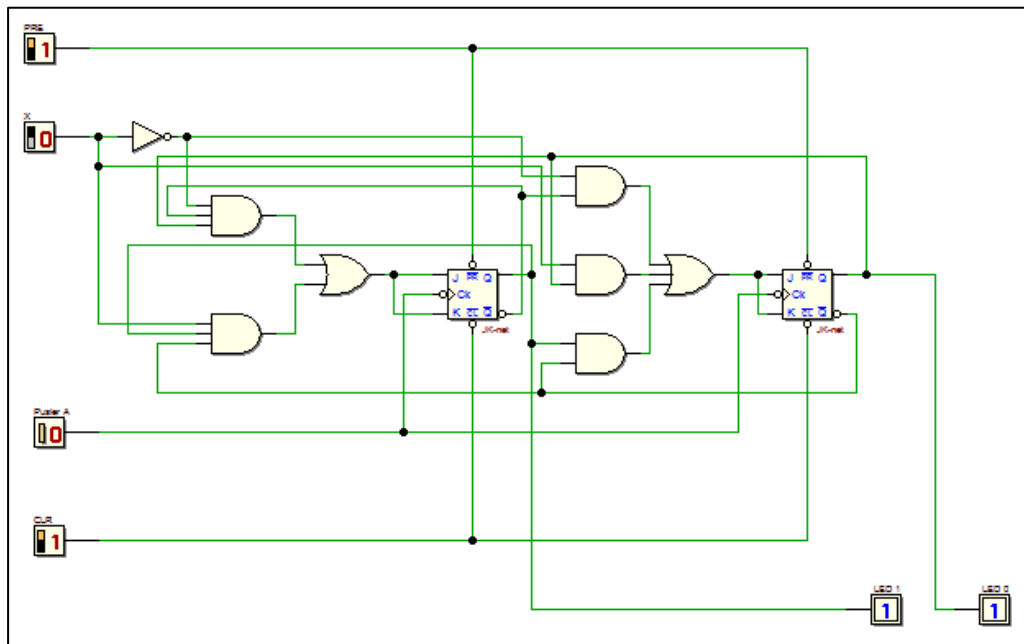
- c) Draw the complete final circuit design in Deeds.



- d) Simulate the circuit to prove that your Table 3 is correct.  
When input  $X = 0$







When input X = 1

