

SCSI1013: Discrete Structure


CHAPTER 3

[Part 4]

PROBABILITY THEORY

2017/2018 – SEM. 1 : nzah@utm.my


innovative • entrepreneurial • global www.utm.my



Probability Theory

- The theory of probability plays a crucial role in making inferences.
- Probability measures how likely something is to occur.
- Probability is the ratio of the number of favourable cases to the total number of cases, assuming that all of the various cases are equally possible.


innovative • entrepreneurial • global 2 www.utm.my



Terminology

Experiment	<ul style="list-style-type: none"> • A process to yield an outcome. • Example: Rolling a dice.
Sample space	<ul style="list-style-type: none"> • A set of all possible outcomes from an experiment. • For a dice, that would be values 1 to 6.
Element	<ul style="list-style-type: none"> • An item in the sample space.
Event	<ul style="list-style-type: none"> • An outcome or combination outcomes from an experiment. • If you rolled a 4 on the dice, the event is the 4.


innovative • entrepreneurial • global
3
www.utm.my



How to Compute Probability

- We assign a probability weight $P(x)$ to each element of the sample space.
- Weight represents what we believe to be relative likelihood of that outcome.
- There are two rules in assigning weight:
 - i) The weight must be **non-negative** numbers.
 - ii) The **sum** of the weights of all the elements in a sample space must be 1.

innovative • entrepreneurial • global
4
www.utm.my




...cont'd

- Let E be an event.
- The probability of E , $P(E)$ is

$$P(E) = \sum_{x \in E} P(x)$$

- We read this as " $P(E)$ equals the sum, over all x such that x is in E , of $P(x)$ "

innovative • entrepreneurial • global 5 www.utm.my



Probability Axioms

Let S be a sample space. A probability function P from the set of all events in S to the set of real numbers satisfies the following three axioms:

For all events A and B in S ,

1. $0 \leq P(A) \leq 1$
2. $P(\emptyset) = 0$ and $P(S) = 1$
3. If A and B are disjoint, the $P(A \cup B) = P(A) + P(B)$

A function P that satisfies these axioms is called a **probability distribution** or a **probability measure**.

innovative • entrepreneurial • global 6 www.utm.my

Complementary Probabilities

- The complement of an event A in a sample space S is the set of all outcomes in S except those in A .

$$P(A') = 1 - P(A)$$

- **Example:**

Let the probability for getting a prize in a lucky draw is 0.075. Thus, the probability of *not* getting a prize in a lucky draw is $1 - 0.075 = 0.925$.

The Uniform Probability Distribution

- The probability of an event occurring is:

$$P(E) = \frac{|E|}{|S|}$$

where:

- **E** is the set of desired events.
- **S** is the set of all possible events.
- Note that $0 \leq |E| \leq |S|$:
 - Thus, the probability will always be between 0 and 1.
 - An event that will never happen has probability 0.
 - An event that will always happen has probability 1.

Example 1

A coin is flipped four times and the outcome for each flip is recorded.

- i) List all the possible outcomes in the sample space.
- ii) Find the event (E) that contain only the outcomes in which 1 tails appears.

Solution

- The list of all possible outcomes in the sample space. [heads(H), tails (T)]

HHHH	HHHT	HHTH	
HTHH			
THHH	HHTT	HTTH	HTHT
THHT	TTHH	THTH	HTTT
TTHT	TTTH	THTT	TTTT

- The event E that contains only the outcomes in which 1 tails appears.

$$E = \{ HHHT, HHTH, HTHH, THHH \}$$

Example 2

Two fair dice are rolled. Find the event (E) that the sum of the numbers on the dice is 7.

Solution

- The number on top face of each die is 1,2,3,4,5,6.
- Let $A = \{1, 2, 3, 4, 5, 6\}$
- The sample space is,
 $S = \{ (a, b) \in A \times A \mid a, b \in A \}$
- The event E that the sum of the numbers on the dice is 7 is,

$$E = \{(1, 6), (6, 1), (2, 5), (5, 2), (3, 4), (4, 3)\}$$

Example 3

Suppose that a coin is flipped and a dice is rolled.

- i) List the members of the sample space.

- ii) List the members of the event “the coin shows a head and the dice shows a number less than 4”.

Solution

- The sample space,
 $(H,1) (H,2) (H,3) (H,4) (H,5) (H,6)$
 $(T,1) (T,2) (T,3) (T,4) (T,5) (T,6)$

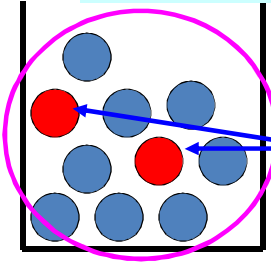
- The members of the event “the coin shows a head and the die shows a number less than 4,
 $(H,1) (H,2) (H,3)$

----- Dr. Ramani Mani

UTM
UNIVERSITI TEKNOLOGI MALAYSIA

Example 4

▶ Question: What is the probability of picking a red marble out of a bowl with 2 red and 8 blue?

$$p(\text{red}) = \frac{\text{outcomes in which red occurs}}{\text{total number of outcomes}}$$


There are 2 outcomes that are red

There are 10 total possible outcomes

$$p(\text{red}) = 2 / 10 = 0.2$$

innovative • entrepreneurial • global 15 www.utm.my

UTM
UNIVERSITI TEKNOLOGI MALAYSIA

Example 5

Two fair dice are rolled. What is the probability that the sum of the numbers on the dice is 10?

innovative • entrepreneurial • global 16 www.utm.my

Solution

- The size of sample space is,
 $6 \times 6 = 36$
- 3 possible ways to obtain the sum of 10,
(4,6), (5,5), (6,4)
- The probability is, $\frac{3}{36} = \frac{1}{12}$

Example 6

Five microprocessors are randomly selected from a lot of 1000 microprocessors among which 20 are defective. Find the probability of obtaining no defective microprocessors.

Solution

- There are $C(1000,5)$ ways to select 5 microprocessors among 1000.
- There are $C(980,5)$ ways to select 5 good microprocessors since there are $1000-20=980$ good microprocessors .
- The probability is, $\frac{C(980,5)}{C(1000,5)} = 0.903735781$

Example 7

There are exactly 3 red balls in a bucket of 15 balls. If we choose 4 balls at random, what is the probability that we do not choose a red ball?

Solution

- There are $C(15,4)$ ways to select 4 balls among 15.
- If we do not choose a red ball, there are $C(12,4)$ ways to select 4 balls among the remaining 12 balls.
- The probability is,
$$\frac{C(12,4)}{C(15,4)} = \frac{495}{1365} = \frac{33}{91}$$

Example 8


- There are 5 red balls and 4 white balls in a box.
- 4 balls are selected at random from these balls.
- Find the probability that 2 of the selected balls will be red and 2 will be white.

Solution

- The size of sample space is $C(9,4)$
- Select 2 red balls, $C(5,2)$ ways
- Select 2 white balls, $C(4,2)$ ways
- The probability is, $\frac{C(5,2).C(4,2)}{C(9,4)} = \frac{(10)(6)}{126} = \frac{10}{21}$

Example 9

Suppose that a die is biased (or loaded) so that the number 2 through 6 are equally likely to appear, but that 1 appears three times as likely as any other number to appear.

 **UTM**
UNIVERSITI TEKNOLOGI MALAYSIA

Solution


- To model this situation, we should have
 $P(2) = P(3) = P(4) = P(5) = P(6)$
- and
 $P(1) = 3P(2)$

$$P(1) + P(2) + P(3) + P(4) + P(5) + P(6) = 1$$

$$3P(2) + P(2) + P(2) + P(2) + P(2) + P(2) = 1$$

$$8P(2) = 8$$

innovative • entrepreneurial • global
25
www.utm.my

 **UTM**
UNIVERSITI TEKNOLOGI MALAYSIA

Solution (cont'd)

- Therefore,
 $P(2) = 1/8$
 $P(2) = P(3) = P(4) = P(5) = P(6) = 1/8$
- and $P(1) = 3/8$

innovative • entrepreneurial • global
26
www.utm.my

Example 10

Refer to [Example 9](#), what is the probability to obtain an **odd** number?

Solution:

$$P(1) + P(3) + P(5) = 3/8 + 1/8 + 1/8 = 5/8$$

Example 11

- What is the probability that if a fair coin is tossed 6 times you will get
 - Less than 2 heads
 - At least 2 heads

Solution

- The number of possible outcome is:

$$2 \times 2 \times 2 \times 2 \times 2 \times 2 = 2^6 = 64$$
- Let A be the event that less than 2 H's are observed,

$$A = \{ TTTTTT, HTTTTT, THTTTT, TTHTTT, TTTHTT, TTTTHT, TTTTTH \}$$
Then, $P(A) = 7/64$
- Let B be the event that at least 2 H's are observed,

$$P(B) = 1 - (7/64) = 57/64$$

Exercise #1

A bag contains 3 red balls and 3 blue balls. Each red ball is valued as 4 and blue ball as 2.

- What is probability of getting 4 balls with the total value is 10?
- What is probability of getting total value of 6 with at most 3 balls?

Probability of a General Union of Two Events

If S is any sample space and A and B are any events in S , then

$$P(A \cup B) = P(A) + P(B) - P(A \cap B)$$

Example 12

In a math class of 30 students, 17 are boys and 13 are girls. On a unit test, 4 boys and 5 girls made an A grade. If a student is chosen at random from the class, what is the probability of choosing a girl or an A student?

Solution:



Probabilities: $P(\text{girl or A}) = P(\text{girl}) + P(A) - P(\text{girl and A})$

$$\begin{aligned} &= \frac{13}{30} + \frac{9}{30} - \frac{5}{30} \\ &= \frac{17}{30} \end{aligned}$$

Example 13

Two fair dice are rolled. What is the probability of getting doubles (2 dice showing the same number) or sum of 6?

Solution

Step 1: Find the probability of getting double (2 dice showing the same number):

- Let A denote the event “get doubles”
- Doubles can be obtained in 6 ways, (1,1), (2,2), (3,3), (4,4), (5,5), (6,6)
- $P(A) = 6/36 = 1/6$

Solution (cont.)

Step 2: Find the probability of getting a sum of 6:

- Let B denote the event "get a sum of 6".
- Sum of 6 can be obtained in 5 ways
 $(1,5), (2,4), (3,3), (4,2), (5,1)$
- $P(B) = 5/36$

Solution (cont.)

Step 3: Find the intersection of two events:

- The event $A \cap B$ is "get doubles and get a sum of 6"
- Only 1 way, $(3,3)$
- $P(A \cap B) = 1/36$

Solution (cont.)


Step 4: Find the union of two events:

- The probability of getting doubles or a sum of 6 is,

$$\begin{aligned}
 P(A \cup B) &= P(A) + P(B) - P(A \cap B) \\
 &= \frac{1}{6} + \frac{5}{36} - \frac{1}{36} = \frac{5}{18}
 \end{aligned}$$

Example 14

- Suppose that a student is selected at random among 90 students, where 35 are over 100 pounds, 20 are boys, and 15 are over 100 pounds and boys.
- What is the probability that the student selected is over 100 pounds or a boy?



Solution

- Let A denote the event "the student is over 100 pounds".
 $P(A) = 35/90$
- Let B denote the event "the student is a boy".
 $P(B) = 20/90$


- $P(A \cap B) = 15/90$
- The probability that the student selected is over 100 pounds or a boy,

$$P(A \cup B) = \frac{35}{90} + \frac{20}{90} - \frac{15}{90} = \frac{40}{90}$$

innovative • entrepreneurial • global


41

www.utm.my



Exercise #2

On New Year's Eve, the probability of a person having a car accident is 0.09. The probability of a person driving while intoxicated is 0.32 and probability of a person having a car accident while intoxicated is 0.15. What is the probability of a person driving while intoxicated or having a car accident?



innovative • entrepreneurial • global

42

www.utm.my

Exercise #3

Mira is going to graduate from a computer science department in a university by the end of the semester. After being interviewed at two companies she likes, she assess that her probability of getting an offer from company A is 0.8, and her probability of getting an offer from company B is 0.6. If she believes that the probability that she will get offers from both companies is 0.5, what is the probability that she will get either from company A or company B (or both)?

Mutually Exclusive Events

- Two events are mutually exclusive if they cannot occur at the same time.

- Events A and B are mutually exclusive if

$$A \cap B = \emptyset$$

- If A and B are mutually exclusive events,

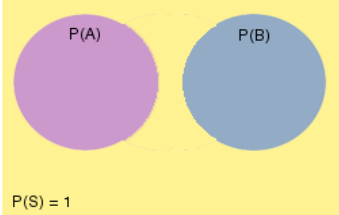
$$P(A \cup B) = P(A) + P(B)$$

UTM
UNIVERSITI TEKNOLOGI MALAYSIA

Mutually Exclusive Events (cont.)

Mutually Exclusive Events

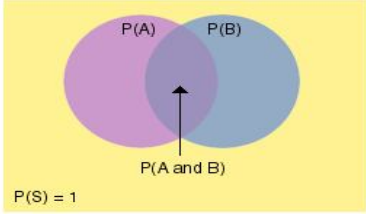
Two events are mutually exclusive if they cannot occur at the same time (i.e., they have no outcomes in common).



In the Venn Diagram above, the probabilities of events A and B are represented by two disjoint sets (i.e., they have no elements in common).

Non-Mutually Exclusive Events

Two events are non-mutually exclusive if they have one or more outcomes in common.



In the Venn Diagram above, the probabilities of events A and B are represented by two intersecting sets (i.e., they have some elements in common).

Note: In each Venn diagram above, the [sample space](#) of the experiment is represented by S, with $P(S) = 1$.

innovative • entrepreneurial • global
47
www.utm.my


UTM
UNIVERSITI TEKNOLOGI MALAYSIA

Example 15

Experiment 1: A single card is chosen at random from a standard deck of 52 playing cards. What is the probability of choosing a 5 or a king?

Possibilities:

1. The card chosen can be a 5.
2. The card chosen can be a king.





Experiment 2: A single card is chosen at random from a standard deck of 52 playing cards. What is the probability of choosing a club or a king?

Possibilities:


1. The card chosen can be a club.
2. The card chosen can be a king.
3. The card chosen can be a king and a club (i.e., the king of clubs).

innovative • entrepreneurial • global
48
www.utm.my

- In **Experiment 1**, the card chosen can be a five or a King, but not both at the same time. These events are **mutually exclusive**.
- In **Experiment 2**, the card chosen can be a club, or a King, or both at the same time. These events are **not mutually exclusive**.

innovative • entrepreneurial • global 49 www.utm.my



Example 16

Question: Two fair dice are rolled. Find the probability of getting doubles or the sum of 5?

Solution:

- Let A denote the event "get doubles"
- Let B denote the event "get the sum of 5"
- A and B are mutually exclusive (you cannot get doubles and the sum of 5 simultaneously)

- $A = \{(1,1) (2,2) (3,3) (4,4) (5,5) (6,6)\}$
 $P(A) = 6/36 = 1/6$
- $B = \{(1,4) (2,3) (3,2) (4,1)\}$
 $P(B) = 4/36 = 1/9$

- The probability of getting doubles or the sum of 5 is,
 $P(A \cup B) = 1/6 + 1/9 = 5/18$

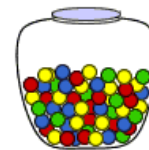
innovative • entrepreneurial • global 50 www.utm.my

Example 17

A glass jar contains 1 **RED**, 3 **GREEN**, 2 **BLUE** and 4 **YELLOW** marbles. If a single marble is chosen at random from the jar, what is the probability that it is **YELLOW** or **GREEN** ?

Solution:

$$\begin{aligned}
 \text{Probabilities: } P(\text{yellow}) &= \frac{4}{10} \\
 P(\text{green}) &= \frac{3}{10} \\
 P(\text{yellow or green}) &= P(\text{yellow}) + P(\text{green}) \\
 &= \frac{4}{10} + \frac{3}{10} \\
 &= \frac{7}{10}
 \end{aligned}$$



Conditional Probability

- Let A and B be events, and assume that $P(B) > 0$.
- The conditional probability of A given B is,

$$P(A|B) = \frac{P(A \cap B)}{P(B)}$$

Definition: The **conditional probability** of an event A in relationship to an event B is the probability that event A occurs given that event B has already occurred. The notation for conditional probability is $P(A|B)$ [pronounced as *the probability of event A given B*].

Example 18

Question: Suppose that we roll 2 fair dice. What is the probability of getting a sum of 10?

Solution:

Sample space

(1,1)	(2,1)	(3,1)	(4,1)	(5,1)	(6,1)
(1,2)	(2,2)	(3,2)	(4,2)	(5,2)	(6,2)
(1,3)	(2,3)	(3,3)	(4,3)	(5,3)	(6,3)
(1,4)	(2,4)	(3,4)	(4,4)	(5,4)	(6,4)
(1,5)	(2,5)	(3,5)	(4,5)	(5,5)	(6,5)
(1,6)	(2,6)	(3,6)	(4,6)	(5,6)	(6,6)

- The probability of getting a sum of 10 is $1/12$.

Example 19

Question: Refer to **Example 18**, what is the probability of getting a sum of 10 given that at least one die is 5?

Solution:

- Let A denote the event "getting a sum of 10".
- Let B denote the event "at least one die is 5".
- Thus, $P(A \cap B) = 1/36$ and $P(B) = 11/36$
- The probability of getting a sum of 10 given that at least 1 die is 5 is,

$$P(A|B) = \frac{P(A \cap B)}{P(B)} = \frac{1/36}{11/36} = \frac{1}{11}$$

Example 20

Suppose that we roll 2 fair dice. Find the probability of **getting a sum of 7, given that the digit in the first die is greater than in the second.**

Solution

- The sample space S consists of $6 \times 6 = 36$ outcomes.
- Let A be the event "the sum of digits of the 2 dice is 7"

$$A = \{ (6,1), (5,2), (4,3), (3,4), (2,5), (1,6) \}$$

Solution (cont.)

- Let B be the event "the digit in the first die is greater than the second"

$$B = \{ (6,1), (6,2), (6,3), (6,4), (6,5), (5,1), (5,2), (5,3), (5,4), (4,1), (4,2), (4,3), (3,1), (3,2), (2,1) \}$$

$$P(B) = 15/36$$

Solution (cont.)

- Let C be the event "the sum of digits of the 2 dice is 7 but the digit in the first die is greater than the second"

$$C = \{ (6,1), (5,2), (4,3) \} = A \cap B$$

$$P(A \cap B) = 3/36$$

Solution (cont.)

- The probability of getting a sum of 7, given that the digit in the first die is greater than in the second is,

$$P(A|B) = \frac{P(A \cap B)}{P(B)} = \frac{(3/36)}{(15/36)} = \frac{1}{5}$$

Example 21

Weather records show that the probability of high barometric pressure is 0.85 and the probability of rain and high barometric pressure is 0.15. What is the probability of rain given high barometric pressure?

Solution:

- Let **H** denote the event "rain".
- Let **T** denote the event "high barometric pressure".
- The probability of rain given high barometric pressure is,

$$P(H|T) = \frac{P(H \cap T)}{P(T)} = \frac{0.15}{0.85} = 0.1765$$

Exercise #4

The probability that a doctor correctly diagnose a particular illness is 0.7. Given that the doctor makes an incorrect diagnosis, the probability that the patient files a lawsuit is 0.9. What is the probability that the doctor makes an incorrect diagnosis and the patient sues?

Chain Rule for Conditional Probability

- The chain rule for conditional probability with n events is as follows:

$$P(A_1 \cap A_2 \cap \dots \cap A_n) = P(A_1)P(A_2|A_1)P(A_3|A_2, A_1) \dots P(A_n|A_{n-1}, A_{n-2}, \dots, A_1)$$

Example 22

Mr. Basyir needs two students to help him with a science demonstration for his class of 18 girls and 12 boys. He randomly choose one student who comes to the front of the room. He then chooses a second student from those still seated. What is the probability that both students chosen are girls?

Solution:

$$\begin{aligned}
 P(\text{Girl1 and Girl2}) &= P(\text{Girl1}) \text{ and } P(\text{Girl2}|\text{Girl1}) \\
 &= \frac{18}{30} \times \frac{17}{29} = \frac{306}{870} = \frac{51}{145}
 \end{aligned}$$



Example 23(a)

In a factory there are 100 units of a certain product, 5 of which are defective. We pick three units from the 100 units at random. What is the probability that none of them are defective?

Solution:

Let A_i as the event that i -th chosen unit is not defective.

$$P(A_1 \cap A_2 \cap A_3) = P(A_1)P(A_2|A_1)P(A_3|A_2, A_1)$$

$$P(A_1) = \frac{95}{100}; \quad P(A_2|A_1) = \frac{94}{99}; \quad P(A_3|A_2, A_1) = \frac{93}{98}$$

$$\therefore P(A_1 \cap A_2 \cap A_3) = \frac{95}{100} \times \frac{94}{99} \times \frac{93}{98} = 0.8560$$


Example 23(b)

In a shipment of 20 computers, 3 are defective. Three computers are randomly selected and tested. What is the probability that all three are defective if the first and second ones are not replaced after being tested?

Solution:

Probabilities: $P(3 \text{ defectives}) =$

$$\frac{3}{20} \cdot \frac{2}{19} \cdot \frac{1}{18} = \frac{6}{6840} = \frac{1}{1140}$$




Representing Conditional Probabilities with a Tree Diagram

Example:

In my town, it's rainy one third of the days. Given that it is rainy, there will be heavy traffic with probability $\frac{1}{2}$, and given that it is not rainy, there will be heavy traffic with probability $\frac{1}{4}$. If it's rainy and there is heavy traffic, I arrive late for work with probability $\frac{1}{2}$. On the other hand, the probability of being late is reduced to $\frac{1}{8}$ if it is not rainy and there is no heavy traffic. In other situations (rainy and no traffic, not rainy and traffic) the probability of being late is 0.25. You pick a random day.


- What is the probability that it's not raining and there is heavy traffic and I am not late?
- What is the probability that I am late?
- Given that I arrived late at work, what is the probability that it rained that day?



Solutions

Let, **R** = event of rainy,
T = event of heavy traffic,
L = event of I'm late to work

innovative • entrepreneurial • global
68
www.utm.my



Solutions (cont'd)

a) What is the probability that it's not raining and there is heavy traffic and I'm not late?

$$P(R^c \cap T \cap L^c) = P(R^c)P(T|R^c)P(L^c|T, R^c)$$

$$= \frac{2}{3} \times \frac{1}{4} \times \frac{3}{4} = \frac{1}{8}$$

a) What is the probability that I'm late?

$$P(L) = P(R, T, L) + P(R, T^c, L) + P(R^c, T, L) + P(R^c, T^c, L)$$

$$= \frac{1}{12} + \frac{1}{24} + \frac{1}{24} + \frac{1}{16} = \frac{11}{48}$$

innovative • entrepreneurial • global
69
www.utm.my

Solutions (cont'd)

c) Given that I arrived late at work, what is the probability that it's rained that day?

We need to find $P(R|L)$ using $P(R|L) = \frac{P(R \cap L)}{P(L)}$

$$P(R \cap L) = P(R, T, L) + P(R, T^c, L) = \frac{1}{12} + \frac{1}{24} = \frac{1}{8}$$

$$\therefore P(R|L) = \frac{P(R \cap L)}{P(L)} = \frac{\frac{1}{8}}{\frac{11}{48}} = \frac{6}{11}$$

Law of Total Probability

- If B_1 and B_2 are disjoint events with $P(B_1) + P(B_2) = 1$, then for any event E ,

$$\begin{aligned} P(E) &= P(E \cap B_1) + P(E \cap B_2) \\ &= P(E|B_1)P(B_1) + P(E|B_2)P(B_2) \end{aligned}$$

- More generally, if B_1, B_2, \dots, B_k are disjoint events with $P(B_1) + P(B_2) + \dots + P(B_k) = 1$, then for any event E ,

$$\begin{aligned} P(E) &= P(E \cap B_1) + P(E \cap B_2) + \dots + P(E \cap B_k) \\ &= P(E|B_1)P(B_1) + P(E|B_2)P(B_2) + \dots + P(E|B_k)P(B_k) \end{aligned}$$

Example 24

Paediatric department researcher examines the medical records of toddlers that came to a particular paediatric clinic. He found that 20% of them came for flu treatment and 10% of mothers of the toddler that having flu are also having flu. 30% of the mothers that came to the clinic are found having flu.

- What is the probability of the toddler having flu given that the mother having flu.
- What if the probability of the toddler having flu given that the mother is not having flu.

Solution

- What is the probability of the toddler having flu given that the mother having flu.

Let, T : event of toddler having flu; M: event of mother having flu

$$P(T) = 0.2; P(M \cap T) = 0.1; P(M) = 0.3$$

$$P(T|M) = \frac{P(M \cap T)}{P(M)} = \frac{0.1}{0.3} = 0.33$$

- What if the probability of the toddler having flu given that the mother is not having flu.

According to the law of total probability:

$$P(T) = P(T \cap M) + P(T \cap M'); \text{ where } P(M) + P(M') = 1$$

$$0.2 = 0.1 + P(T \cap M')$$

$$\therefore P(T \cap M') = 0.2 - 0.1 = 0.1; P(M') = 1 - P(M) = 1 - 0.3 = 0.7$$

$$\therefore P(T|M') = \frac{P(T \cap M')}{P(M')} = \frac{0.1}{0.7} = 0.143$$

Bayes' Theorem

Suppose that a sample space \mathcal{S} is a union of mutually disjoint events $B_1, B_2, B_3, \dots, B_n$, suppose A is an event in \mathcal{S} , and suppose A and all the B_k have nonzero probabilities, where k is an integer with $1 \leq k \leq n$. Then

$$P(B_k | A) = \frac{P(A | B_k) P(B_k)}{\sum_{i=1}^n P(A | B_i) P(B_i)}$$

Example 25

- At the telemarketing firm, Foo, Raqib and Lee make calls.
- The table shows the percentage of call each caller makes and the percentage of persons who are annoyed and hang up on each caller.

	caller		
	Foo	Raqib	Lee
% of calls	40	25	35
% of hang-ups	20	55	30

Example 25 (cont.)

- Let A denote the event "Foo made the call".
- Let B denote the event "Raqib made the call".
- Let C denote the event "Lee made the call".
- Let H denote the event "the caller hung up".
- Find
 - ① $P(A), P(B), P(C)$
 - ② $P(H|A), P(H|B), P(H|C)$
 - ③ $P(A|H), P(B|H), P(C|H)$
 - ④ $P(H)$

Solution

- Since Foo made 40% of the calls,
 $P(A) = 0.40$
- Similarly, from the table we obtain
 $P(B) = 0.25$
 $P(C) = 0.35$
- Given that Foo made the call, the table shows that 20% of the persons hung up
 $P(H|A) = 0.20$
- Similarly,
 $P(H|B) = 0.55$
 $P(H|C) = 0.30$

Solution (cont.)

- To compute $P(A|H)$, we use Bayes' Theorem:

$$\begin{aligned}
 P(A|H) &= \frac{P(H|A)P(A)}{P(H|A)P(A) + P(H|B)P(B) + P(H|C)P(C)} \\
 &= \frac{(0.2)(0.4)}{(0.2)(0.4) + (0.55)(0.25) + (0.3)(0.35)} \\
 &= 0.248
 \end{aligned}$$

Solution (cont.)

- To compute $P(B|H)$, we use Bayes' Theorem:

$$\begin{aligned}
 P(B|H) &= \frac{P(H|B)P(B)}{P(H|A)P(A) + P(H|B)P(B) + P(H|C)P(C)} \\
 &= \frac{(0.55)(0.25)}{(0.2)(0.4) + (0.55)(0.25) + (0.3)(0.35)} \\
 &= 0.426
 \end{aligned}$$

Solution (cont.)

- To compute $P(C | H)$, we use Bayes' Theorem:

$$\begin{aligned}
 P(C | H) &= \frac{P(H | C)P(C)}{P(H | A)P(A) + P(H | B)P(B) + P(H | C)P(C)} \\
 &= \frac{(0.3)(0.35)}{(0.2)(0.4) + (0.55)(0.25) + (0.3)(0.35)} \\
 &= 0.326
 \end{aligned}$$

Solution (cont.)

- Compute $P(H)$

$$\begin{aligned}
 P(H) &= P(H | A)P(A) + P(H | B)P(B) + P(H | C)P(C) \\
 &= (0.2)(0.4) + (0.55)(0.25) + (0.3)(0.35) \\
 &= 0.3225
 \end{aligned}$$

Example 26

The ELISA test is used to detect antibodies in blood and can indicate the presence of the HIV virus. Approximately 15% of the patients at one clinic have the HIV virus. Among those that have the HIV virus, approximately 95% test positive on the ELISA test. Among those that do not have the HIV virus, approximately 2% test positive on the ELISA test. **Find the probability that a patient has the HIV virus if the ELISA test is positive.**

Solution

- Let H denote the event "patient has the HIV virus".
- Let T denote the event "patient does not have the HIV virus".
- Thus,

$$P(H) = 0.15$$

$$P(T) = 0.85$$

- Let Pos denote the feature "tests positive"

$$P(Pos|H) = 0.95$$

$$P(Pos|T) = 0.02$$

Solution (cont.)

- The probability that a patient has the HIV virus if the ELISA test is positive is


$$\begin{aligned}
 P(H | Pos) &= \frac{P(Pos | H)P(H)}{P(Pos | H)P(H) + P(Pos | T)P(T)} \\
 &= \frac{(0.95)(0.15)}{(0.95)(0.15) + (0.02)(0.85)} \\
 &= 0.893
 \end{aligned}$$

Example 26

- Hana, Amir and Dani write a program that schedule tasks for manufacturing toys.
- The table shows the percentage of code written by each person and the percentage of buggy code for each person.

	Coder		
	Hana	Amir	Dani
% of code	30	45	25
% of bugs	3	2	5

- Given that a bug was found, **find the probability that it was in the program code written by Dani.**



Solution


- Let
 - H denotes the event of "code written by Hana"
 - A denotes the event of "code written by Amir"
 - D denotes the event of "code written by Dani"
 - B denotes the event of "a bug found in code"
- Since Hana wrote 30% of the code

$$P(H) = 0.3$$
- Similarly,

$$P(A) = 0.45$$

$$P(D) = 0.25$$

innovative • entrepreneurial • global 86 www.utm.my



Solution (cont.)

- If Hana wrote the code, the table shows that 3% of bugs was found. Thus,

$$P(B|H) = 0.03$$
- Similarly,

$$P(B|A) = 0.02$$

$$P(B|D) = 0.05$$
- The probability that a bug was found in the code written is

$$\begin{aligned}
 P(B) &= P(B|H)P(H) + P(B|A)P(A) + P(B|D)P(D) \\
 &= (0.03)(0.3) + (0.02)(0.45) + (0.05)(0.25) \\
 &= 0.0305
 \end{aligned}$$

innovative • entrepreneurial • global 87 www.utm.my

Solution (cont.)

- If a bug was found, the probability that it was in the code written by Dani is

$$\begin{aligned}
 P(D | B) &= \frac{P(B | D)P(D)}{P(B)} \\
 &= \frac{(0.05)(0.25)}{0.0305} \\
 &= 0.4098
 \end{aligned}$$

Exercise #5

A department store has three branches that sells clothes. The customers can return the clothes if they bought the clothes in wrong sizes, the clothes have defects or if they simply change their mind. Suppose that out of all of the returned clothes from last month, **half are from branch A, 3/10 from branch B and 1/5 from branch C** (the details shown in Table 1).

Table 1: Data on returned cloths by branch.

	Branch A	Branch B	Branch C
Wrong size	3/5	1/3	3/8
Defects	1/10	1/2	1/4
Change mind	3/10	1/6	3/8

Exercise #5 (cont.)

- i) What are the probabilities that the customers from branch A return the cloth because of they changed their mind?
- i) If it was discovered that the customer return because of wrong size, what is the probability that he or she return it at branch C?
- i) If it was discovered that the customer return because of defects, what is the probability that he or she return it at branch B?

Exercise #5

In Apple County, 51% of the adults are males. One adult is randomly selected for a survey involving credit card usage.

- (a) Find the probability that the selected person is female.
- (b) It is later learned that the selected survey subject was from a rural area. Also, 9.5% of males from a rural area, whereas 1.7% of female from a rural area.
 - (i) What is the probability of getting someone who is from a rural area, given that the person is a male?
 - (ii) What is the probability that the selected subject is a male, given that he comes from a rural area?
 - (iii) If the Apple County has 100,000 adult populations, find the number of females that come from an urban area.

Hint: Use the following notations

M = Male; \bar{M} = female; R = from rural area; \bar{R} = from an urban area

Independent Events

- If the probability of event A does not depend on event B in the sense that $P(A | B) = P(A)$, we say that A and B are independent events.

$$P(A | B) = \frac{P(A \cap B)}{P(B)} = P(A)$$

$$P(A \cap B) = P(A) \cdot P(B)$$

Independent Events (cont.)

- To find the probability of two independent events that occur in sequence, find the probability of each event occurring separately, and then **multiply** the probabilities.
- This **multiplication rule** is defined symbolically below.

Multiplication Rule 1: When two events, A and B, are independent, the probability of both occurring is: $P(A \text{ and } B) = P(A) \cdot P(B)$

- Note that multiplication is represented by **AND**.

Independent Events (cont.)

Some other examples of independent events are:

- Landing on heads after tossing a coin **AND** rolling a 5 on a single 6-sided die.
- Choosing a marble from a jar **AND** landing on heads after tossing a coin.
- Choosing a 3 from a deck of cards, replacing it, **AND** then choosing an ace as the second card.
- Rolling a 4 on a single 6-sided die, **AND** then rolling a 1 on a second roll of the die.

Example 27

A coin is loaded so that the probability of heads is 0.6. Suppose the coin is tossed twice. Although the probability of heads is greater than the probability of tails, there is no reason to believe that whether the coin lands heads or tails on one toss will affect whether it lands heads or tails on other toss. Thus it is reasonable to assume that the results of the tosses are independent.

- i) What is the probability of obtaining **two heads**?
- ii) What is the probability of obtaining **one head**?
- iii) What is the probability of obtaining **no head**?
- iv) What is the probability of obtaining **at least one head**?

Solution

- The sample space, \mathbf{S} consists of four outcomes: {HH, HT, TH, TT}, which are not equally likely
- Let \mathbf{A} denote the event “obtain head on the first toss”.
- Let \mathbf{B} denote the event “obtain head on the second toss”.
- Then, $P(\mathbf{A})=P(\mathbf{B}) = 0.6$, it is to be assumed that \mathbf{A} and \mathbf{B} is independent.

Solution (cont.)

i) What is the probability of obtaining **two heads**?

$$\begin{aligned}
 P(\text{Two heads}) &= P(A \cap B) \\
 &= P(A) \cdot P(B) \\
 &= (0.6)(0.6) \\
 &= 0.36 = 36\%
 \end{aligned}$$

Solution (cont.)

ii) What is the probability of obtaining **one head**?

$$\begin{aligned}
 P(\text{One head}) &= P((A \cap B') \cup (A' \cap B)) \\
 &= P(A) \cdot P(B') + P(A') \cdot P(B) \\
 &= (0.6)(1 - 0.6) + (1 - 0.6)(0.6) \\
 &= (0.6)(0.4) + (0.4)(0.6) \\
 &= 0.48 = 48\%
 \end{aligned}$$

Solution (cont.)

iii) What is the probability of obtaining **no head**?

$$\begin{aligned}
 P(\text{no head}) &= P(A' \cap B') \\
 &= P(A') \cdot P(B') \\
 &= (1 - 0.6)(1 - 0.6) \\
 &= (0.4)(0.4) \\
 &= 0.16 = 16\%
 \end{aligned}$$

Solution (cont.)

iv) What is the probability of obtaining **at least one head**?

$$\begin{aligned} P(\geq 1 \text{ head}) &= P(\text{one head}) + P(\text{two heads}) \\ &= (0.48) + (0.36) \\ &= 0.84 = 84\% \end{aligned}$$

Or,

$$\begin{aligned} P(\geq 1 \text{ head}) &= 1 - P(\text{no head}) \\ &= 1 - (0.16) \\ &= 0.84 = 84\% \end{aligned}$$

Example 28

A dresser drawer contains one pair of socks with each of the following colors: blue, brown, red, white and black. Each pair is folded together in a matching set. You reach into the sock drawer and choose a pair of socks without looking. You replace this pair and then choose another pair of socks. What is the probability that you will choose the red pair of socks both times?

Probabilities:

$$\begin{aligned} P(\text{red}) &= \frac{1}{5} \\ P(\text{red and red}) &= P(\text{red}) \cdot P(\text{red}) \\ &= \frac{1}{5} \cdot \frac{1}{5} \\ &= \frac{1}{25} \end{aligned}$$



Solution:

Example 29

A card is chosen at random from a deck of 52 cards. It is then replaced and a second card is chosen. What is the probability of choosing a jack and an eight?

Probabilities:

$$P(\text{jack}) = \frac{4}{52}$$

$$P(8) = \frac{4}{52}$$

$$P(\text{jack and } 8) = P(\text{jack}) \cdot P(8)$$

$$= \frac{4}{52} \cdot \frac{4}{52}$$


$$= \frac{16}{2704}$$

$$= \frac{1}{169}$$



Example 30

Farid and Azie take a final examination in discrete structure. The probability that Farid passes is 0.70 and the probability that Azie passes is 0.95. Assume that the events "Farid passes" and "Azie passes" are independent. Find the probability that Farid or Azie, or both, passes the final exam.

 **UTM**
UNIVERSITI TEKNOLOGI MALAYSIA

Solution


- Let F denotes the event "Farid pass the final exam"
- Let A denotes the event "Azie pass the final exam"

→ We are asked to compute $P(F \cup A)$

- $P(F \cup A) = P(F) + P(A) - P(F \cap A)$
- $P(F \cap A) = P(F) \cdot P(A) = (0.70)(0.95) = 0.665$

- $P(F \cup A) = P(F) + P(A) - P(F \cap A)$
 $= 0.70 + 0.95 - 0.665$
 $= 0.985$

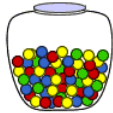
innovative • entrepreneurial • global 113 www.utm.my

 **UTM**
UNIVERSITI TEKNOLOGI MALAYSIA

Example 30

A jar contains 3 Red, 5 Green, 2 Blue and 6 Yellow marbles. A marble is chosen at random from the jar. After replacing it, a second marble is chosen. What is the probability of choosing a Green and a Yellow marble?

$$P(\text{Green}) = \frac{5}{16}; \quad P(\text{Yellow}) = \frac{6}{16}$$




Solution:

$$P(\text{Green and Yellow}) = P(\text{Green}) \cdot P(\text{Yellow})$$

$$= \frac{5}{16} \cdot \frac{6}{16}$$

$$= \frac{30}{256}$$

innovative • entrepreneurial • global 114 www.utm.my




Example 31

- Halim and Aina take a final examination in Fortran.
- The probability that Halim passes is 0.85, and the probability that Aina passes is 0.70.
- Assume that the events "Halim passes the final exam" and "Aina passes the final exam" are independent.

- Find the probability that Halim does not pass.
- Find the probability that both pass.
- Find the probability that both fail.
- Find the probability that at least one passes.

innovative • entrepreneurial • global 115 www.utm.my



Solution

- Let H denotes the event "Halim pass the exam"
- Let A denotes the event "Aina pass the exam"
- Given, $P(H) = 0.85$; $P(A) = 0.70$

i) Probability Halim does not pass the exam:

$$P(H') = 1 - P(H) = 1 - 0.85 = 0.15$$

ii) Probability that both pass:

$$P(H \cap A) = P(H) \cdot P(A) = (0.85)(0.70) = 0.595$$

iii) Probability that both fail:

$$P(H' \cap A') = P(H') \cdot P(A') = (1 - 0.85)(1 - 0.70) = (0.15)(0.3) = 0.045$$

iv) Probability that at least one passes:

$$P(\text{at least one pass}) = 1 - P(H' \cap A') = 1 - (0.045) = 0.955$$

innovative • entrepreneurial • global 116 www.utm.my

Exercise #6

In a study of pleas and prison sentences, it is found that 45% of the subjects studied were sent to prison. Among those sent to prison, 40% chose to plead guilty. Among those not sent to prison, 55% chose to plead guilty.

- i) If one of the study subjects is randomly selected, find the probability of getting someone who was not sent to prison.
- ii) If a study subject is randomly selected and it is then found that the subject entered a guilty plea, find the probability that this person was sent to prison.
- iii) If one of the study subjects is randomly selected, it is found that the subject is entered a guilty plea, find the probability that this person was not sent to prison.
- iv) If a study subject is randomly selected find the probability of getting someone who was chose to plead guilty.