


SCSI 1013: Discrete Structure

CHAPTER 4

# GRAPH THEORY

innovative • entrepreneurial • global [www.utm.my](http://www.utm.my)



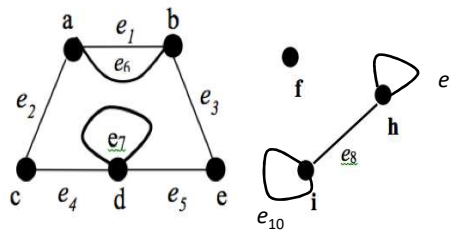
# Definition of Graph

innovative • entrepreneurial • global [www.utm.my](http://www.utm.my)

- A graph  $G$  consists of two finite sets:
  - a nonempty set  $V(G)$  of **vertices**.
  - a set  $E(G)$  of **edges**, where each edge is associated with a set consisting of either one or two vertices called its **endpoints**.
  - $f$  is a function, called an **incidence function**, that assign to each edge,  $e \in E$ , a one element subset  $\{v\}$  or two elements subset  $\{v, w\}$ , where  $v$  and  $w$  are vertices.
- We can write  $G$  as  $(V, E, f)$  or  $(V, E)$  or simply as  $G$ .

## Example 1

Given a graph as shown below,



- Write a vertex set and the edge set, and give a table showing the edge-endpoint function.
- Find all edges that are incident on **a**, all vertices that are adjacent to **a**, all edges that are adjacent to  $e_2$ , all loops, all parallel edges, all vertices that are adjacent to themselves and all isolated vertices.

**Note:** Solution – Refer module


## Example 2

- Let,
  - $V = \{v_1, v_2, v_3, v_4, v_5, v_6, v_7\}$
  - $E = \{e_1, e_2, e_3, e_4, e_5, e_6, e_7\}$
- And  $f$  be defined by:
  - $f(e_1) = f(e_2) = \{v_1, v_2\}$
  - $f(e_3) = \{v_4, v_3\}$
  - $f(e_4) = f(e_6) = f(e_6) = \{v_6, v_3\}$
  - $f(e_5) = \{v_2, v_4\}$

Question: What is the pictorial representation of  $G$ ?

\* Solution – refer module (Fig. 4.5)

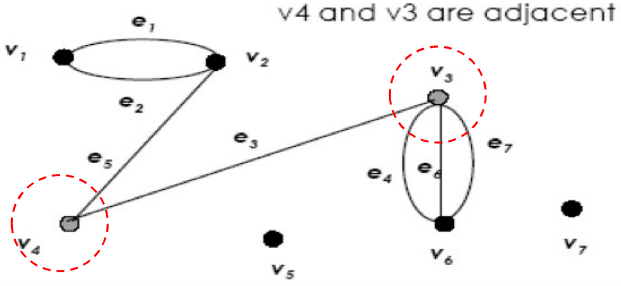
## Characteristics of Graph

 **UTM**  
UNIVERSITI TEKNOLOGI MALAYSIA

### (a) Adjacent Vertices


Two vertices that are connected by an edge are called adjacent; and a vertex that is an endpoint of a loop is said to be adjacent to itself.

**Example** →



v4 and v3 are adjacent

innovative • entrepreneurial • global 7 www.utm.my

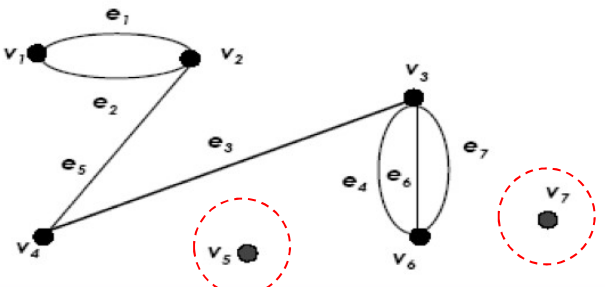
 **UTM**  
UNIVERSITI TEKNOLOGI MALAYSIA

### b) Isolated Vertex

Let  $G$  be a graph and  $v$  be a vertex in  $G$ . We say that  $v$  is an isolated vertex if it is not incident with any edge.

● v5 and v7 are isolated vertices.

**Example** →



innovative • entrepreneurial • global 8 www.utm.my

**UTM**  
UNIVERSITI TEKNOLOGI MALAYSIA

### c) Loop

An edge with just one endpoint is called a loop.

**Example** →

• e2 is a loop

innovative • entrepreneurial • global 9 www.utm.my

**UTM**  
UNIVERSITI TEKNOLOGI MALAYSIA

### d) Parallel Edges

Two or more distinct edges with the same set of endpoints are said to be parallel.

•  $e_1$  and  $e_2$  are **parallel**.

**Example** →

•  $e_1$  and  $e_2$  are parallel.


innovative • entrepreneurial • global 10 www.utm.my



UTM  
UNIVERSITI TEKNOLOGI MALAYSIA

# The Concept of Degree

innovative • entrepreneurial • global 11 www.utm.my



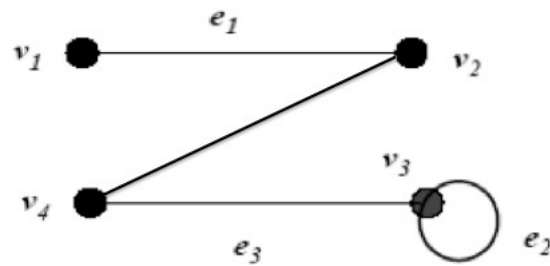
UTM  
UNIVERSITI TEKNOLOGI MALAYSIA

- Let  $G$  be a graph and  $v$  be a vertex in  $G$ .
- The **degree of  $v$** , written  $\text{deg}(v)$  or  $d(v)$  is the number of edges incident with  $v$ .
- Each **loop** on a vertex  $v$  contributes 2 to the degree of  $v$ .

innovative • entrepreneurial • global 12 www.utm.my

## Example

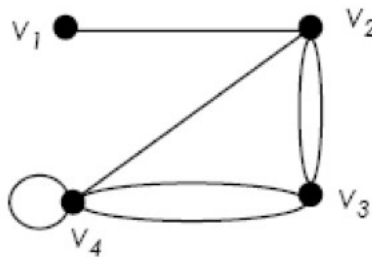
State the degree of each vertex for the following graph.




$$\deg(v_1) = 1; \deg(v_2) = 2; \deg(v_3) = 3; \deg(v_4) = 2$$

## Exercise


- Find the degree of each vertex in the graph.





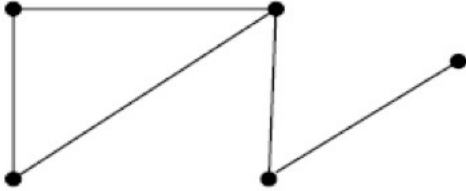
**Types of Graphs**

innovative • entrepreneurial • global 15 www.utm.my



**a) Simple Graph**

A graph  $G$  is called a simple graph if  $G$  does not contain any parallel edges and any loops.

Example 

innovative • entrepreneurial • global 16 www.utm.my



**UTM**  
UNIVERSITI TEKNOLOGI MALAYSIA

## b) Regular Graph

Let  $G$  be a graph and  $k$  be a nonnegative integer.  $G$  is called a  $k$ -regular graph if the degree of each vertex of  $G$  is  $k$ .

Example →

**Fig.1: Graph A**

**Fig.2: Graph B**

innovative • entrepreneurial • global
17
www.utm.my

**UTM**  
UNIVERSITI TEKNOLOGI MALAYSIA

## c) Connected Graph


A graph  $G$  is connected if given any vertices  $v$  and  $w$  in  $G$ , there is a path from  $v$  to  $w$ .

Example ↓

**Fig.1: Connected graph**

**Fig.2: Not connected graph**


innovative • entrepreneurial • global
18
www.utm.my

 **UTM**  
UNIVERSITI TEKNOLOGI MALAYSIA

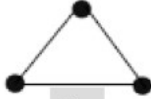
## d) Complete Graph

A simple graph with  $n$  vertices in which there is an edge between every pair of distinct vertices is called a complete graph on  $n$  vertices. This is denoted by  $K_n$ .

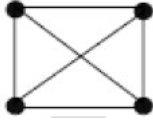
Example



$K_2$




$K_3$



$K_4$

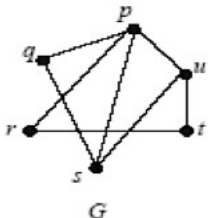
innovative • entrepreneurial • global
19
www.utm.my

 **UTM**  
UNIVERSITI TEKNOLOGI MALAYSIA

## e) Subgraph

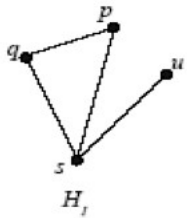
A graph  $H$  is said to be a subgraph of a graph  $G$  if, every vertex in  $H$  is also a vertex in  $G$ , every edge in  $H$  is also an edge in  $G$ , and every edge in  $H$  has the same endpoints as it has in  $G$ .

Example

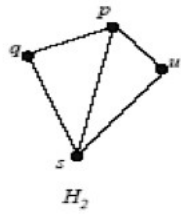


$G$

→




$H_1$



$H_2$

innovative • entrepreneurial • global
20
www.utm.my




**Graph Representation**

innovative • entrepreneurial • global

21

www.utm.my




- To write programs that process and manipulate graphs, the graphs must be stored, that is, represented in computer memory.
- A graph can be represented (in computer memory) in several ways.
- 2-dimensional array: adjacency matrix and incidence matrix.

innovative • entrepreneurial • global

22


www.utm.my

 **UTM**  
UNIVERSITI TEKNOLOGI MALAYSIA

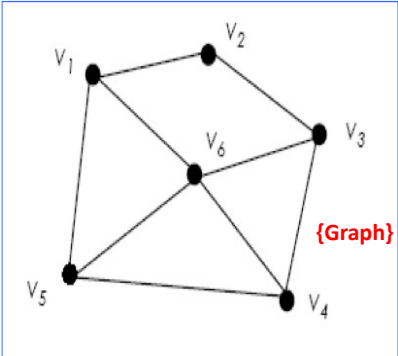
## Adjacency Matrix

- Let  $G$  be a graph with  $n$  vertices.
- The adjacency matrix,  $A_G$  is an  $n \times n$  matrix  $[a_{ij}]$  such that,
  - $a_{ij}$  = the number of edges from  $v_i$  to  $v_j$ , {undirected  $G$ }
  - or,
  - $a_{ij}$  = the number of arrows from  $v_i$  to  $v_j$ , {directed  $G$ }
- for all  $i, j = 1, 2, \dots, n$ .

innovative • entrepreneurial • global 23 www.utm.my

 **UTM**  
UNIVERSITI TEKNOLOGI MALAYSIA

## Example 1



{Graph}

[Matrix]

$$A_G = \begin{matrix} & \begin{matrix} V_1 & V_2 & V_3 & V_4 & V_5 & V_6 \end{matrix} \\ \begin{matrix} V_1 \\ V_2 \\ V_3 \\ V_4 \\ V_5 \\ V_6 \end{matrix} & \begin{bmatrix} 0 & 1 & 0 & 0 & 1 & 1 \\ 1 & 0 & 1 & 0 & 0 & 0 \\ 0 & 1 & 0 & 1 & 0 & 1 \\ 0 & 0 & 1 & 0 & 1 & 1 \\ 1 & 0 & 0 & 1 & 0 & 1 \\ 1 & 0 & 1 & 1 & 1 & 0 \end{bmatrix} \end{matrix}$$

innovative • entrepreneurial • global 24 www.utm.my

**UTM**  
UNIVERSITI TEKNOLOGI MALAYSIA

## Example 2

{Graph}

[Matrix]

$$A_G = \begin{matrix} & \begin{matrix} v_1 & v_2 & v_3 & v_4 \end{matrix} \\ \begin{matrix} v_1 \\ v_2 \\ v_3 \\ v_4 \end{matrix} & \begin{bmatrix} 0 & 2 & 1 & 0 \\ 2 & 0 & 1 & 1 \\ 1 & 1 & 0 & 0 \\ 0 & 1 & 0 & 1 \end{bmatrix} \end{matrix}$$

innovative • entrepreneurial • global 25 www.utm.my

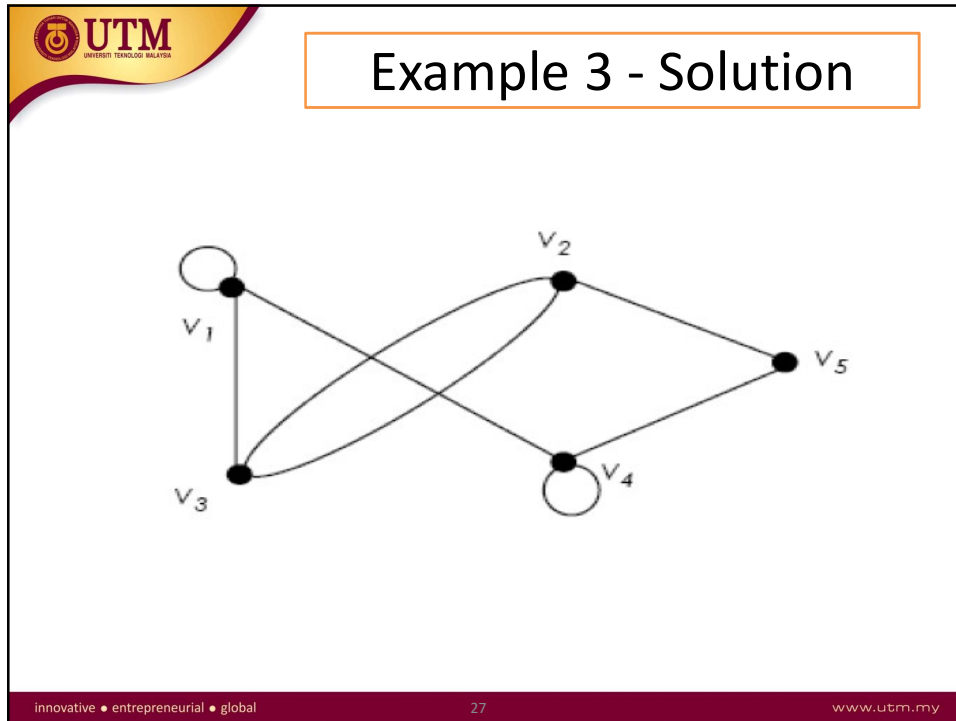
**UTM**  
UNIVERSITI TEKNOLOGI MALAYSIA

## Example 3

Draw the graph based on the following matrix:

$$A_G = \begin{bmatrix} 1 & 0 & 1 & 1 & 0 \\ 0 & 0 & 2 & 0 & 1 \\ 1 & 2 & 0 & 0 & 0 \\ 1 & 0 & 0 & 1 & 1 \\ 0 & 1 & 0 & 1 & 0 \end{bmatrix}$$


innovative • entrepreneurial • global 26 www.utm.my



UTM  
UNIVERSITI TEKNOLOGI MALAYSIA

- Adjacency matrix is a **symmetric matrix** if it is representing an undirected graph, where
 
$$a_{ij} = a_{ji}$$
- If the graph is directed graph, the presented matrix is not symmetrical.

innovative • entrepreneurial • global 28 www.utm.my




## Incidence Matrix

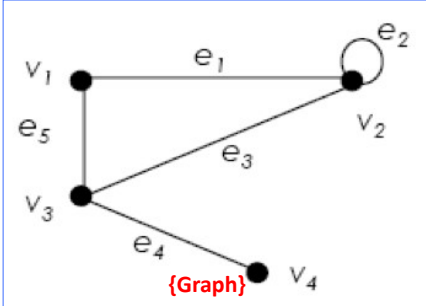
- Let  $G$  be a graph with  $n$  vertices and  $m$  edges.
- The incidence matrix,  $I_G$  is an  $n \times m$  matrix  $[a_{ij}]$  such that,

$$a_{ij} = \begin{cases} 0 & \text{if } v_i \text{ is not an end vertex of } e_j, \\ 1 & \text{if } v_i \text{ is an end vertex of } e_j, \text{ but } e_j \text{ is not a loop} \\ 2 & \text{if } e_j \text{ is a loop at } v_i \end{cases}$$

innovative • entrepreneurial • global
29
www.utm.my



## Example



{Graph}


deg( $v_1$ ) = 2;  
deg( $v_2$ ) = 4;  
deg( $v_3$ ) = 3;  
deg( $v_4$ ) = 1

[Matrix]

$$\begin{matrix} & e_1 & e_2 & e_3 & e_4 & e_5 \\
 \begin{matrix} v_1 \\ v_2 \\ v_3 \\ v_4 \end{matrix} & \begin{bmatrix} 1 & 0 & 0 & 0 & 1 \\ 1 & 2 & 1 & 0 & 0 \\ 0 & 0 & 1 & 1 & 1 \\ 0 & 0 & 0 & 1 & 0 \end{bmatrix}
 \end{matrix}$$

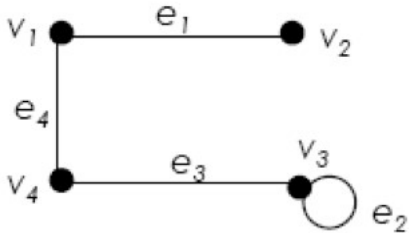
Notice that the sum of the  $i$ -th row is the degree of  $v_i$ .

innovative • entrepreneurial • global
30
www.utm.my




## Exercise

• Find the adjacency matrix and the incidence matrix of the graph.



innovative • entrepreneurial • global
31
www.utm.my



## Exercise


### Past Year 2015/2016

A cat show is being judged from pictures of the cats. The judges would like to see pictures of the following pairs of cats next to each other for their final decision: Fifi and Putih, Fifi and Suri, Fifi and Bob, Bob and Cheta, Bob and Didi, Bob and Suri, Cheta and Didi, Didi and Suri, Didi and Putih, Suri and Putih, Putih and Jeep, Jeep and Didi.

Draw a graph modeling this situation. (3 marks)

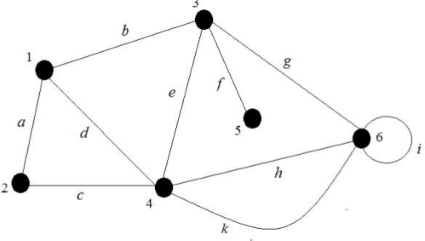
innovative • entrepreneurial • global
22
www.utm.my



 **UTM**  
UNIVERSITI TEKNOLOGI MALAYSIA

## Exercise Past Year 2015/2016

Given a graph as shown in Figure 1.



**Figure 1**

- i. Find the incidence matrix of the graph. (4 marks)
- ii. Find the adjacency matrix of the graph. (3 marks)

22  
www.utm.my


innovative • entrepreneurial • global

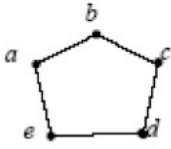
 **UTM**  
UNIVERSITI TEKNOLOGI MALAYSIA

# Isomorphisms

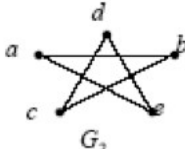
34  
www.utm.my

innovative • entrepreneurial • global






$G_1$



$G_2$

- Are these two graphs ( $G_1$  and  $G_2$ ) are same?
- When we say that 2 graphs are the same mean they are **isomorphic** to each other.

innovative • entrepreneurial • global
35
www.utm.my



## Definition

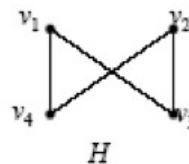
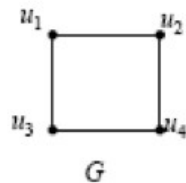
Let  $G = \{V, E\}$  and  $G' = \{V', E'\}$  be graphs.  $G$  and  $G'$  are said to be isomorphic if there exist a pair of functions  $f : V \rightarrow V'$  and  $g : E \rightarrow E'$  such that  $f$  associates each element in  $V$  with exactly one element in  $V'$  and vice versa;  $g$  associates each element in  $E$  with exactly one element in  $E'$  and vice versa, and for each  $v \in V$ , and each  $e \in E$ , if  $v$  is an endpoint of the edge  $e$ , then  $f(v)$  is an endpoint of the edge  $g(e)$ .


innovative • entrepreneurial • global
36
www.utm.my

- ◆ If two graphs is isomorphic, they must have:
  - the same number of vertices and edges,
  - the same degrees for corresponding vertices,
  - the same number of connected components,
  - the same number of loops and parallel edges,
  - both graphs are connected or both graph are not connected,
  - pairs of connected vertices must have the corresponding pair of vertices connected.
  
- ◆ In general, it is easier to prove two graphs are not isomorphic by proving that one of the above properties fails.

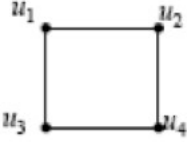
## Example 1

- Determine whether  $G$  is isomorphic to  $H$ .

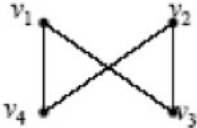




## Example 1 - Solution




$G$

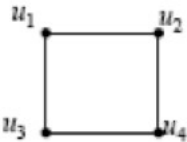


$H$

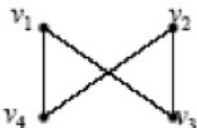
- Both graphs are simple and have the same number of vertices and the same number of edges.
- All the vertices of both graphs have degree 2.
- Define  $f: U \rightarrow V$ , where  $U = \{u_1, u_2, u_3, u_4\}$  and  $V = \{v_1, v_2, v_3, v_4\}$ ;  $f(u_1) = v_1$ ;  $f(u_2) = v_4$ ;  $f(u_3) = v_3$ ;  $f(u_4) = v_2$ .

innovative • entrepreneurial • global
39
www.utm.my






$G$



$H$

- To verify whether  $G$  and  $H$  are isomorphic, we examine the adjacency matrix  $A_G$  with rows and columns labeled in the order  $u_1, u_2, u_3, u_4$ , and the adjacency matrix  $A_H$  with rows and columns labeled in the order  $v_1, v_2, v_3, v_4$ .

innovative • entrepreneurial • global
40
www.utm.my




- $A_G$  and  $A_H$  are the same,  $G$  and  $H$  are isomorphic.

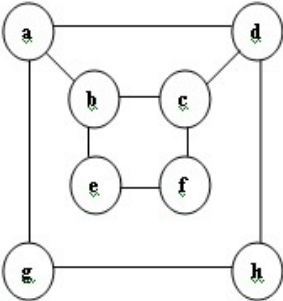
$$A_G = \begin{matrix} & \begin{matrix} u_1 & u_2 & u_3 & u_4 \end{matrix} \\ \begin{matrix} u_1 \\ u_2 \\ u_3 \\ u_4 \end{matrix} & \begin{pmatrix} 0 & 1 & 1 & 0 \\ 1 & 0 & 0 & 1 \\ 1 & 0 & 0 & 1 \\ 0 & 1 & 1 & 0 \end{pmatrix} \end{matrix}$$

$$A_H = \begin{matrix} & \begin{matrix} v_1 & v_4 & v_3 & v_2 \end{matrix} \\ \begin{matrix} v_1 \\ v_4 \\ v_3 \\ v_2 \end{matrix} & \begin{pmatrix} 0 & 1 & 1 & 0 \\ 1 & 0 & 0 & 1 \\ 1 & 0 & 0 & 1 \\ 0 & 1 & 1 & 0 \end{pmatrix} \end{matrix}$$

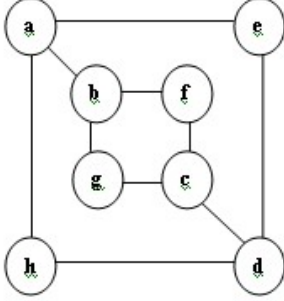
innovative • entrepreneurial • global 41 www.utm.my



- Are the following graphs in Figure 1(a) and 1(b) are isomorphic? Justify your answer.




(a)



(b)

**Figure 1**

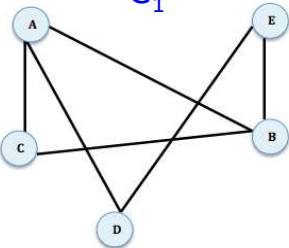
innovative • entrepreneurial • global www.utm.my

 **UTM**  
UNIVERSITI TEKNOLOGI MALAYSIA

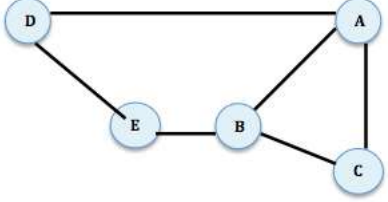
## Exercise

Q: Show that the following two graphs are isomorphic.


$G_1$



$G_2$



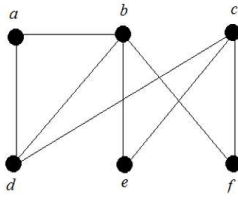
innovative • entrepreneurial • global
43
www.utm.my

 **UTM**  
UNIVERSITI TEKNOLOGI MALAYSIA

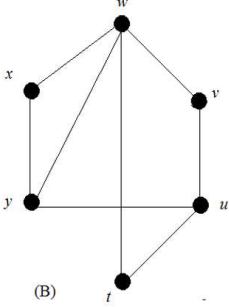
## Exercise

### Past Year 2015/2016

Determine whether the graphs in Figure 2 ( $A$  and  $B$ ) are isomorphic. If the graphs are isomorphic, find their adjacency matrices; otherwise, give an invariant that the graphs do not share. (6 marks)



(A)




(B)

innovative • entrepreneurial • global
44
www.utm.my



# Trails, Paths & Circuits

innovative • entrepreneurial • global 45 www.utm.my



## Term and Description

- A **walk** from  $v$  to  $w$  is a finite alternating sequence of adjacent vertices and edges of  $G$ . Thus a walk has the form
 
$$(v_0, e_1, v_1, e_2, v_2, \dots, v_{n-1}, e_n, v_n)$$
 where the  $v$ 's represent vertices, the  $e$ 's represent edges,  $v = v_0$ ,  $w = v_n$ , and for  $i = 1, 2, \dots, n$ ,  $v_{i-1}$  and  $v_i$  are the endpoints of  $e_i$ .
- A **trivial walk** from  $v$  to  $w$  consist of the single vertex  $v$ .
- The **length of a walk** is the number of edges it has.

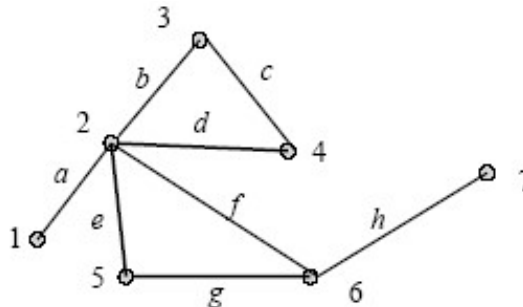
innovative • entrepreneurial • global 46 www.utm.my

## Term and Description (cont.)

- A **trail** from  $v$  to  $w$  is a walk from  $v$  to  $w$  that does not contain a repeated edge.
- A **path** from  $v$  to  $w$  is a trail from  $v$  to  $w$  that does not contain a repeated vertex.
- A **closed walk** is a walk that start and ends at the same vertex.
- A **circuit/cycle** is a closed walk that contains at least one edge and does not contain a repeated edge.
- A **simple circuit** is a circuit that does not have any other repeated vertex except the first and the last.

## Example 1 – Trail & Path

- $(1, a, 2, b, 3, c, 4, d, 2, e, 5)$  is a trail.
- $(6, g, 5, e, 2, d, 4)$  is a path.



**Note:**

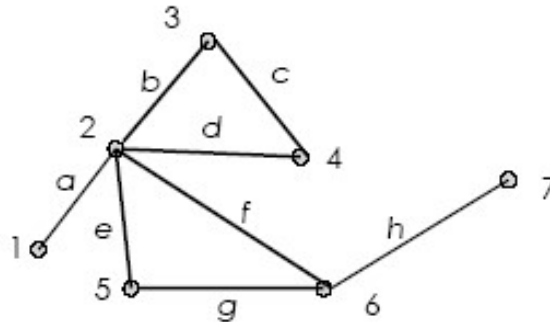
Trail: No repeated edge (can repeat vertex).

Path: No repeated vertex and edge.



## Example 2 – Cycle/circuit

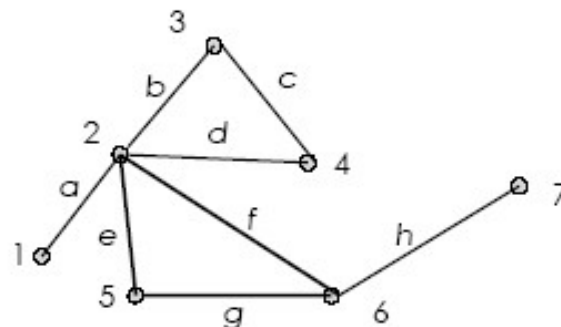
- $(2, f, 6, g, 5, e, 2, d, 4, c, 3, b, 2)$  is a cycle.




**Note:** cycle  $\rightarrow$  start and end at same vertex, no repeated edge.

## Example 3 – Simple Cycle

- $(5, g, 6, f, 2, e, 5)$  is a simple cycle.



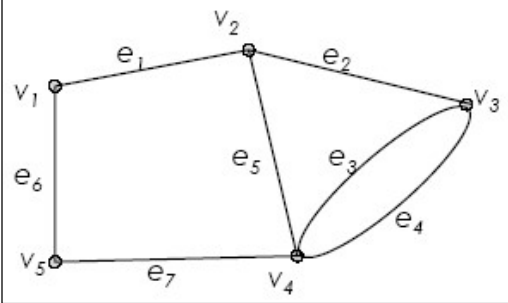
**Note:** Simple cycle  $\rightarrow$  start and end at same vertex, no repeated edge or vertex except for the start and end vertex.

 **UTM**  
UNIVERSITI TEKNOLOGI MALAYSIA


## Exercise

Tell whether the following is either a walk, trail, path, cycle, simple cycle, closed walk or none of these.

- $(v_1, e_1, v_2)$
- $(v_2, e_2, v_3, e_3, v_4, e_4, v_3)$
- $(v_4, e_7, v_5, e_6, v_1, e_1, v_2, e_2, v_3, e_3, v_4)$
- $(v_4, e_4, v_3, e_3, v_4, e_5, v_2, e_1, v_1, e_6, v_5, e_7, v_4)$



innovative • entrepreneurial • global 51 www.utm.my

 **UTM**  
UNIVERSITI TEKNOLOGI MALAYSIA

## Euler Path & Circuit

innovative • entrepreneurial • global 52 www.utm.my


 **UTM**  
UNIVERSITI TEKNOLOGI MALAYSIA

The town of Königsberg in Prussia (now Kaliningrad in Russia) was built at a point where two branches of the Pregel River came together. It consisted of an island and some land along the river banks. These were connected by seven bridges as shown in figure below:

**Königsberg Bridge Problem**

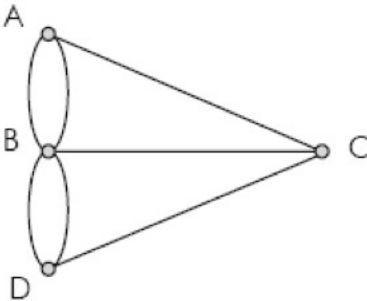


innovative • entrepreneurial • global 53 www.utm.my

 **UTM**  
UNIVERSITI TEKNOLOGI MALAYSIA

**Problem:** Starting at one land area, is it possible to walk across all of the bridges exactly once and return to the starting land area?

- Graph of the Königsberg Bridge Problem



no Euler cycle

innovative • entrepreneurial • global 54 www.utm.my

**UTM**  
UNIVERSITI TEKNOLOGI MALAYSIA

**Solution:** It is not possible to walk across all of the bridges exactly once and return to the starting land area. Therefore, two additional bridges have been constructed on the Pregel river.


innovative • entrepreneurial • global 55 www.utm.my

**UTM**  
UNIVERSITI TEKNOLOGI MALAYSIA

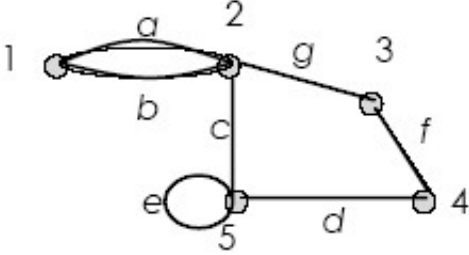
## Euler Circuit

Let  $G$  be a graph. An **Euler circuit** for  $G$  is a circuit that contains every vertex and every edges of  $G$ . That is, an Euler circuit for  $G$  is a sequence of adjacent vertices and edges in  $G$  that has at least one edges, **starts and ends at the same vertex**, **uses every vertex of  $G$  at least once**, and **uses every edge of  $G$  exactly once**.

innovative • entrepreneurial • global 56 www.utm.my


 **UTM**  
UNIVERSITI TEKNOLOGI MALAYSIA

## Example 1



$(1, a, 2, c, 5, e, 5, d, 4, f, 3, g, 2, b, 1)$   
is an Euler cycle

innovative • entrepreneurial • global 57 www.utm.my

 **UTM**  
UNIVERSITI TEKNOLOGI MALAYSIA

## Euler Trail

Let  $G$  be a graph, and let  $v$  and  $w$  be two distinct vertices of  $G$ . An **Euler trail** from  $v$  to  $w$  is a sequence of adjacent vertices and edges that **starts at  $v$**  and **ends at  $w$** , **passes through every vertex of  $G$  at least once**, and **traverses every edge of  $G$  exactly once**.

innovative • entrepreneurial • global 58 www.utm.my

**UTM**  
UNIVERSITI TEKNOLOGI MALAYSIA

### Example 2

(1, a, 2, c, 5, e, 5, d, 4, f, 3, b, 2)  
is an Euler trail


innovative • entrepreneurial • global 59 www.utm.my

**UTM**  
UNIVERSITI TEKNOLOGI MALAYSIA

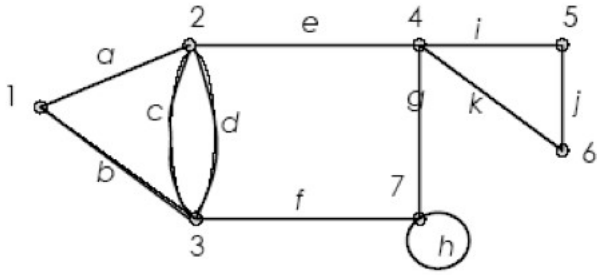
### Theorem - Euler

- If  $G$  is a connected graph and **every vertex has even degree**, then  $G$  has an **Euler circuit**.
- A graph has an **Euler trail** from  $v$  to  $w$  ( $v \neq w$ ) if and only if it is connected and  **$v$  and  $w$  are the only vertices having odd degree**.

innovative • entrepreneurial • global 60 www.utm.my




### Example 3



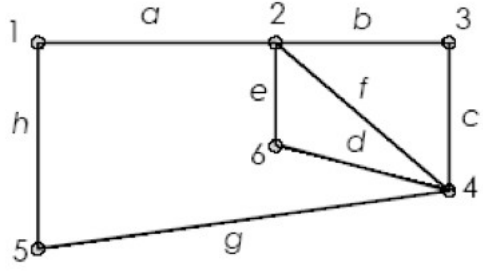
This graph has an Euler cycle

Vertex	1	2	3	4	5	6	7
Degree	2	4	4	4	2	2	4

innovative • entrepreneurial • global
61
www.utm.my



### Example 4



This graph has an Euler cycle

Vertex	1	2	3	4	5	6
Degree	2	4	2	4	2	2

innovative • entrepreneurial • global
62
www.utm.my

**UTM**  
UNIVERSITI TEKNOLOGI MALAYSIA

## Example 5

This graph has an Euler trail.

Vertex	1	2	3	4	5	6
Degree	2	3	3	2	2	2

innovative • entrepreneurial • global 63 www.utm.my

**UTM**  
UNIVERSITI TEKNOLOGI MALAYSIA

## Exercise

Q: Which of the following graphs has Euler circuit?  
Justify your answer.

$G_1$

$G_2$

innovative • entrepreneurial • global 64 www.utm.my



## Exercise

### Past Year 2015/2016

Determine whether the graph in Figure 3 has an Euler cycle or Euler path. If the graph has an Euler cycle or Euler path, exhibit one; otherwise, give an argument that shows there is no Euler path. (4 marks)

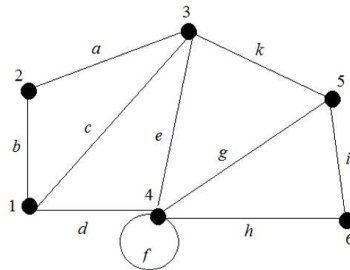


Figure 3

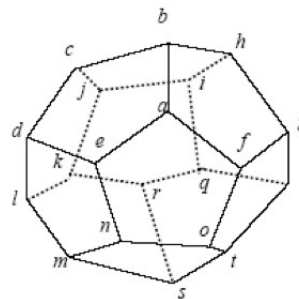
## Hamilton Circuits


## Hamiltonian Circuits

Given a graph  $G$ , a **Hamiltonian circuit** for  $G$  is a simple circuit that includes every vertex of  $G$  (but doesn't need to include all edges). That is, a Hamiltonian circuit for  $G$  is a sequence of adjacent vertices and distinct edges in which **every vertex of  $G$  appears exactly once, except for the first and the last, which are the same.**

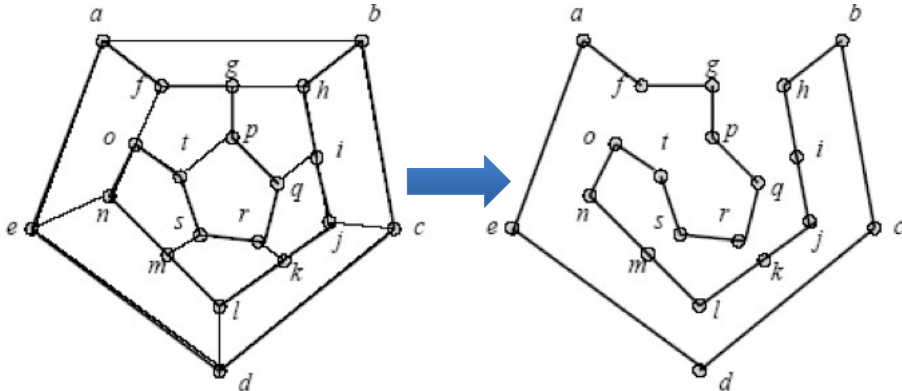
## Example

- Sir William Rowan Hamilton marketed a puzzle in the mid-1800s in the form of dodecahedron.
- Each corner bore the name of a city.
- The problem was to start at any city, travel along the edges, visit each city exactly one time and return to the initial city.






innovative • entrepreneurial • global



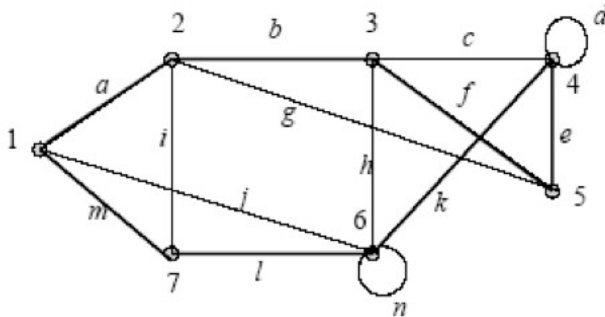
(a): The graph                      (b): Hamilton circuit

69

www.utm.my



### Example



This graph has a Hamilton circuit.

(1, a, 2, b, 3, f, 5, e, 4, k, 6, l, 7, m, 1)

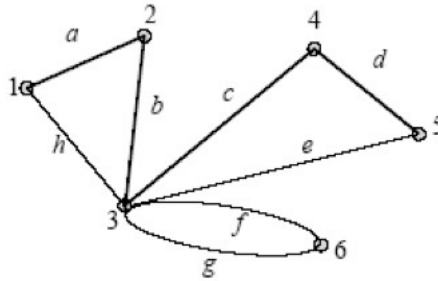
- Visit each vertex just once.

70

www.utm.my

## Example

This graph does not contain Hamilton circuit.

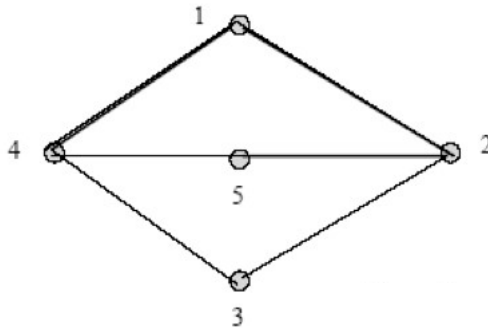


(1, a, 2, b, 3, g, 6, f, 3, e, 5, d, 4, c, 3, h, 1)

- Vertex (3) has to be visited more than once.

## Example

**Question:** Is this graph has Hamiltonian cycle?



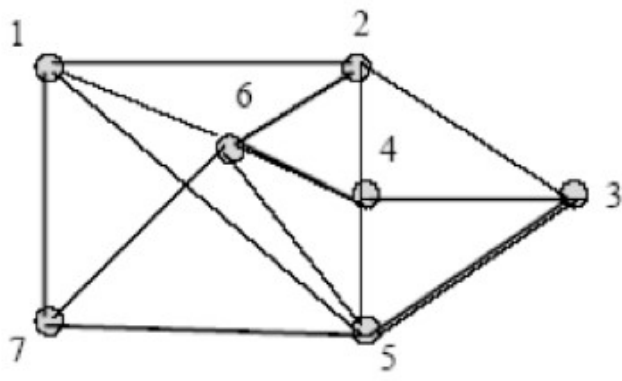
**Solution:** (1, 4, 3, 2, 5, 4, 1)

- Vertex (4) has to be visited more than once.

**UTM**  
UNIVERSITI TEKNOLOGI MALAYSIA

## Exercise

**Question:** Is this graph has Hamiltonian cycle?



innovative • entrepreneurial • global

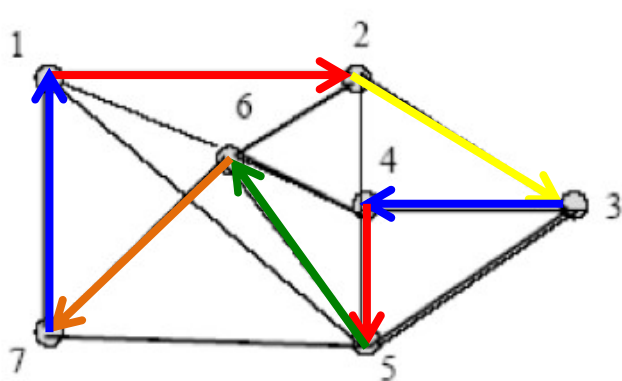
73

www.utm.my

**UTM**  
UNIVERSITI TEKNOLOGI MALAYSIA

## Exercise - Solution

**Manually check:** This graph has Hamiltonian cycle.



Each vertex has to be visited only once.  
For example: (1, 2, 3, 4, 5, 6, 7, 1)

innovative • entrepreneurial • global

74

www.utm.my

**UTM**  
UNIVERSITI TEKNOLOGI MALAYSIA

## Exercise

**Question:** Prove that this graph has Hamiltonian cycle.


innovative • entrepreneurial • global
75
www.utm.my

**UTM**  
UNIVERSITI TEKNOLOGI MALAYSIA

## Exercise

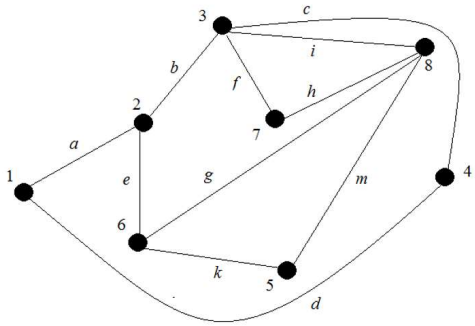
- Find a Hamiltonian cycle in this graph.

innovative • entrepreneurial • global
76
www.utm.my

 **UTM**  
UNIVERSITI TEKNOLOGI MALAYSIA

## Exercise Past Year 2015/2016

Determine whether the graph in Figure 4 has an Hamiltonian cycle. If yes, exhibit one.  
(3 marks)



**Figure 4**

77  
www.utm.my


innovative • entrepreneurial • global

 **UTM**  
UNIVERSITI TEKNOLOGI MALAYSIA

# Shortest Path Problem

78  
www.utm.my


innovative • entrepreneurial • global



## Shortest Path

- Let  $G$  be a weighted graph.
- Let  $u$  and  $v$  be two vertices in  $G$ , and let  $P$  be a path in  $G$  from  $u$  to  $v$ .
- The length of path  $P$ , written  $L(P)$ , is the sum of the weights of all the edges on path  $P$ .
- A **shortest path** from a vertex to another vertex is a path with the shortest length between the vertices.

innovative • entrepreneurial • global 79 www.utm.my




## Dijkstra's Shortest Path Algorithm

- 1.  $S := \emptyset$
- 2.  $N := V$
- 3. For all vertices,  $u \in V, u \neq a, L(u) := \infty$
- 4.  $L(a) := 0$

[http://en.wikipedia.org/wiki/Dijkstra%27s\\_algorithm](http://en.wikipedia.org/wiki/Dijkstra%27s_algorithm)


innovative • entrepreneurial • global 80 www.utm.my



 UTM  
UNIVERSITI TEKNOLOGI MALAYSIA

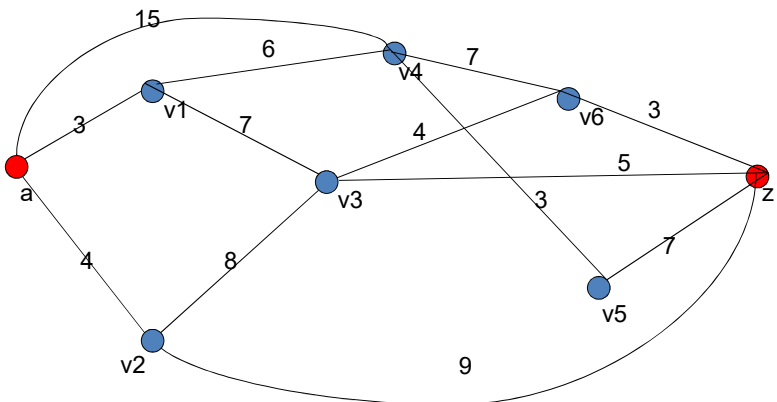
- 5. While  $z \notin S$  do,
  - 5.a : Let  $v \in N$  be such that
 
$$L(v) = \min\{L(u) \mid u \in N\}$$
  - 5.b :  $S := S \cup \{v\}$
  - 5.c :  $N := N - \{v\}$
  - 5.d : For all  $w \in N$  such that there is an edge from  $v$  to  $w$ 
    - 5.d.1: If  $L(v) + W[v, w] < L(w)$  then
 
$$L(w) = L(v) + W[v, w]$$

innovative • entrepreneurial • global 81 [www.utm.my](http://www.utm.my)

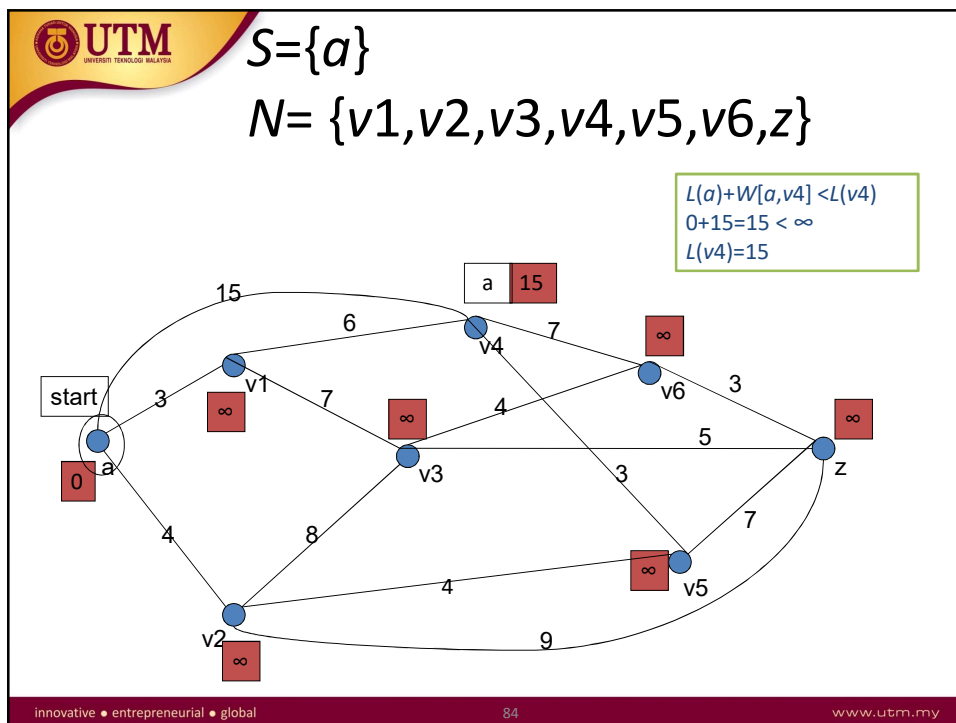
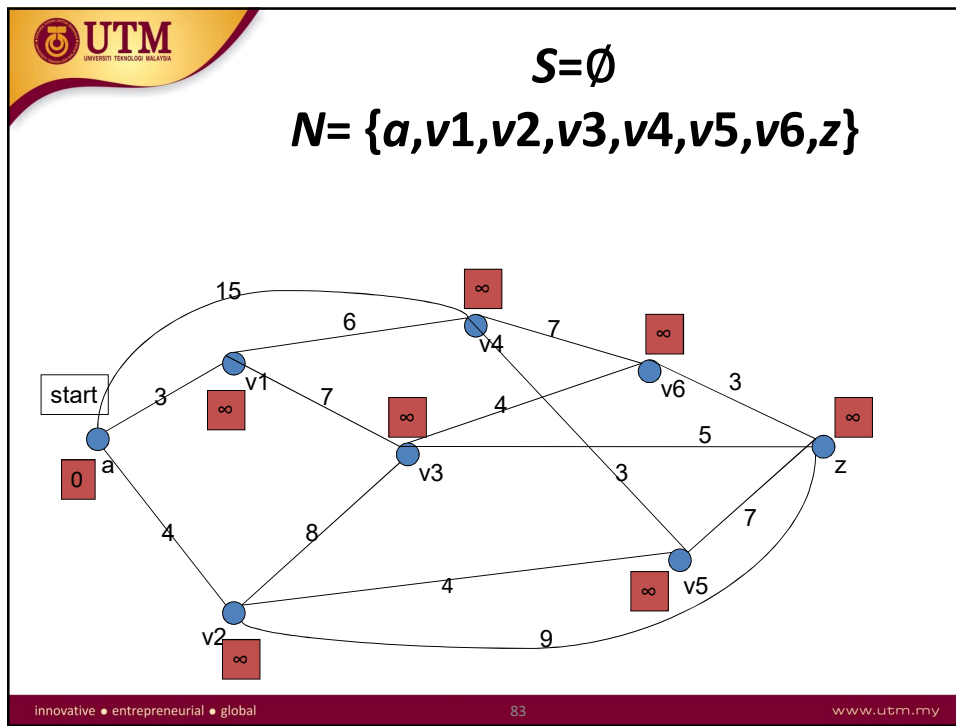
 UTM  
UNIVERSITI TEKNOLOGI MALAYSIA

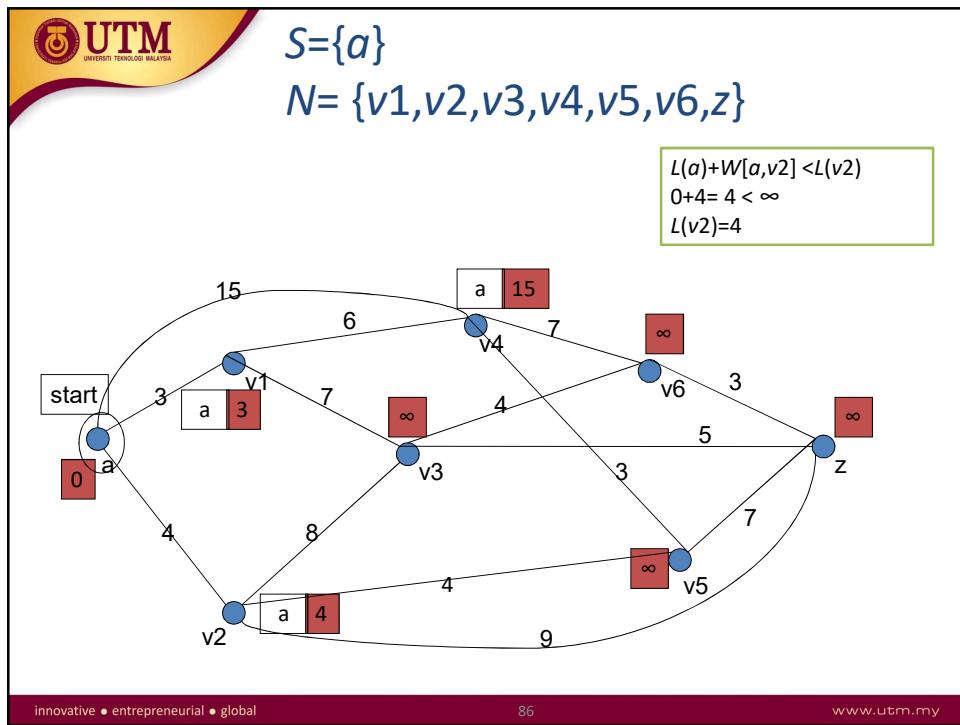
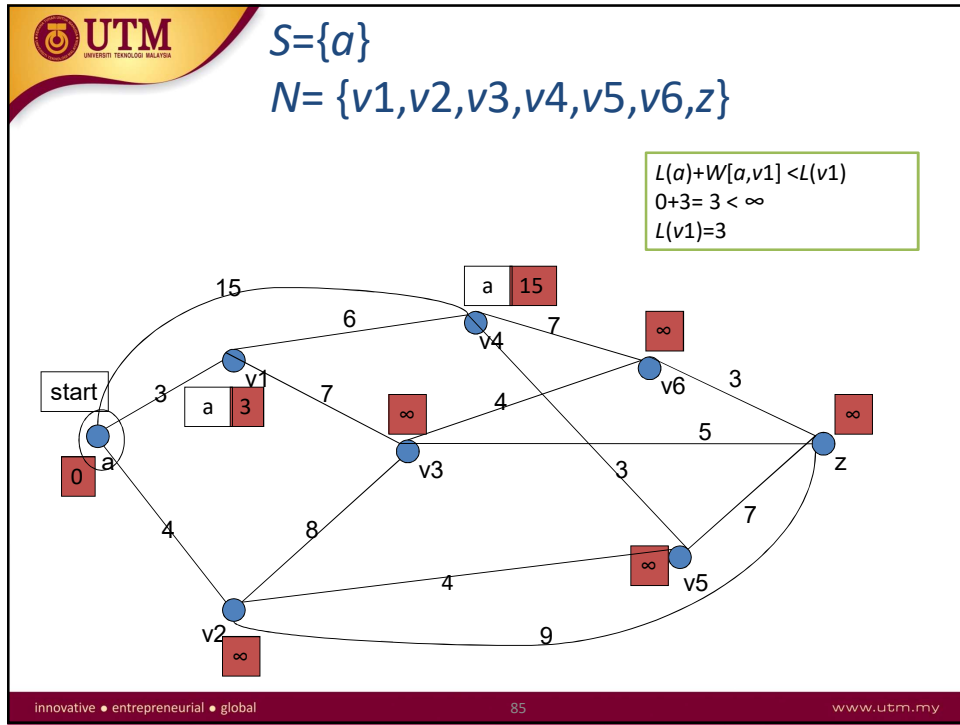
Example

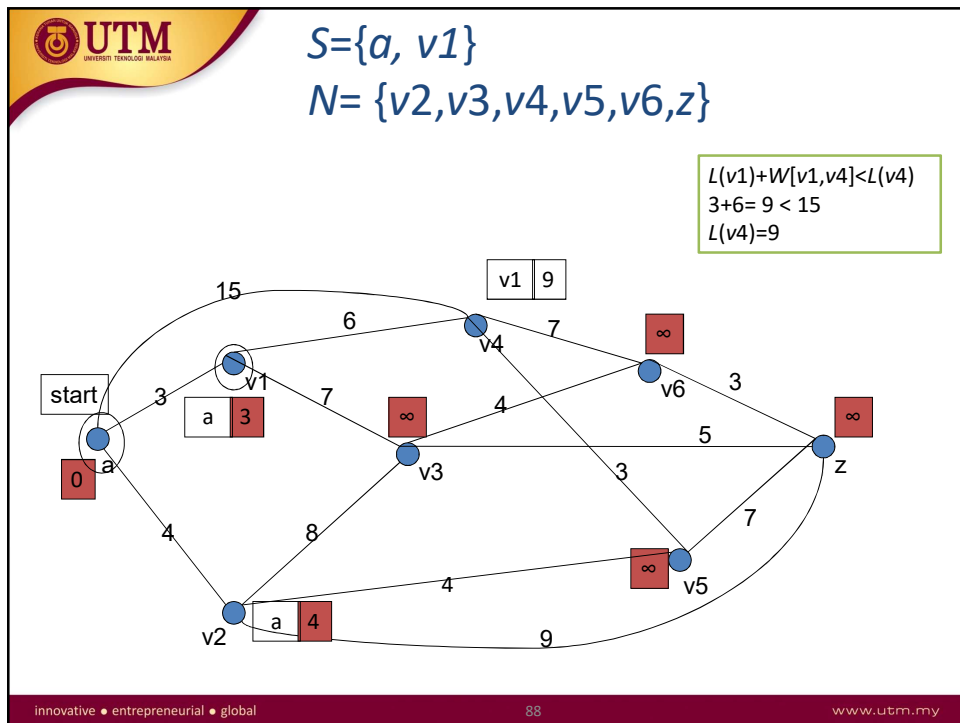
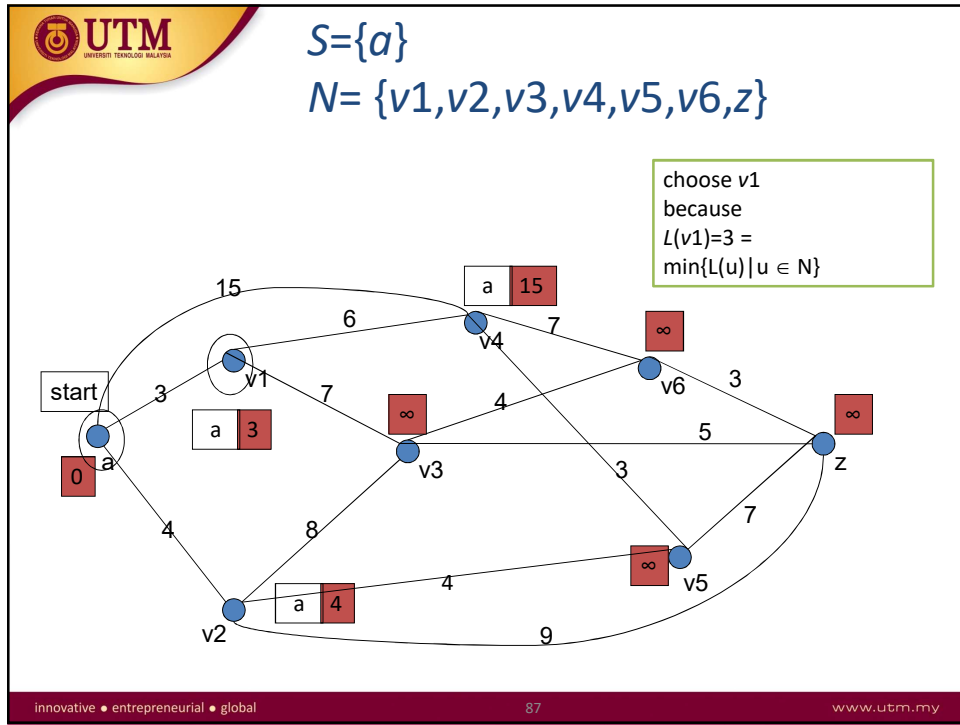
What is the shortest path from **a** to **z**?

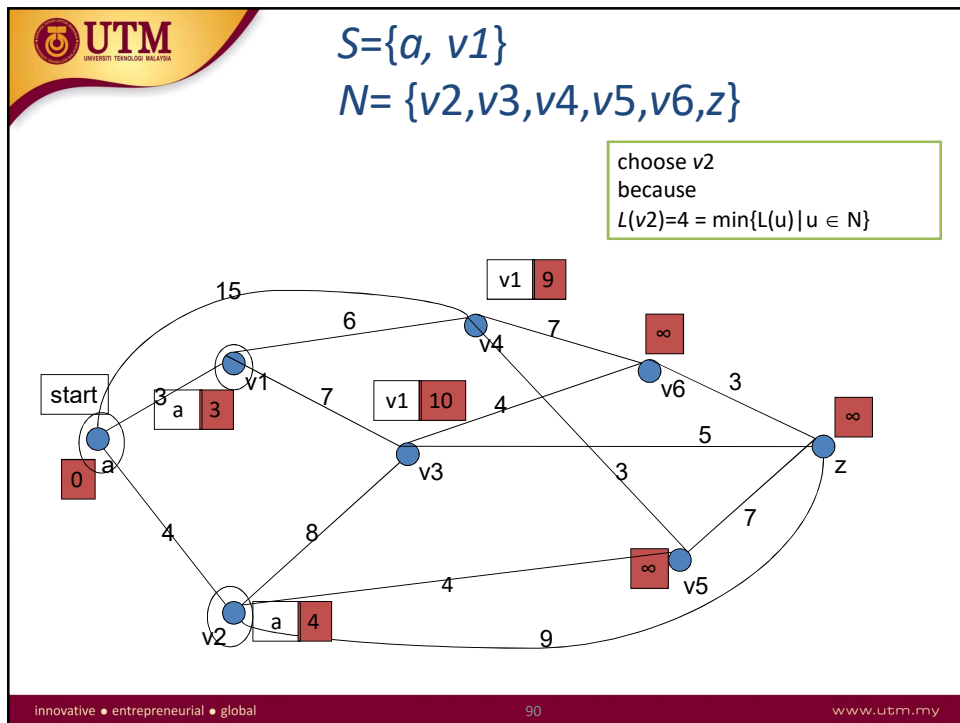
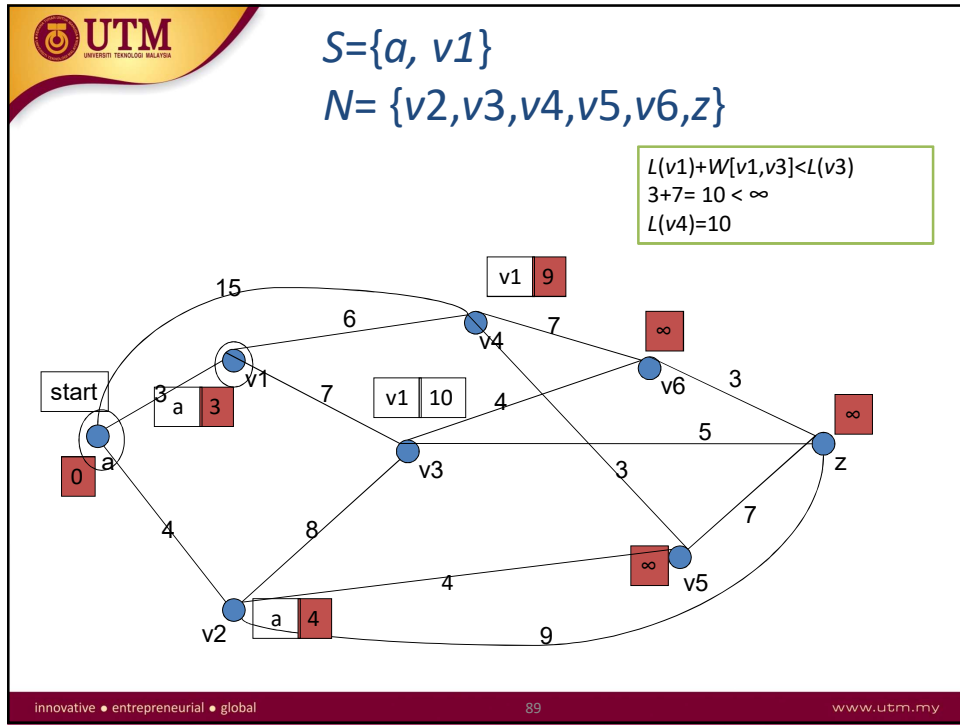


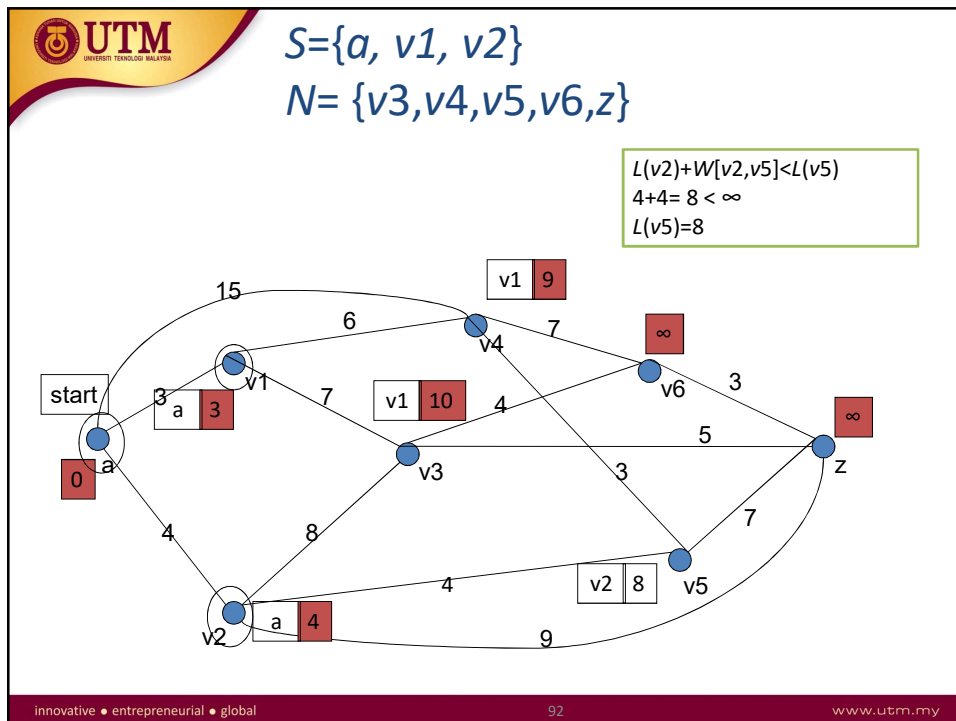
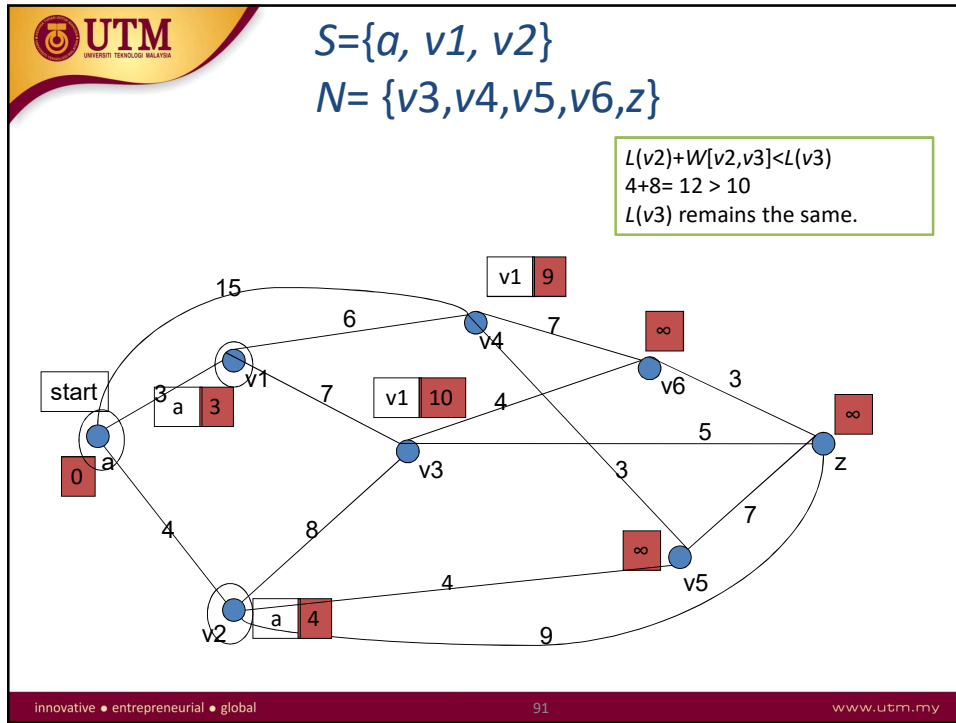
innovative • entrepreneurial • global 82 [www.utm.my](http://www.utm.my)

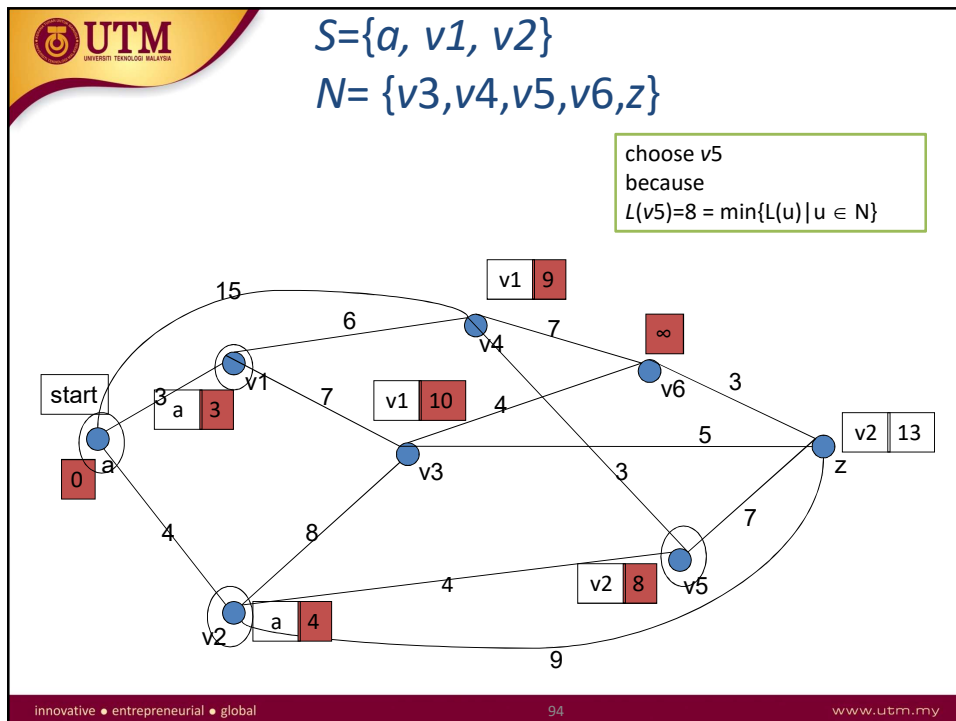
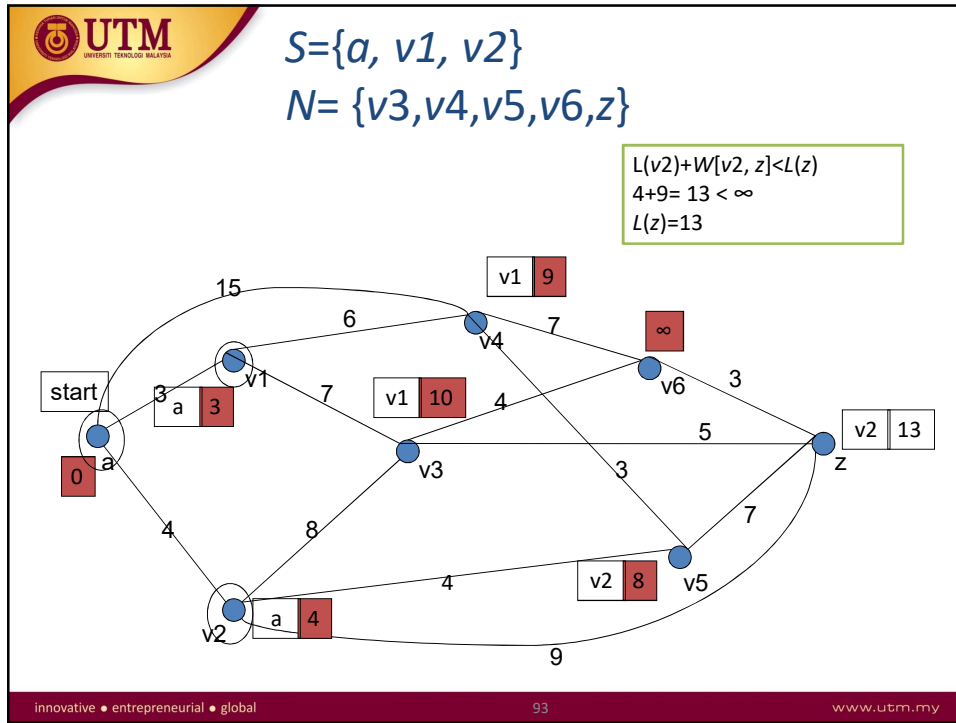


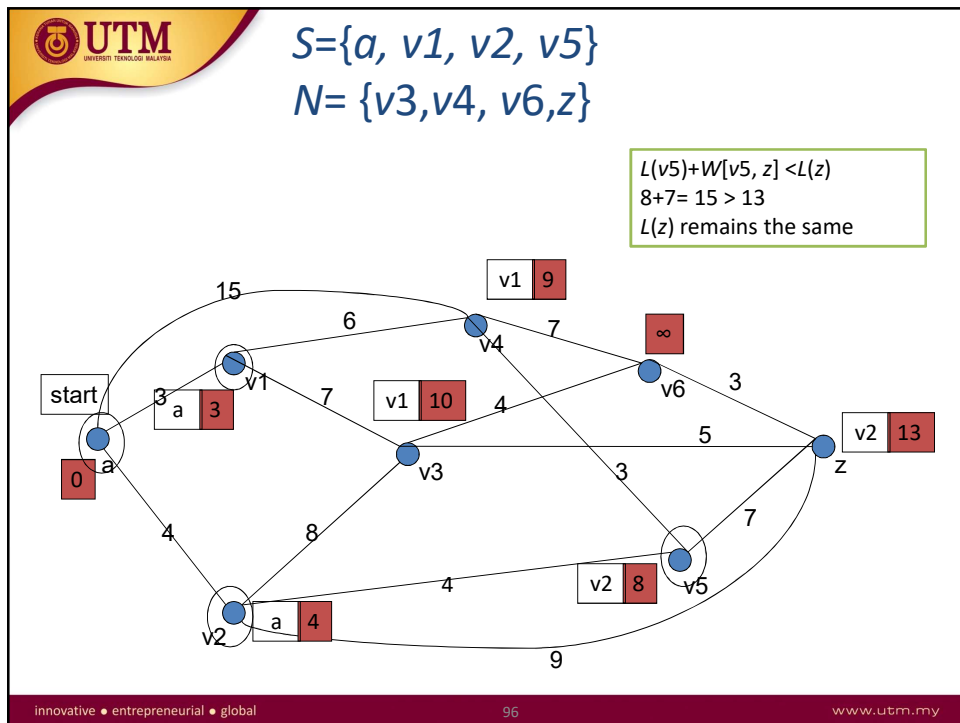
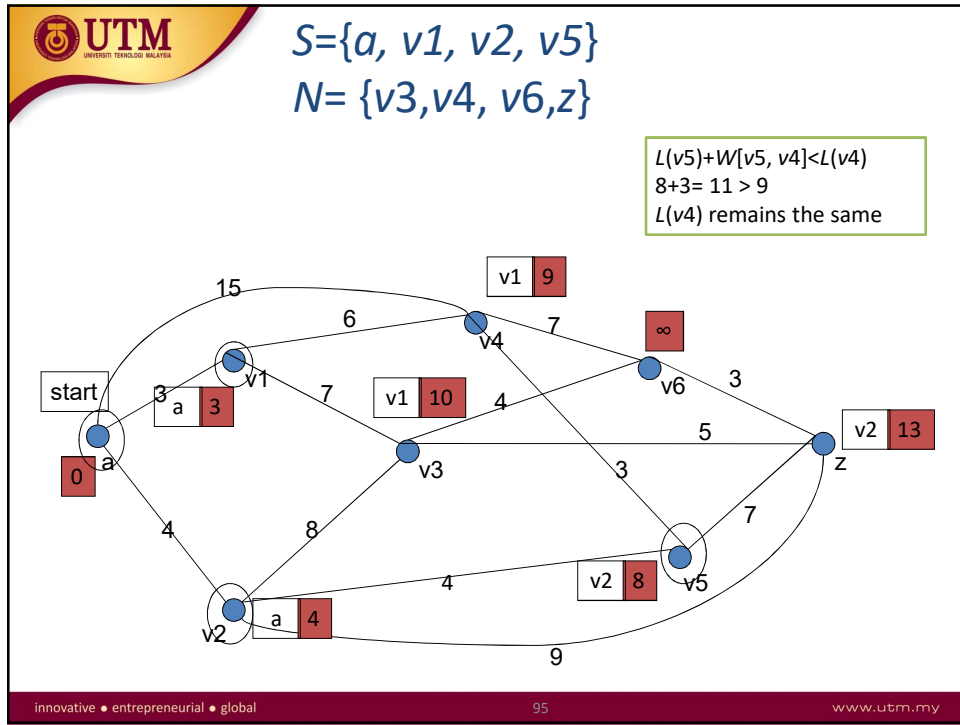




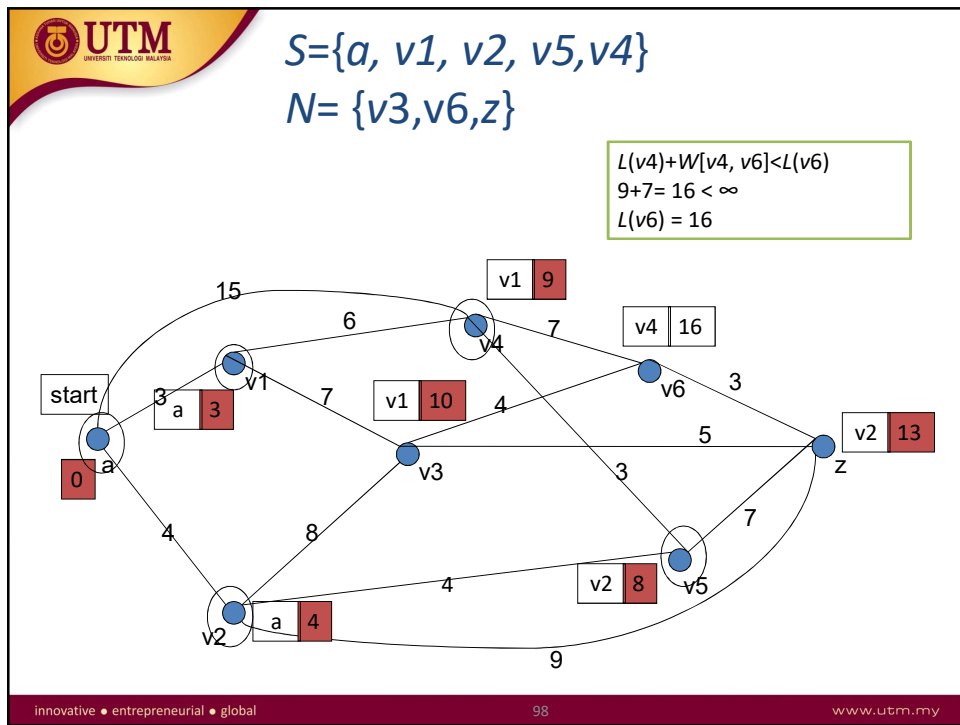
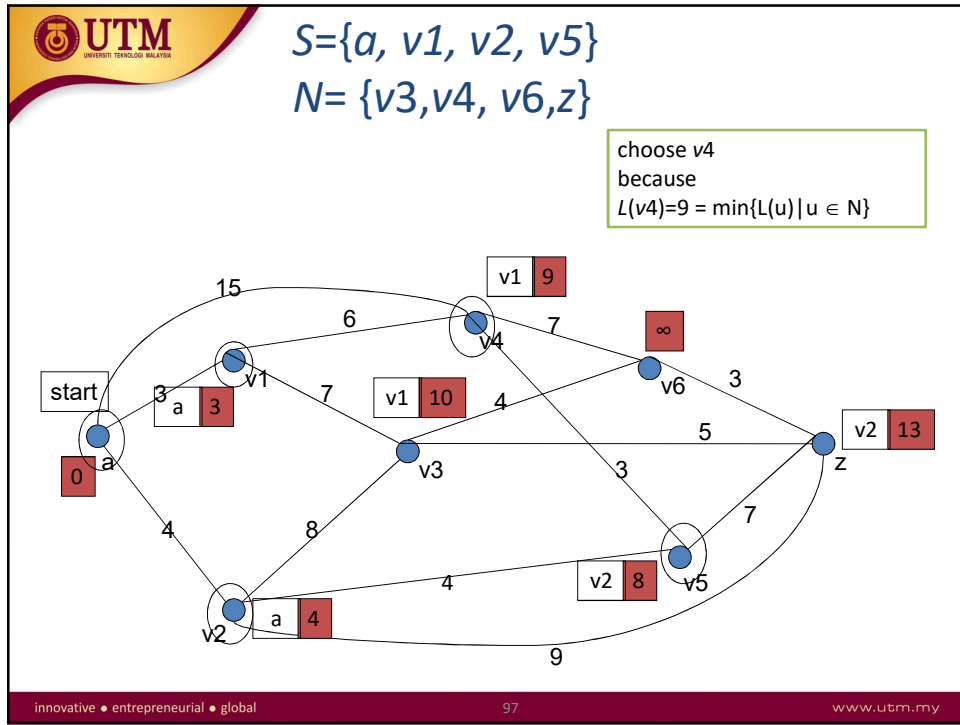


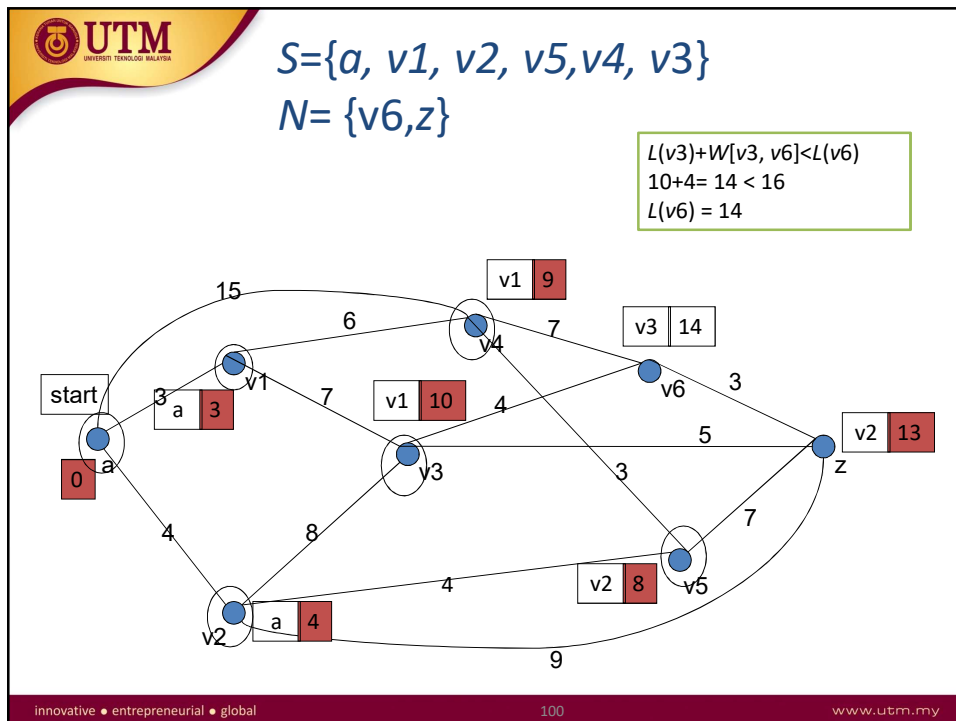
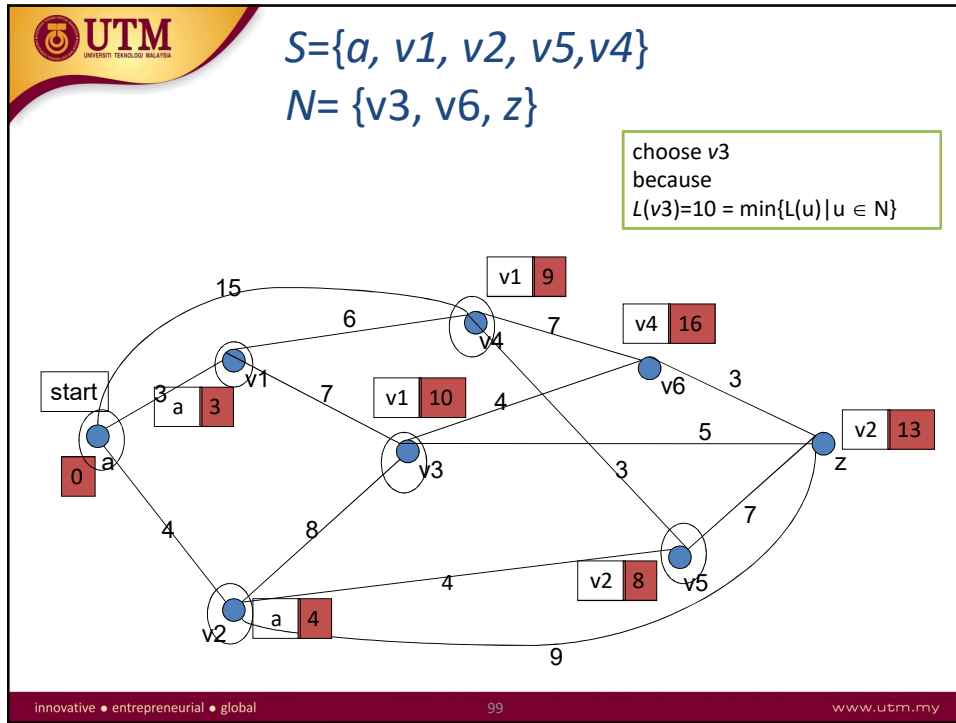


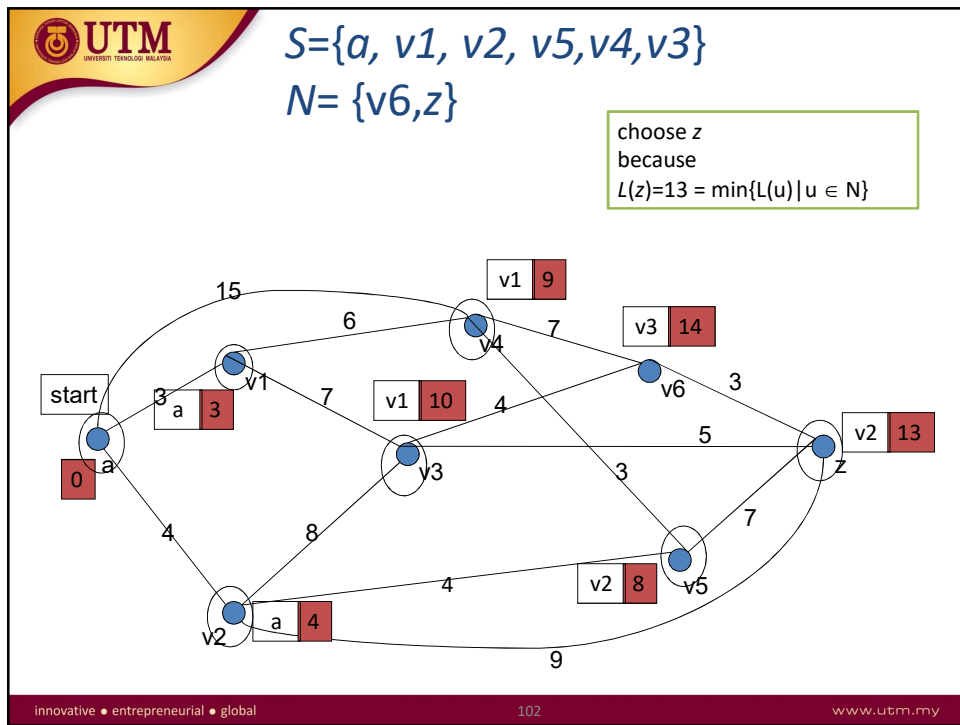
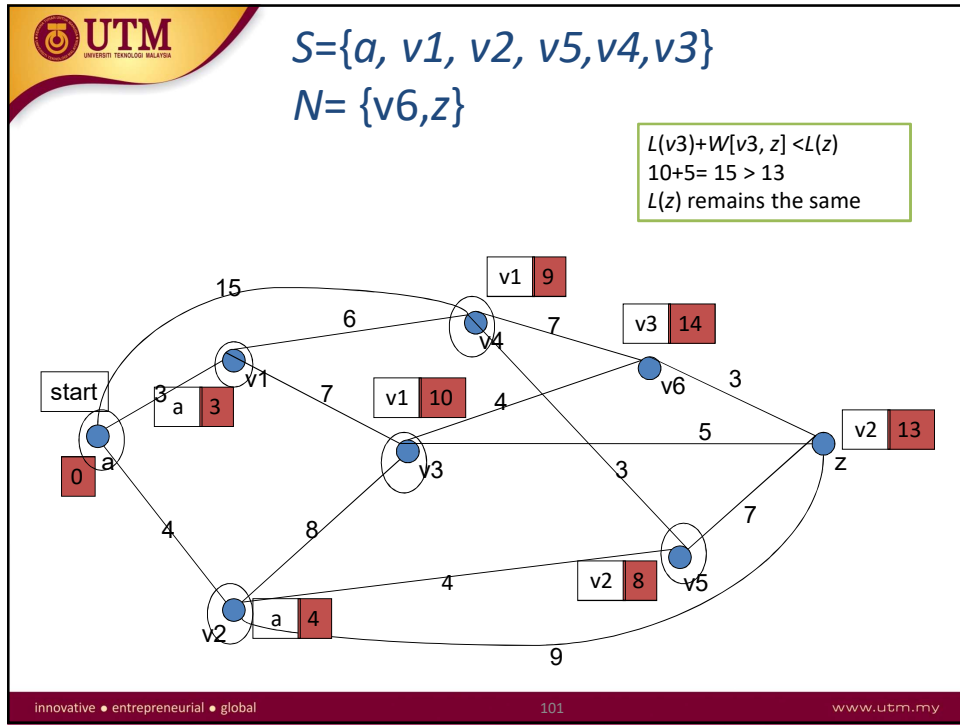


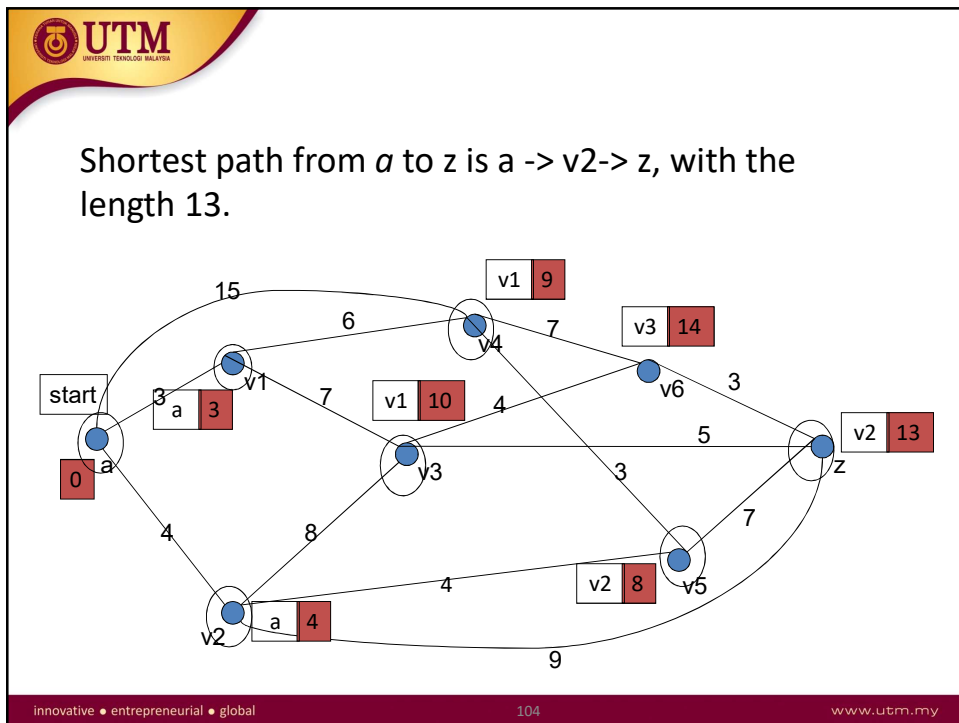
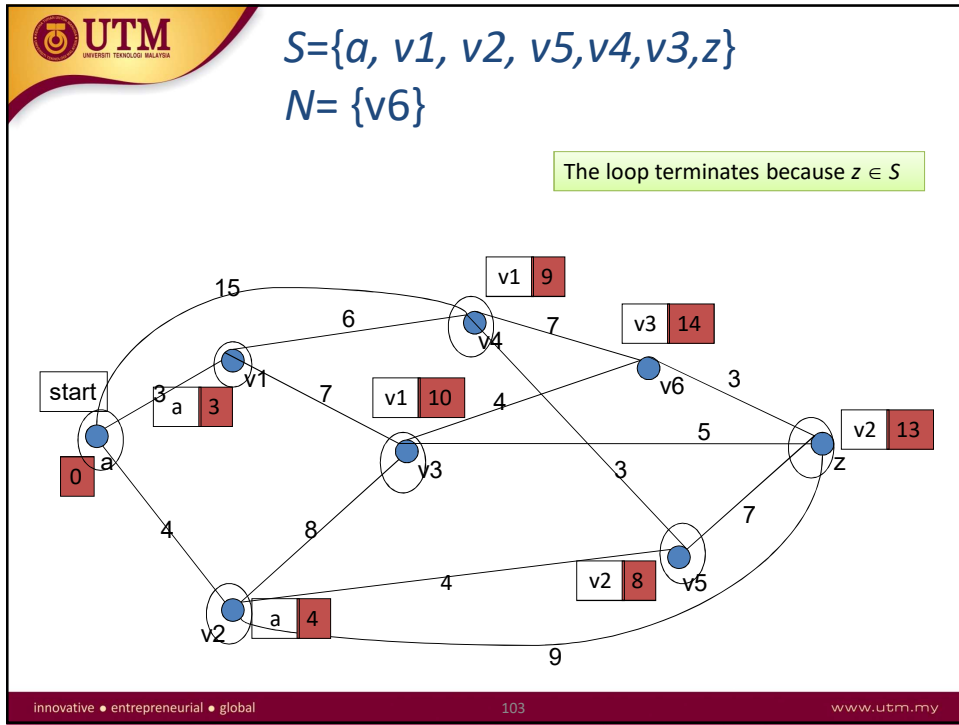








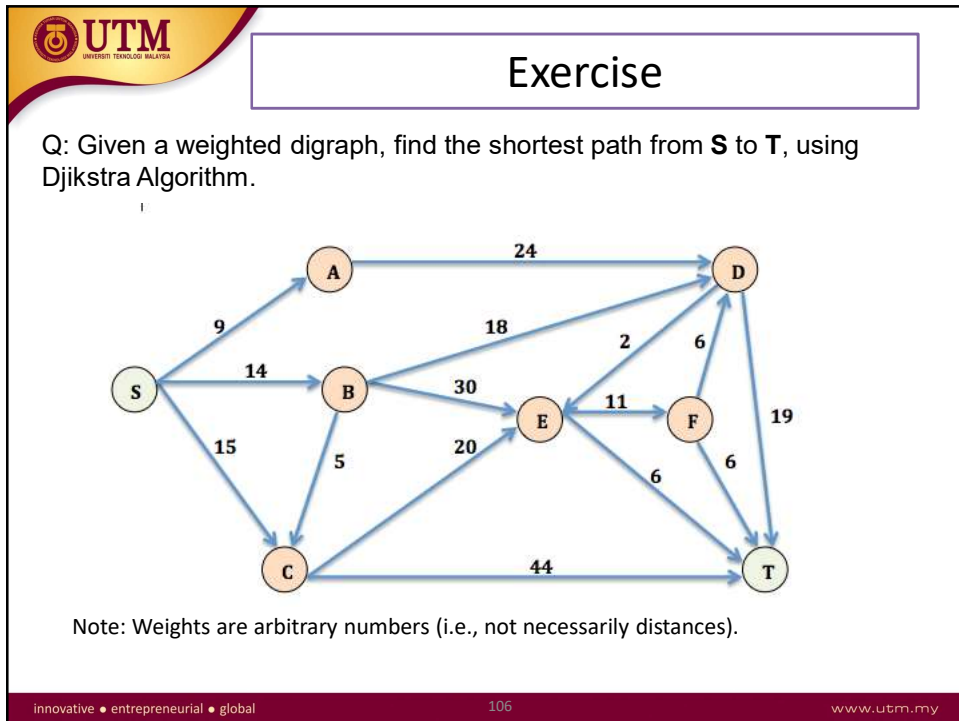





**Table – Dijkstra Algorithm**

No.	S	N	L(a)	L(V <sub>1</sub> )	L(V <sub>2</sub> )	L(V <sub>3</sub> )	L(V <sub>4</sub> )	L(V <sub>5</sub> )	L(V <sub>6</sub> )	L(z)
0	{ }	{a, V <sub>1</sub> , V <sub>2</sub> , V <sub>3</sub> , V <sub>4</sub> , V <sub>5</sub> , V <sub>6</sub> , z }	0	∞	∞	∞	∞	∞	∞	∞
1	{a}	{V <sub>1</sub> , V <sub>2</sub> , V <sub>3</sub> , V <sub>4</sub> , V <sub>5</sub> , L <sub>6</sub> , z }		3	4	∞	15	∞	∞	∞
2	{a, V <sub>1</sub> }	{V <sub>2</sub> , V <sub>3</sub> , V <sub>4</sub> , V <sub>5</sub> , L <sub>6</sub> , z }		3	4	10	9	∞	∞	∞
3	{a, V <sub>1</sub> , V <sub>2</sub> }	{V <sub>3</sub> , V <sub>4</sub> , V <sub>5</sub> , L <sub>6</sub> , z }			4	10	9	8	∞	13
4	{a, V <sub>1</sub> , V <sub>2</sub> , V <sub>3</sub> }	{V <sub>4</sub> , L <sub>6</sub> , z }				10	9	8	∞	13
5	{a, V <sub>1</sub> , V <sub>2</sub> , V <sub>3</sub> , V <sub>4</sub> }	{L <sub>6</sub> , z }				10	9		16	13
6	{a, V <sub>1</sub> , V <sub>2</sub> , V <sub>3</sub> , V <sub>4</sub> , V <sub>5</sub> }	{L <sub>6</sub> , z }				10			14	13
7	{a, V <sub>1</sub> , V <sub>2</sub> , V <sub>3</sub> , V <sub>4</sub> , V <sub>5</sub> , z }	{L <sub>6</sub> }							14	13

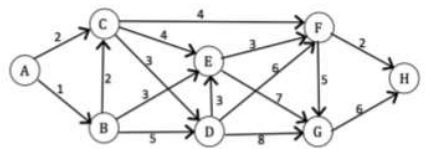
innovative • entrepreneurial • global
105
www.utm.my





## Exercise Past Year 2015/2016

The network in Figure 5 gives the distances in miles between pairs of cities A, B, ..., and H.



**Figure 5**

a) Based on Dijkstra's algorithm, complete Table 1 to find the shortest path from city A to city H. (Note: Copy Table 1 into your answer booklet). (8 marks)

**Table 1**

Iteration	S	N	L(A)	L(B)	L(C)	L(D)	L(E)	L(F)	L(G)	L(H)
0										
1										
2										
3										
4										
5										
6										
7										

b) State the minimum distance and the shortest path from city 1 to city 8. (2 marks)

innovative • entrepreneurial • global