

UTM
SCSI 1013: Discrete Structure

CHAPTER 4

GRAPH THEORY

Innovative • entrepreneurial • global www.utm.my

UTM

Definition of Graph

Innovative • entrepreneurial • global www.utm.my

UTM

- A graph G consists of two finite sets:
 - a nonempty set $V(G)$ of **vertices**.
 - a set $E(G)$ of **edges**, where each edge is associated with a set consisting of either one or two vertices called its **endpoints**.
 - f is a function, called an **incidence function**, that assign to each edge, $e \in E$, a one element subset $\{v\}$ or two elements subset $\{v, w\}$, where v and w are vertices.
- We can write G as (V, E, f) or (V, E) or simply as G .

Innovative • entrepreneurial • global www.utm.my

UTM

Example 1

Given a graph as shown below,

- Write a vertex set and the edge set, and give a table showing the edge-endpoint function.
- Find all edges that are incident on a , all vertices that are adjacent to a , all edges that are adjacent to e_2 , all loops, all parallel edges, all vertices that are adjacent to themselves and all isolated vertices.

Note: Solution – Refer module

Innovative • entrepreneurial • global www.utm.my

UTM

Example 2

- Let,
 - $V = \{v_1, v_2, v_3, v_4, v_5, v_6, v_7\}$
 - $E = \{e_1, e_2, e_3, e_4, e_5, e_6, e_7\}$
- And f be defined by:
 - $f(e_1) = f(e_2) = \{v_1, v_2\}$
 - $f(e_3) = \{v_4, v_3\}$
 - $f(e_4) = f(e_6) = f(e_7) = \{v_6, v_3\}$
 - $f(e_5) = \{v_2, v_4\}$

Question: What is the pictorial representation of G ?
* Solution – refer module (Fig. 4.5)

Innovative • entrepreneurial • global www.utm.my

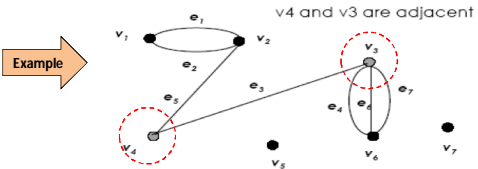
UTM

Characteristics of Graph

Innovative • entrepreneurial • global www.utm.my

(a) Adjacent Vertices

Two vertices that are connected by an edge are called adjacent; and a vertex that is an endpoint of a loop is said to be adjacent to itself.

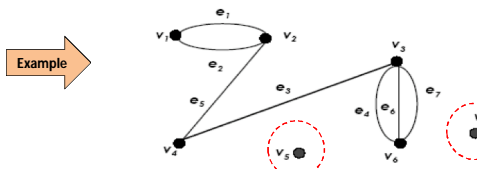
Example → 

Innovative • entrepreneurial • global 7 www.utm.my

b) Isolated Vertex

Let G be a graph and v be a vertex in G . We say that v is an isolated vertex if it is not incident with any edge.

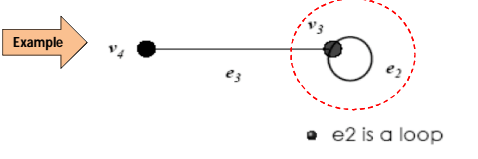
- v_5 and v_7 are isolated vertices.

Example → 

Innovative • entrepreneurial • global 8 www.utm.my

c) Loop

An edge with just one endpoint is called a loop.

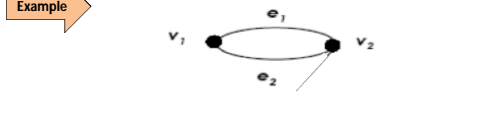
Example → 

Innovative • entrepreneurial • global 9 www.utm.my

d) Parallel Edges

Two or more distinct edges with the same set of endpoints are said to be parallel.

- e_1 and e_2 are parallel.

Example → 

Innovative • entrepreneurial • global 10 www.utm.my

The Concept of Degree

Innovative • entrepreneurial • global 11 www.utm.my

- Let G be a graph and v be a vertex in G .
- The **degree of v** , written $\text{deg}(v)$ or $d(v)$ is the number of edges incident with v .
- Each **loop** on a vertex v contributes 2 to the degree of v .

Innovative • entrepreneurial • global 12 www.utm.my

Example

State the degree of each vertex for the following graph.

$\deg(v_1) = 1; \deg(v_2) = 2; \deg(v_3) = 3; \deg(v_4) = 2$

Exercise

- Find the degree of each vertex in the graph.

Types of Graphs

a) Simple Graph

A graph G is called a simple graph if G does not contain any parallel edges and any loops.

Example →

b) Regular Graph

Let G be a graph and k be a nonnegative integer. G is called a k -regular graph if the degree of each vertex of G is k .

Example →

Fig. 1: Graph A Fig. 2: Graph B

c) Connected Graph

A graph G is connected if given any vertices v and w in G , there is a path from v to w .

Example ↓

Fig. 1: Connected graph Fig. 2: Not connected graph

d) Complete Graph

A simple graph with n vertices in which there is an edge between every pair of distinct vertices is called a complete graph on n vertices. This is denoted by K_n .

Example

K_2 K_3 K_4

Innovative • entrepreneurial • global 20 www.utm.my

e) Subgraph

A graph H is said to be a subgraph of a graph G if, every vertex in H is also a vertex in G , every edge in H is also an edge in G , and every edge in H has the same endpoints as it has in G .

Example

G H_1 H_2

Innovative • entrepreneurial • global 21 www.utm.my

Graph Representation

Innovative • entrepreneurial • global 22 www.utm.my

- To write programs that process and manipulate graphs, the graphs must be stored, that is, represented in computer memory.
- A graph can be represented (in computer memory) in several ways.
- 2-dimensional array: adjacency matrix and incidence matrix.

Innovative • entrepreneurial • global 23 www.utm.my

Adjacency Matrix

- Let G be a graph with n vertices.
- The adjacency matrix, A_G is an $n \times n$ matrix $[a_{ij}]$ such that,
 - a_{ij} = the number of edges from v_i to v_j , (undirected G)
 - or,
 - a_{ij} = the number of arrows from v_i to v_j , (directed G)
 for all $i, j = 1, 2, \dots, n$.

Innovative • entrepreneurial • global 24 www.utm.my

Example 1

[Matrix]

$$A_G = \begin{matrix} & \begin{matrix} v_1 & v_2 & v_3 & v_4 & v_5 & v_6 \end{matrix} \\ \begin{matrix} v_1 \\ v_2 \\ v_3 \\ v_4 \\ v_5 \\ v_6 \end{matrix} & \begin{bmatrix} 0 & 1 & 0 & 0 & 1 & 1 \\ 1 & 0 & 1 & 0 & 0 & 0 \\ 0 & 1 & 0 & 1 & 0 & 1 \\ 0 & 0 & 1 & 0 & 1 & 1 \\ 1 & 0 & 0 & 1 & 0 & 1 \\ 1 & 0 & 1 & 1 & 1 & 0 \end{bmatrix} \end{matrix}$$

Innovative • entrepreneurial • global 25 www.utm.my

Example 2

(Graph)

[Matrix]

$$A_G = \begin{bmatrix} v_1 & v_2 & v_3 & v_4 \\ 0 & 2 & 1 & 0 \\ 2 & 0 & 1 & 1 \\ 1 & 1 & 0 & 0 \\ 0 & 1 & 0 & 1 \end{bmatrix}$$

Example 3

Draw the graph based on the following matrix:

$$A_G = \begin{bmatrix} 1 & 0 & 1 & 1 & 0 \\ 0 & 0 & 2 & 0 & 1 \\ 1 & 2 & 0 & 0 & 0 \\ 1 & 0 & 0 & 1 & 1 \\ 0 & 1 & 0 & 1 & 0 \end{bmatrix}$$

- Adjacency matrix is a **symmetric matrix** if it is representing an undirected graph, where

$$a_{ij} = a_{ji}$$
- If the graph is directed graph, the presented matrix is not symmetrical.

Incidence Matrix

- Let G be a graph with n vertices and m edges.
- The incidence matrix, I_G is an $n \times m$ matrix $[a_{ij}]$ such that,

$$a_{ij} = \begin{cases} 0 & \text{if } v_i \text{ is not an end vertex of } e_j, \\ 1 & \text{if } v_i \text{ is an end vertex of } e_j, \text{ but } e_j \text{ is not a loop at } v_i \\ 2 & \text{if } e_j \text{ is a loop at } v_i \end{cases}$$

Example

(Graph)

[Matrix]

$$\begin{matrix} & e_1 & e_2 & e_3 & e_4 & e_5 \\ v_1 & 1 & 0 & 0 & 0 & 1 \\ v_2 & 1 & 2 & 1 & 0 & 0 \\ v_3 & 0 & 0 & 1 & 1 & 1 \\ v_4 & 0 & 0 & 0 & 1 & 0 \end{matrix}$$

$\deg(v_1) = 2;$
 $\deg(v_2) = 4;$
 $\deg(v_3) = 3;$
 $\deg(v_4) = 1$

Notice that the sum of the i -th row is the degree of v_i .

Exercise

- Find the adjacency matrix and the incidence matrix of the graph.

UTM

Exercise Past Year 2015/2016

A cat show is being judged from pictures of the cats. The judges would like to see pictures of the following pairs of cats next to each other for their final decision: Fifi and Putih, Fifi and Suri, Fifi and Bob, Bob and Cheta, Bob and Didi, Bob and Suri, Cheta and Didi, Didi and Suri, Didi and Putih, Suri and Putih, Putih and Jeep, Jeep and Didi.

Draw a graph modeling this situation. (3 marks)

37

Innovative • entrepreneurial • global www.utm.my

UTM

Exercise Past Year 2015/2016

Given a graph as shown in Figure 1.

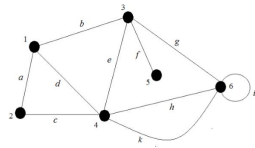


Figure 1

i. Find the incidence matrix of the graph. (4 marks)

ii. Find the adjacency matrix of the graph. (3 marks)

38

Innovative • entrepreneurial • global www.utm.my


UTM

Isomorphisms

36

Innovative • entrepreneurial • global www.utm.my

UTM



Are these two graphs (G_1 and G_2) are same?

When we say that 2 graphs are the same mean they are **isomorphic** to each other.

37

Innovative • entrepreneurial • global www.utm.my

UTM

Definition

Let $G = \{V, E\}$ and $G' = \{V', E'\}$ be graphs. G and G' are said to be isomorphic if there exist a pair of functions $f : V \rightarrow V'$ and $g : E \rightarrow E'$ such that f associates each element in V with exactly one element in V' and vice versa; g associates each element in E with exactly one element in E' and vice versa, and for each $v \in V$, and each $e \in E$, if v is an endpoint of the edge e , then $f(v)$ is an endpoint of the edge $g(e)$.

38

Innovative • entrepreneurial • global www.utm.my

UTM

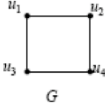
- ◆ If two graphs is isomorphic, they must have:
 - the same number of vertices and edges,
 - the same degrees for corresponding vertices,
 - the same number of connected components,
 - the same number of loops and parallel edges,
 - both graphs are connected or both graph are not connected,
 - pairs of connected vertices must have the corresponding pair of vertices connected.
- ◆ In general, it is easier to prove two graphs are not isomorphic by proving that one of the above properties fails.

39

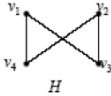
Innovative • entrepreneurial • global www.utm.my

Example 1

- Determine whether G is isomorphic to H .

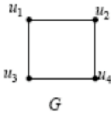


G

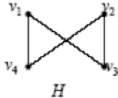


H

Example 1 - Solution

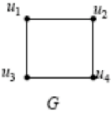


G

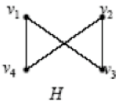


H

- Both graphs are simple and have the same number of vertices and the same number of edges.
- All the vertices of both graphs have degree 2.
- Define $f: U \rightarrow V$, where $U = \{u_1, u_2, u_3, u_4\}$ and $V = \{v_1, v_2, v_3, v_4\}$; $f(u_1) = v_1$; $f(u_2) = v_4$; $f(u_3) = v_3$; $f(u_4) = v_2$.



G



H

- To verify whether G and H are isomorphic, we examine the adjacency matrix A_G with rows and columns labeled in the order u_1, u_2, u_3, u_4 , and the adjacency matrix A_H with rows and columns labeled in the order v_1, v_2, v_3, v_4 .

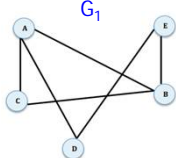
- A_G and A_H are the same, G and H are isomorphic.

$$A_G = \begin{matrix} & \begin{matrix} u_1 & u_2 & u_3 & u_4 \end{matrix} \\ \begin{matrix} u_1 \\ u_2 \\ u_3 \\ u_4 \end{matrix} & \begin{pmatrix} 0 & 1 & 1 & 0 \\ 1 & 0 & 0 & 1 \\ 1 & 0 & 0 & 1 \\ 0 & 1 & 1 & 0 \end{pmatrix} \end{matrix}$$

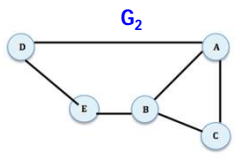
$$A_H = \begin{matrix} & \begin{matrix} v_1 & v_4 & v_3 & v_2 \end{matrix} \\ \begin{matrix} v_1 \\ v_4 \\ v_3 \\ v_2 \end{matrix} & \begin{pmatrix} 0 & 1 & 1 & 0 \\ 1 & 0 & 0 & 1 \\ 1 & 0 & 0 & 1 \\ 0 & 1 & 1 & 0 \end{pmatrix} \end{matrix}$$

Exercise

Q: Show that the following two graphs are isomorphic.



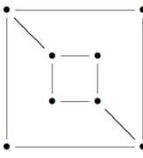
G_1



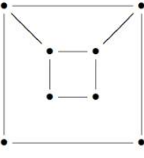
G_2

Exercise

Q: Is these two graphs are isomorphic?



G



H

UTM

Exercise Past Year 2015/2016

Determine whether the graphs in Figure 2 (A and B) are isomorphic. If the graphs are isomorphic, find their adjacency matrices; otherwise, give an invariant that the graphs do not share. (6 marks)

Innovative • entrepreneurial • global www.utm.my

UTM

Trails, Paths & Circuits

Innovative • entrepreneurial • global www.utm.my

UTM

Term and Description

- A **walk** from v to w is a finite alternating sequence of adjacent vertices and edges of G . Thus a walk has the form

$$(v_0, e_1, v_1, e_2, v_2, \dots, v_{n-1}, e_n, v_n)$$
 where the v 's represent vertices, the e 's represent edges, $v = v_0$, $w = v_n$, and for $i = 1, 2, \dots, n$, v_{i-1} and v_i are the endpoints of e_i .
- A **trivial walk** from v to w consist of the single vertex v .
- The **length of a walk** is the number of edges it has.

Innovative • entrepreneurial • global www.utm.my

UTM

Term and Description (cont.)

- A **trail** from v to w is a walk from v to w that does not contain a repeated edge.
- A **path** from v to w is a trail from v to w that does not contain a repeated vertex.
- A **closed walk** is a walk that start and ends at the same vertex.
- A **circuit/cycle** is a closed walk that contains at least one edge and does not contain a repeated edge.
- A **simple circuit** is a circuit that does not have any other repeated vertex except the first and the last.

Innovative • entrepreneurial • global www.utm.my

UTM

Example 1 – Trail & Path

- (1, a, 2, b, 3, c, 4, d, 2, e, 5) is a trail.
- (6, g, 5, e, 2, d, 4) is a path.

Note:
Trail: No repeated edge (can repeat vertex).
Path: No repeated vertex and edge.

Innovative • entrepreneurial • global www.utm.my

UTM

Example 2 – Cycle/circuit

- (2, f, 6, g, 5, e, 2, d, 4, c, 3, b, 2) is a cycle.

Note: cycle → start and end at same vertex, no repeated edge.

Innovative • entrepreneurial • global www.utm.my

Example 3 – Simple Cycle

- $(5, g, 6, f, 2, e, 5)$ is a simple cycle.

Note: Simple cycle \rightarrow start and end at same vertex, no repeated edge or vertex except for the start and end vertex.

Exercise

Tell whether the following is either a walk, trail, path, cycle, simple cycle, closed walk or none of these.

- (v_1, e_1, v_2)
- $(v_2, e_2, v_3, e_3, v_4, e_4, v_3)$
- $(v_4, e_7, v_5, e_6, v_1, e_1, v_2, e_2, v_3, e_3, v_4)$
- $(v_4, e_4, v_3, e_3, v_4, e_5, v_2, e_1, v_1, e_6, v_5, e_7, v_4)$

Euler Path & Circuit

The town of Königsberg in Prussia (now Kaliningrad in Russia) was built at a point where two branches of the Pregel River came together. It consisted of an island and some land along the river banks. These were connected by seven bridges as shown in figure below:

Königsberg Bridge Problem

Problem: Starting at one land area, is it possible to walk across all of the bridges exactly once and return to the starting land area?

- Graph of the Königsberg Bridge Problem

no Euler cycle

Solution: It is not possible to walk across all of the bridges exactly once and return to the starting land area. Therefore, two additional bridges have been constructed on the Pregel river.

Euler Circuit

Let G be a graph. An **Euler circuit** for G is a circuit that contains every vertex and every edges of G . That is, an Euler circuit for G is a sequence of adjacent vertices and edges in G that has at least one edges, starts and ends at the same vertex, uses every vertex of G at least once, and uses every edge of G exactly once.

Example 1

(1, a, 2, c, 5, e, 5, d, 4, f, 3, g, 2, b, 1) is an Euler cycle

Euler Trail

Let G be a graph, and let v and w be two distinct vertices of G . An **Euler trail** from v to w is a sequence of adjacent vertices and edges that starts at v and ends at w , passes through every vertex of G at least once, and traverses every edge of G exactly once.

Example 2

(1, a, 2, c, 5, e, 5, d, 4, f, 3, b, 2) is an Euler trail

Theorem - Euler

- If G is a connected graph and every vertex has even degree, then G has an Euler circuit.
- A graph has an Euler trail from v to w ($v \neq w$) if and only if it is connected and v and w are the only vertices having odd degree.

Example 3

This graph has an Euler cycle

Vertex	1	2	3	4	5	6	7
Degree	2	4	4	4	2	2	4

Example 4

This graph has an Euler cycle

Vertex	1	2	3	4	5	6
Degree	2	4	2	4	2	2

Example 5

This graph has an Euler trail.

Vertex	1	2	3	4	5	6
Degree	2	3	3	2	2	2

Exercise

Q: Which of the following graphs has Euler circuit?
Justify your answer.

G₁

G₂

Exercise Past Year 2015/2016

Determine whether the graph in Figure 3 has an Euler cycle or Euler path. If the graph has an Euler cycle or Euler path, exhibit one; otherwise, give an argument that shows there is no Euler path. (4 marks)

Figure 3

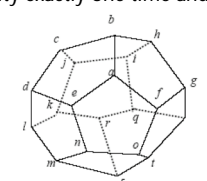
Hamilton Circuits

Hamiltonian Circuits

Given a graph G , a **Hamiltonian circuit** for G is a simple circuit that includes every vertex of G (but doesn't need to include all edges). That is, a Hamiltonian circuit for G is a sequence of adjacent vertices and distinct edges in which **every vertex of G appears exactly once, except for the first and the last, which are the same.**

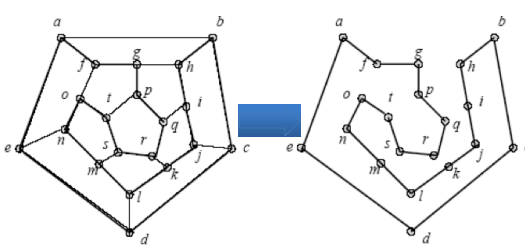
Example

- Sir William Rowan Hamilton marketed a puzzle in the mid-1800s in the form of dodecahedron.
- Each corner bore the name of a city.
- The problem was to start at any city, travel along the edges, visit each city exactly one time and return to the initial city.



Innovative • entrepreneurial • global 71 www.utm.my

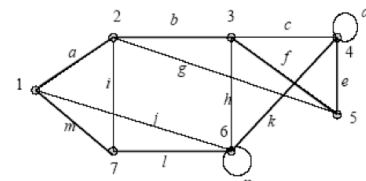
Example



(a): The graph (b): Hamilton circuit

Innovative • entrepreneurial • global 72 www.utm.my

Example



This graph has a Hamilton circuit.

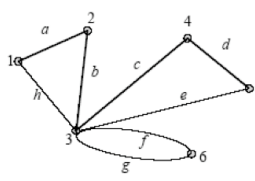
(1, a, 2, b, 3, f, 5, e, 4, k, 6, l, 7, m, 1)

- Visit each vertex just once.

Innovative • entrepreneurial • global 73 www.utm.my

Example

This graph does not contain Hamilton circuit.



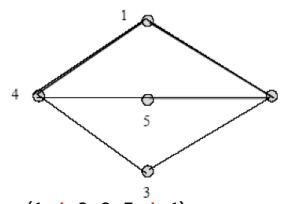
(1, a, 2, b, 3, g, 6, f, 3, e, 5, d, 4, c, 3, h, 1)

- Vertex (3) has to be visited more than once.

Innovative • entrepreneurial • global 74 www.utm.my

Example

Question: Is this graph has Hamiltonian cycle?



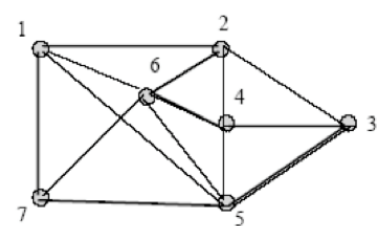
Solution: (1, 4, 3, 2, 5, 4, 1)

- Vertex (4) has to be visited more than once.

Innovative • entrepreneurial • global 75 www.utm.my

Exercise

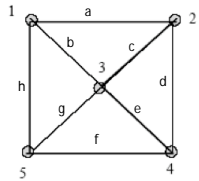
Question: Is this graph has Hamiltonian cycle?



Innovative • entrepreneurial • global 76 www.utm.my

Exercise

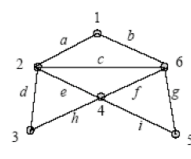
Question: Prove that this graph has Hamiltonian cycle.



Innovative • entrepreneurial • global www.utm.my

Exercise

• Find a Hamiltonian cycle in this graph.



Innovative • entrepreneurial • global www.utm.my

Exercise
Past Year 2015/2016

Determine whether the graph in Figure 4 has a Hamiltonian cycle. If yes, exhibit one. (3 marks)

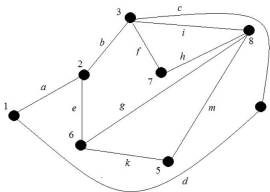


Figure 4

Innovative • entrepreneurial • global www.utm.my

Shortest Path Problem

Innovative • entrepreneurial • global www.utm.my

Shortest Path

- Let G be a weighted graph.
- Let u and v be two vertices in G , and let P be a path in G from u to v .
- The length of path P , written $L(P)$, is the sum of the weights of all the edges on path P .
- A **shortest path** from a vertex to another vertex is a path with the shortest length between the vertices.

Innovative • entrepreneurial • global www.utm.my

Dijkstra's Shortest Path Algorithm

1. $S := \emptyset$
2. $N := V$
3. For all vertices, $u \in V, u \neq a, L(u) := \infty$
4. $L(a) := 0$

http://en.wikipedia.org/wiki/Dijkstra%27s_algorithm

Innovative • entrepreneurial • global www.utm.my

UTM

- 5. While $z \notin S$ do,
 - 5.a :Let $v \in N$ be such that $L(v) = \min\{L(u) \mid u \in N\}$
 - 5.b : $S := S \cup \{v\}$
 - 5.c : $N := N - \{v\}$
 - 5.d : For all $w \in N$ such that there is an edge from v to w
 - 5.d.1: If $L(v) + W[v, w] < L(w)$ then $L(w) = L(v) + W[v, w]$

Innovative • entrepreneurial • global 86 www.utm.my

UTM

Example

What is the shortest path from a to z ?

Innovative • entrepreneurial • global 87 www.utm.my

UTM

$S = \emptyset$
 $N = \{a, v1, v2, v3, v4, v5, v6, z\}$

Innovative • entrepreneurial • global 88 www.utm.my

UTM

$S = \{a\}$
 $N = \{v1, v2, v3, v4, v5, v6, z\}$

$L(a) + W[a, v4] < L(v4)$
 $0 + 15 = 15 < \infty$
 $L(v4) = 15$

Innovative • entrepreneurial • global 89 www.utm.my

UTM

$S = \{a\}$
 $N = \{v1, v2, v3, v4, v5, v6, z\}$

$L(a) + W[a, v1] < L(v1)$
 $0 + 3 = 3 < \infty$
 $L(v1) = 3$

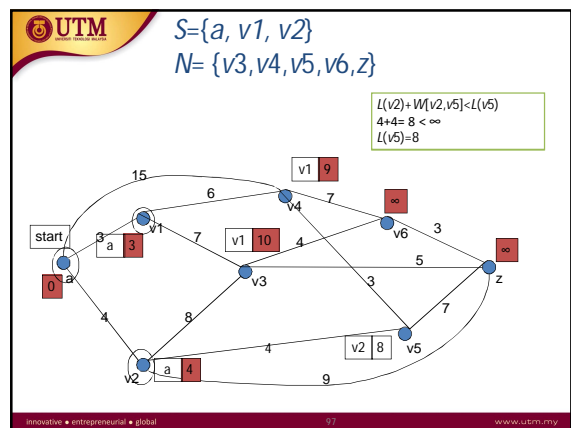
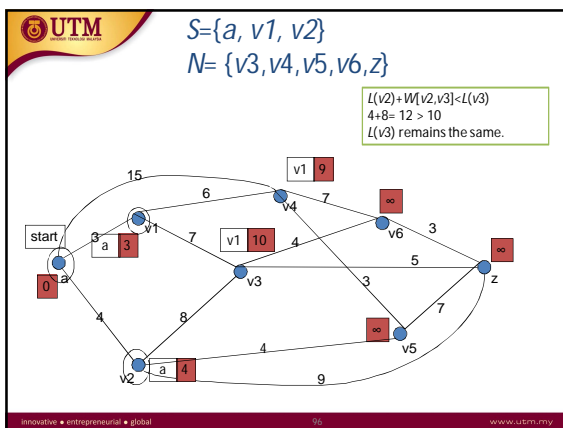
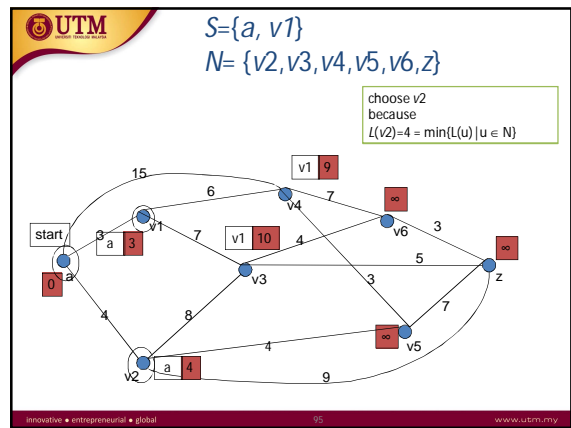
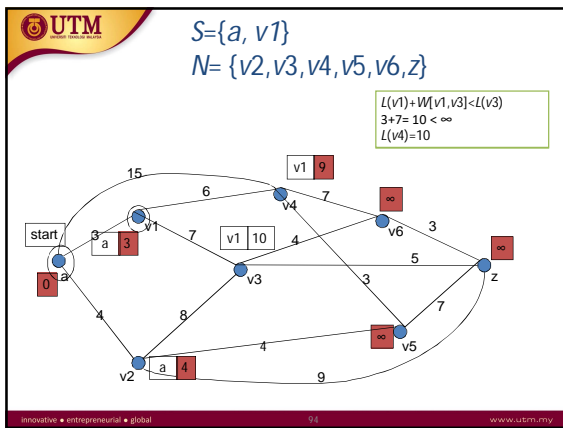
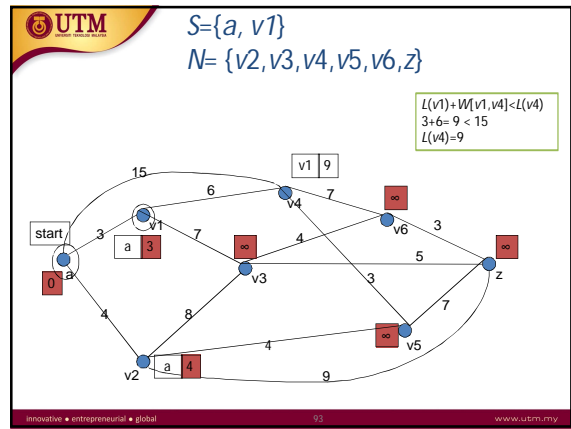
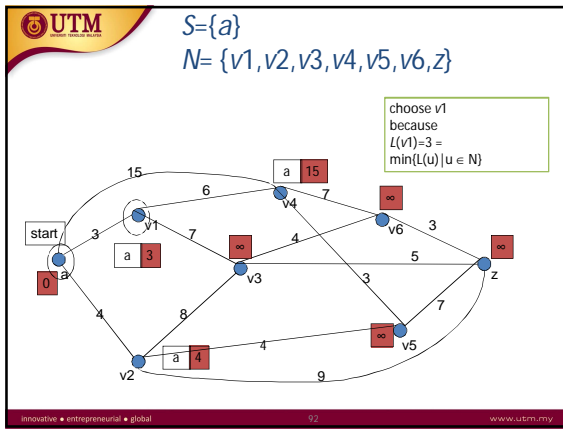
Innovative • entrepreneurial • global 90 www.utm.my

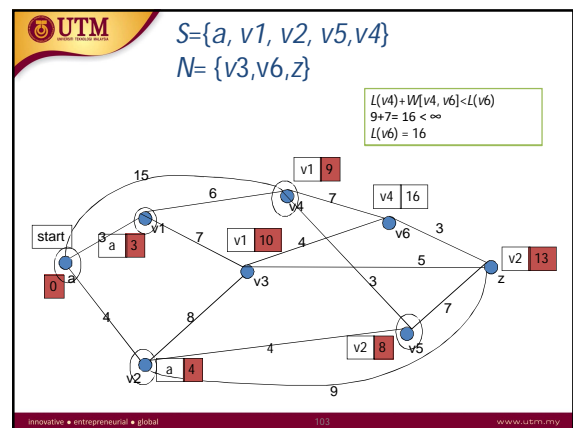
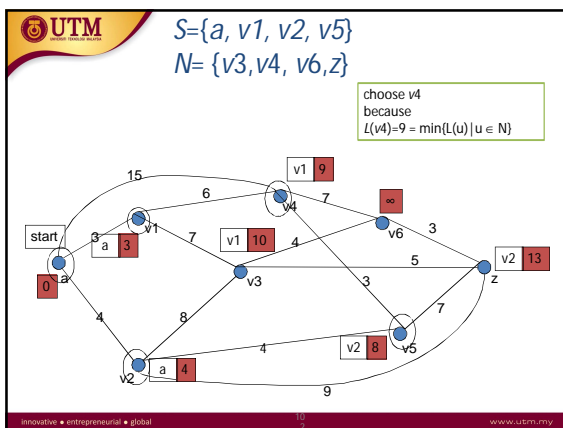
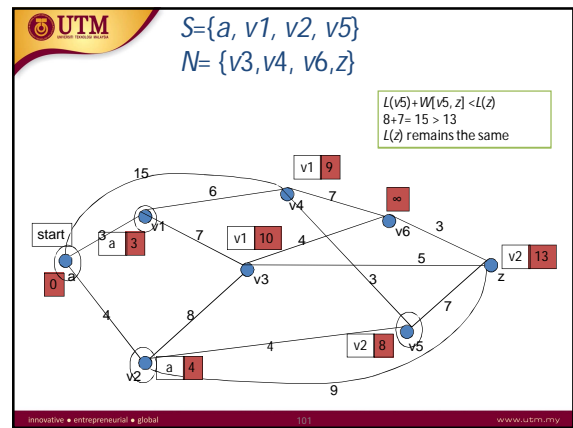
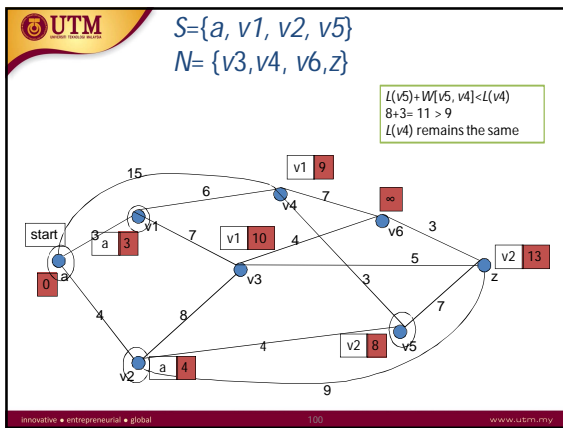
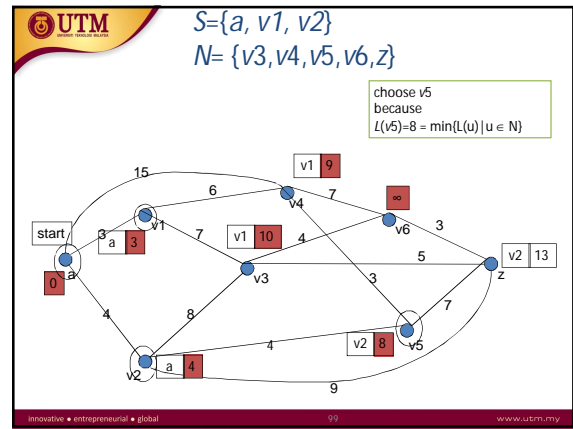
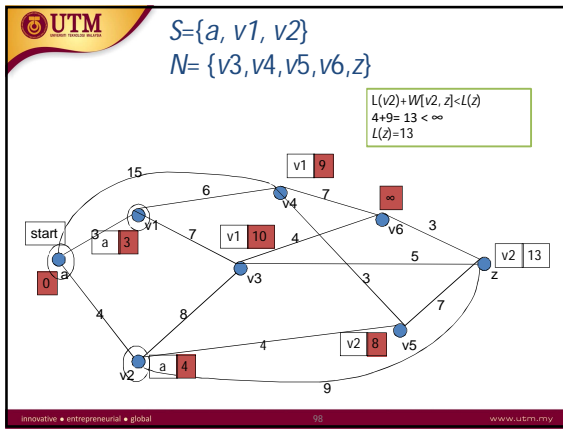
UTM

$S = \{a\}$
 $N = \{v1, v2, v3, v4, v5, v6, z\}$

$L(a) + W[a, v2] < L(v2)$
 $0 + 4 = 4 < \infty$
 $L(v2) = 4$

Innovative • entrepreneurial • global 91 www.utm.my





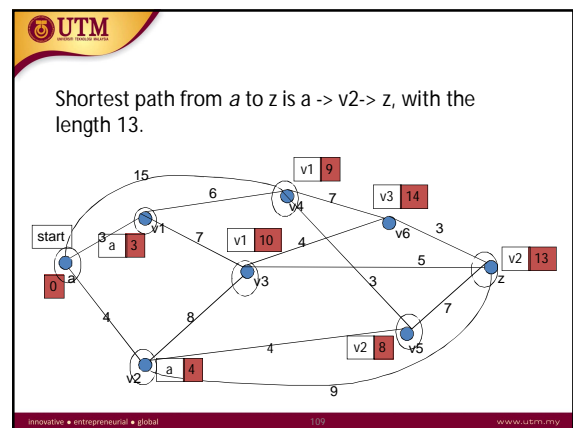
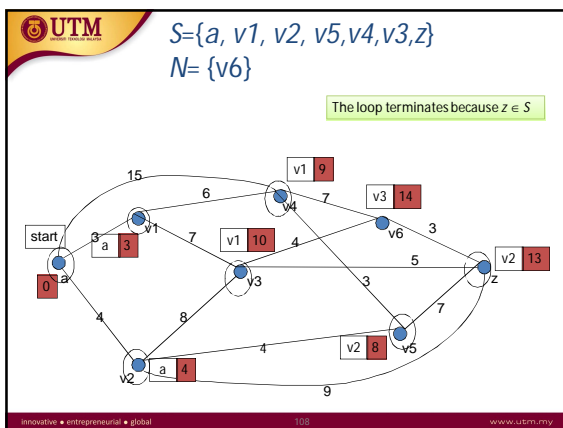
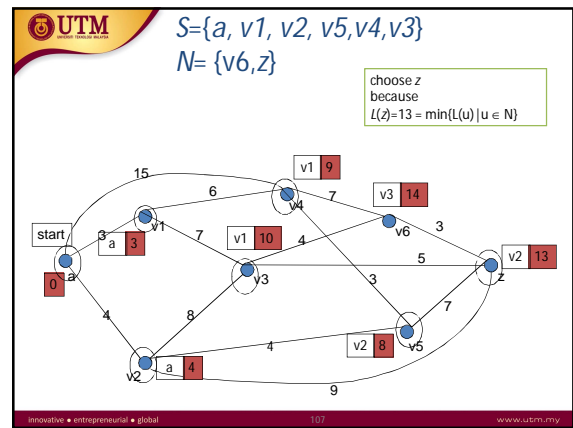
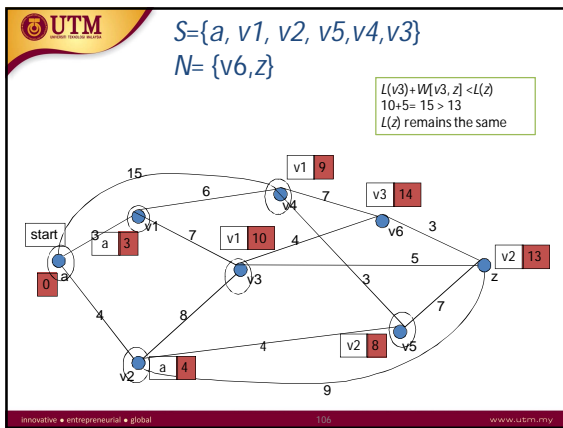
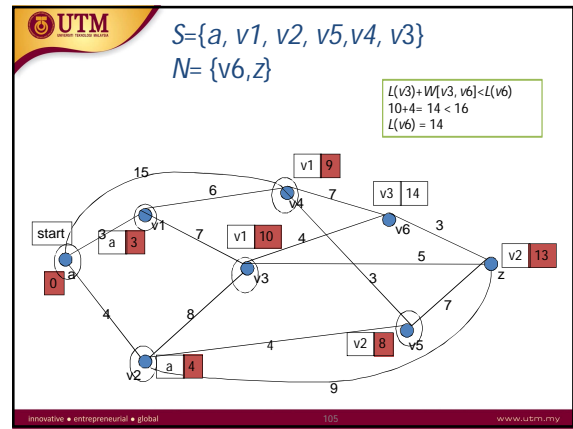
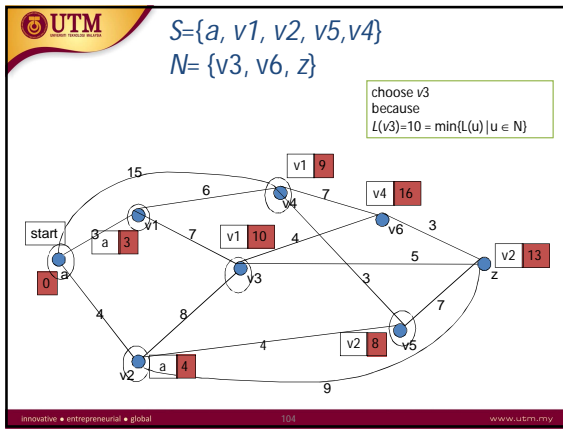


Table – Dijkstra Algorithm

Sno.	S	N	L(u)	L(v ¹)	L(v ²)	L(v ³)	L(v ⁴)	L(v ⁵)	L(v ⁶)	L(v ⁷)	L(z)
0	{ }	{u, v ₁ , v ₂ , v ₃ , v ₄ , v ₅ , v ₆ , z}	0	∞	∞	∞	∞	∞	∞	∞	∞
1	{u}	{v ₁ , v ₂ , v ₃ , v ₄ , v ₅ , v ₆ , z}		3	4	∞	15	∞	∞	∞	∞
2	{u, v ₁ }	{v ₂ , v ₃ , v ₄ , v ₅ , v ₆ , z}		3	4	10	9	∞	∞	∞	∞
3	{u, v ₁ , v ₂ }	{v ₃ , v ₄ , v ₅ , v ₆ , z}			4	10	9	8	∞	∞	13
4	{u, v ₁ , v ₂ , v ₃ }	{v ₄ , v ₅ , v ₆ , z}				10	9	8	∞	∞	13
5	{u, v ₁ , v ₂ , v ₃ , v ₄ }	{v ₅ , v ₆ , z}				10	9	8	16	∞	13
6	{u, v ₁ , v ₂ , v ₃ , v ₄ , v ₅ }	{v ₆ , z}					10	8	14	∞	13
7	{u, v ₁ , v ₂ , v ₃ , v ₄ , v ₅ , v ₆ }	{z}						10	14	13	13

Exercise

Q: Given a weighted digraph, find the shortest path from S to T, using Dijkstra Algorithm.

Note: Weights are arbitrary numbers (i.e., not necessarily distances).

The network in Figure 5 gives the distances in miles between pairs of cities A, B, ..., and H.

Figure 5

a) Based on Dijkstra's algorithm, complete Table 1 to find the shortest path from city A to city H. (Note: Copy Table 1 into your answer booklet). (8 marks)

Table 1

Iteration	S	N	L(A)	L(B)	L(C)	L(D)	L(E)	L(F)	L(G)	L(H)
0										
1										
2										
3										
4										
5										
6										
7										

b) State the minimum distance and the shortest path from city 1 to city 8. (2 marks)