


UNIVERSITI TEKNOLOGI MALAYSIA

**SCSI 1013: Discrete Structure**

**CHAPTER 4**

**GRAPH THEORY**


innovative • entrepreneurial • global [www.utm.my](http://www.utm.my)



UNIVERSITI TEKNOLOGI MALAYSIA


**Definition of Graph**

innovative • entrepreneurial • global [www.utm.my](http://www.utm.my)

 **UTM**  
UNIVERSITI TEKNOLOGI MALAYSIA

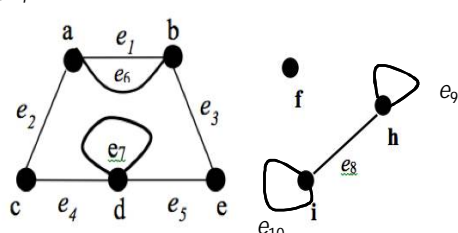
- A graph  $G$  consists of two finite sets:
  - a nonempty set  $V(G)$  of **vertices**.
  - a set  $E(G)$  of **edges**, where each edge is associated with a set consisting of either one or two vertices called its **endpoints**.
  - $f$  is a function, called an **incidence function**, that assign to each edge,  $e \in E$ , a one element subset  $\{v\}$  or two elements subset  $\{v, w\}$ , where  $v$  and  $w$  are vertices.
- We can write  $G$  as  $(V, E, f)$  or  $(V, E)$  or simply as  $G$ .

innovative • entrepreneurial • global 3 [www.utm.my](http://www.utm.my)

 **UTM**  
UNIVERSITI TEKNOLOGI MALAYSIA

## Example 1

Given a graph as shown below,




a) Write a vertex set and the edge set, and give a table showing the edge-endpoint function.

a) Find all edges that are incident on **a**, all vertices that are adjacent to **a**, all edges that are adjacent to  $e_2$ , all loops, all parallel edges, all vertices that are adjacent to themselves and all isolated vertices.

**Note:** [Solution – Refer module](#)

innovative • entrepreneurial • global 4 [www.utm.my](http://www.utm.my)




## Example 2

- Let,
  - $V = \{v_1, v_2, v_3, v_4, v_5, v_6, v_7\}$
  - $E = \{e_1, e_2, e_3, e_4, e_5, e_6, e_7\}$
- And  $f$  be defined by:
  - $f(e_1) = f(e_2) = \{v_1, v_2\}$
  - $f(e_3) = \{v_4, v_3\}$
  - $f(e_4) = f(e_5) = f(e_6) = \{v_6, v_3\}$
  - $f(e_7) = \{v_2, v_4\}$

Question: What is the pictorial representation of  $G$ ?


\* [Solution – refer module \(Fig. 4.5\)](#)

innovative • entrepreneurial • global 5 www.utm.my



# Characteristics of Graph

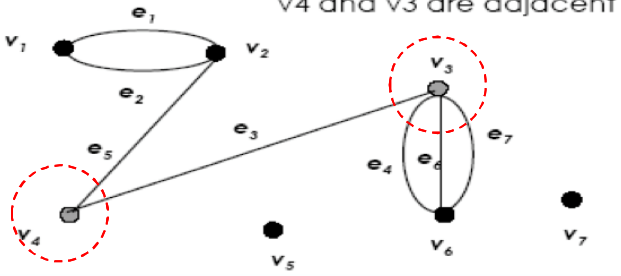
innovative • entrepreneurial • global 6 www.utm.my

 **UTM**  
UNIVERSITI TEKNOLOGI MALAYSIA

### (a) Adjacent Vertices


Two vertices that are connected by an edge are called adjacent; and a vertex that is an endpoint of a loop is said to be adjacent to itself.

**Example** →



v4 and v3 are adjacent

innovative • entrepreneurial • global 7 www.utm.my

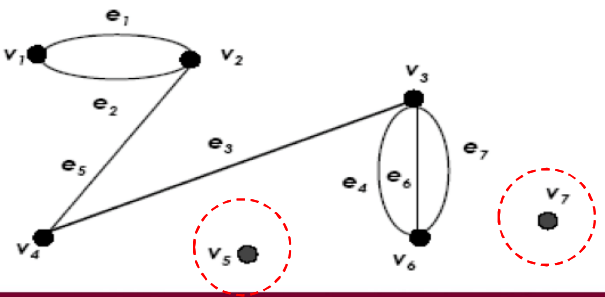
 **UTM**  
UNIVERSITI TEKNOLOGI MALAYSIA

### b) Isolated Vertex

Let  $G$  be a graph and  $v$  be a vertex in  $G$ . We say that  $v$  is an isolated vertex if it is not incident with any edge.

- $v_5$  and  $v_7$  are isolated vertices.

**Example** →



innovative • entrepreneurial • global 8 www.utm.my

**UTM**  
UNIVERSITI TEKNOLOGI MALAYSIA

### c) Loop

An edge with just one endpoint is called a loop.

**Example** →

• e2 is a loop

innovative • entrepreneurial • global 9 www.utm.my

**UTM**  
UNIVERSITI TEKNOLOGI MALAYSIA

### d) Parallel Edges


Two or more distinct edges with the same set of endpoints are said to be parallel.

•  $e_1$  and  $e_2$  are **parallel**.

**Example** →

• e2 is a loop


innovative • entrepreneurial • global 10 www.utm.my



UTM  
UNIVERSITI TEKNOLOGI MALAYSIA

# The Concept of Degree


innovative • entrepreneurial • global 11 www.utm.my



UTM  
UNIVERSITI TEKNOLOGI MALAYSIA

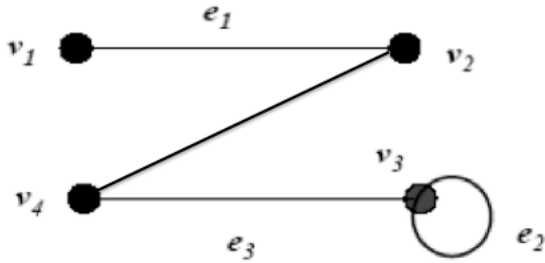
- Let  $G$  be a graph and  $v$  be a vertex in  $G$ .
- The **degree of  $v$** , written  $\text{deg}(v)$  or  $d(v)$  is the number of edges incident with  $v$ .
- Each **loop** on a vertex  $v$  contributes 2 to the degree of  $v$ .

innovative • entrepreneurial • global 12 www.utm.my

 **UTM**  
UNIVERSITI TEKNOLOGI MALAYSIA


## Example

State the degree of each vertex for the following graph.



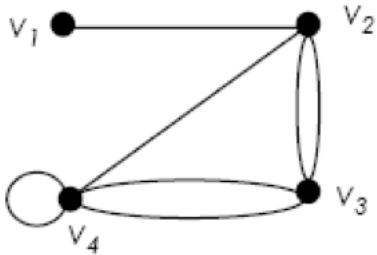
$\deg(v_1) = 1$ ;  $\deg(v_2) = 2$ ;  $\deg(v_3) = 3$ ;  $\deg(v_4) = 2$

innovative • entrepreneurial • global 13 www.utm.my


 **UTM**  
UNIVERSITI TEKNOLOGI MALAYSIA

## Exercise

- Find the degree of each vertex in the graph.



innovative • entrepreneurial • global 14 www.utm.my




**Types of Graphs**

innovative • entrepreneurial • global

16

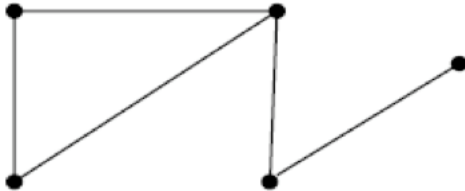
www.utm.my



**a) Simple Graph**

A graph  $G$  is called a simple graph if  $G$  does not contain any parallel edges and any loops.

Example →



innovative • entrepreneurial • global

17

www.utm.my

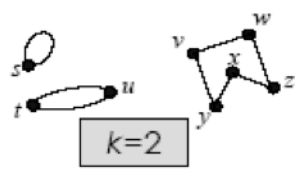


**UTM**  
UNIVERSITI TEKNOLOGI MALAYSIA

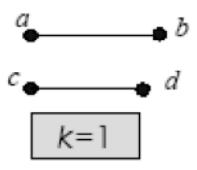
## b) Regular Graph

Let  $G$  be a graph and  $k$  be a nonnegative integer.  $G$  is called a  $k$ -regular graph if the degree of each vertex of  $G$  is  $k$ .

**Example** →



**Fig.1: Graph A**



**Fig.2: Graph B**

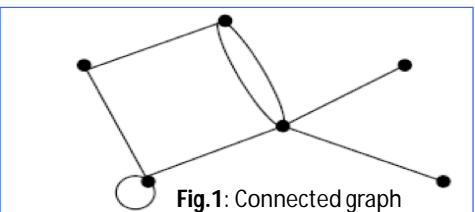
innovative • entrepreneurial • global 18 www.utm.my

**UTM**  
UNIVERSITI TEKNOLOGI MALAYSIA

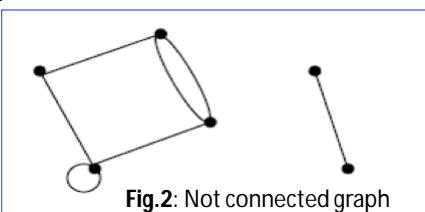
## c) Connected Graph

A graph  $G$  is connected if given any vertices  $v$  and  $w$  in  $G$ , there is a path from  $v$  to  $w$ .

**Example** ↓



**Fig.1: Connected graph**



**Fig.2: Not connected graph**

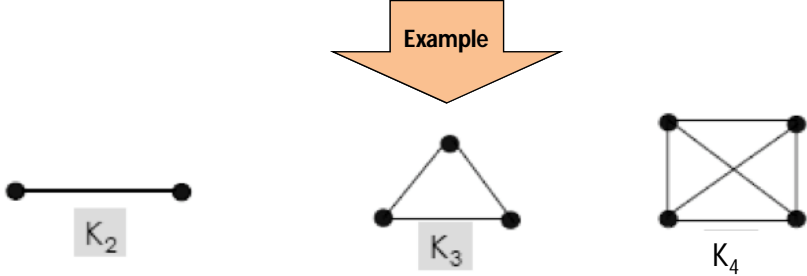
innovative • entrepreneurial • global 19 www.utm.my

**UTM**  
UNIVERSITI TEKNOLOGI MALAYSIA

### d) Complete Graph

A simple graph with  $n$  vertices in which there is an edge between every pair of distinct vertices is called a complete graph on  $n$  vertices. This is denoted by  $K_n$ .

**Example**



$K_2$        $K_3$        $K_4$

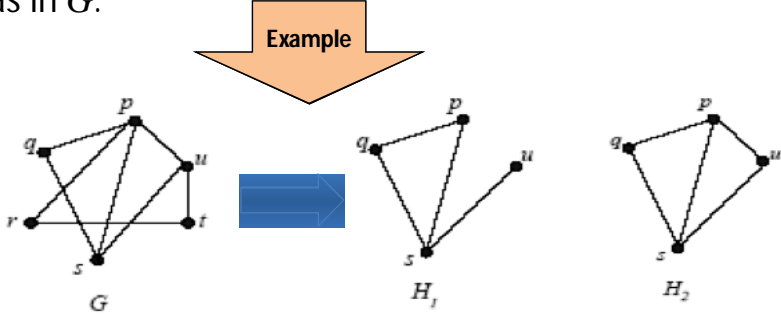
innovative • entrepreneurial • global      20      www.utm.my

**UTM**  
UNIVERSITI TEKNOLOGI MALAYSIA

### e) Subgraph


A graph  $H$  is said to be a subgraph of a graph  $G$  if, every vertex in  $H$  is also a vertex in  $G$ , every edge in  $H$  is also an edge in  $G$ , and every edge in  $H$  has the same endpoints as it has in  $G$ .

**Example**



$G$        $H_1$        $H_2$


innovative • entrepreneurial • global      21      www.utm.my



UTM  
UNIVERSITI TEKNOLOGI MALAYSIA

# Graph Representation

innovative • entrepreneurial • global 22 www.utm.my



UTM  
UNIVERSITI TEKNOLOGI MALAYSIA

- To write programs that process and manipulate graphs, the graphs must be stored, that is, represented in computer memory.
- A graph can be represented (in computer memory) in several ways.
- 2-dimensional array: adjacency matrix and incidence matrix.

innovative • entrepreneurial • global 23 www.utm.my

**UTM**  
UNIVERSITI TEKNOLOGI MALAYSIA

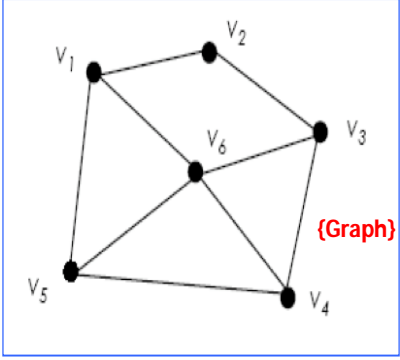
## Adjacency Matrix

- Let  $G$  be a graph with  $n$  vertices.
- The adjacency matrix,  $A_G$  is an  $n \times n$  matrix  $[a_{ij}]$  such that,
  - $a_{ij}$  = the number of edges from  $v_i$  to  $v_j$ , {undirected  $G$ }
  - or,
  - $a_{ij}$  = the number of arrows from  $v_i$  to  $v_j$ , {directed  $G$ }
- for all  $i, j = 1, 2, \dots, n$ .

innovative • entrepreneurial • global 24 www.utm.my

**UTM**  
UNIVERSITI TEKNOLOGI MALAYSIA

## Example 1



{Graph}

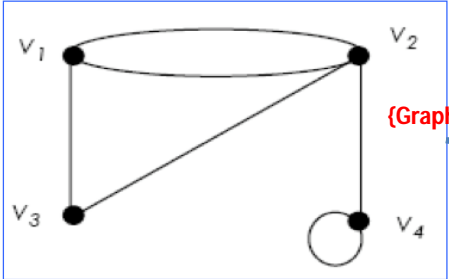
[Matrix]

$$A_G = \begin{matrix} & \begin{matrix} v_1 & v_2 & v_3 & v_4 & v_5 & v_6 \end{matrix} \\ \begin{matrix} v_1 \\ v_2 \\ v_3 \\ v_4 \\ v_5 \\ v_6 \end{matrix} & \begin{bmatrix} 0 & 1 & 0 & 0 & 1 & 1 \\ 1 & 0 & 1 & 0 & 0 & 0 \\ 0 & 1 & 0 & 1 & 0 & 1 \\ 0 & 0 & 1 & 0 & 1 & 1 \\ 1 & 0 & 0 & 1 & 0 & 1 \\ 1 & 0 & 1 & 1 & 1 & 0 \end{bmatrix} \end{matrix}$$

innovative • entrepreneurial • global 25 www.utm.my

**UTM**  
UNIVERSITI TEKNOLOGI MALAYSIA

## Example 2



{Graph}

[Matrix]

$$A_G = \begin{matrix} & \begin{matrix} v_1 & v_2 & v_3 & v_4 \end{matrix} \\ \begin{matrix} v_1 \\ v_2 \\ v_3 \\ v_4 \end{matrix} & \begin{bmatrix} 0 & 2 & 1 & 0 \\ 2 & 0 & 1 & 1 \\ 1 & 1 & 0 & 0 \\ 0 & 1 & 0 & 1 \end{bmatrix} \end{matrix}$$

innovative • entrepreneurial • global 26 www.utm.my

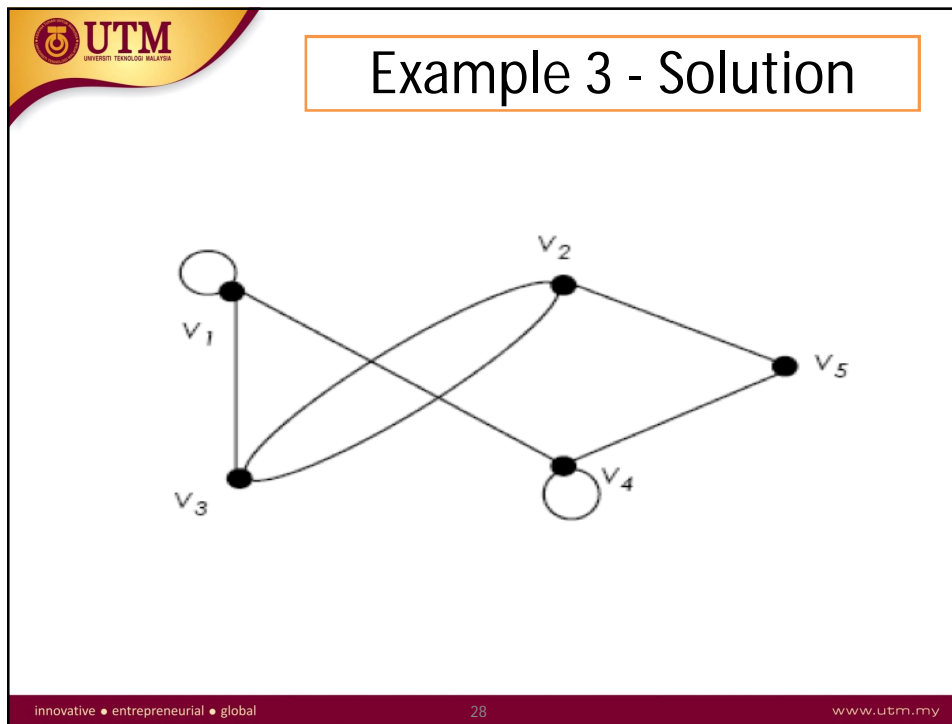
**UTM**  
UNIVERSITI TEKNOLOGI MALAYSIA

## Example 3

Draw the graph based on the following matrix:

$$A_G = \begin{bmatrix} 1 & 0 & 1 & 1 & 0 \\ 0 & 0 & 2 & 0 & 1 \\ 1 & 2 & 0 & 0 & 0 \\ 1 & 0 & 0 & 1 & 1 \\ 0 & 1 & 0 & 1 & 0 \end{bmatrix}$$

innovative • entrepreneurial • global 27 www.utm.my



**UTM**  
UNIVERSITI TEKNOLOGI MALAYSIA

- Adjacency matrix is a **symmetric matrix** if it is representing an undirected graph, where
 
$$a_{ij} = a_{ji}$$
- If the graph is directed graph, the presented matrix is not symmetrical.

innovative • entrepreneurial • global 29 www.utm.my

**UTM**  
UNIVERSITI TEKNOLOGI MALAYSIA

## Incidence Matrix

- Let  $G$  be a graph with  $n$  vertices and  $m$  edges.
- The incidence matrix,  $I_G$  is an  $n \times m$  matrix  $[a_{ij}]$  such that,

$$a_{ij} = \begin{cases} 0 & \text{if } v_i \text{ is not an end vertex of } e_j, \\ 1 & \text{if } v_i \text{ is an end vertex of } e_j, \text{ but } e_j \text{ is not a loop} \\ 2 & \text{if } e_j \text{ is a loop at } v_i \end{cases}$$

innovative • entrepreneurial • global 30 www.utm.my

**UTM**  
UNIVERSITI TEKNOLOGI MALAYSIA

## Example

(Graph)


[Matrix]

	$e_1$	$e_2$	$e_3$	$e_4$	$e_5$
$v_1$	1	0	0	0	1
$v_2$	1	2	1	0	0
$v_3$	0	0	1	1	1
$v_4$	0	0	0	1	0

$\deg(v_1) = 2;$   
 $\deg(v_2) = 4;$   
 $\deg(v_3) = 3;$   
 $\deg(v_4) = 1$

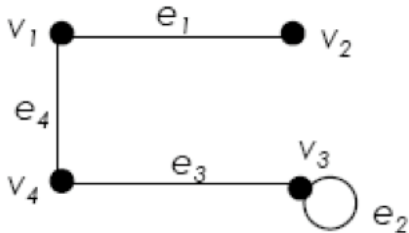
Notice that the sum of the  $i$ -th row is the degree of  $v_i$ .

innovative • entrepreneurial • global 31 www.utm.my




## Exercise

- Find the adjacency matrix and the incidence matrix of the graph.



innovative • entrepreneurial • global
32
www.utm.my



## Exercise


### Past Year 2015/2016

A cat show is being judged from pictures of the cats. The judges would like to see pictures of the following pairs of cats next to each other for their final decision: Fifi and Putih, Fifi and Suri, Fifi and Bob, Bob and Cheta, Bob and Didi, Bob and Suri, Cheta and Didi, Didi and Suri, Didi and Putih, Suri and Putih, Putih and Jeep, Jeep and Didi.

Draw a graph modeling this situation. (3 marks)

innovative • entrepreneurial • global
34
www.utm.my






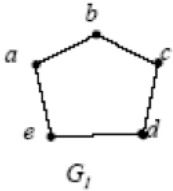
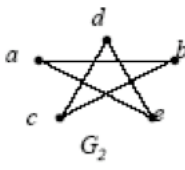
# Isomorphisms

innovative • entrepreneurial • global

38

www.utm.my



- Are these two graphs ( $G_1$  and  $G_2$ ) are same?
- When we say that 2 graphs are the same mean they are **isomorphic** to each other.

innovative • entrepreneurial • global


39

www.utm.my

## Definition

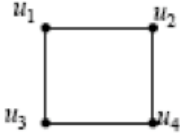
Let  $G = \{V, E\}$  and  $G' = \{V', E'\}$  be graphs.  $G$  and  $G'$  are said to be isomorphic if there exist a pair of functions  $f : V \rightarrow V'$  and  $g : E \rightarrow E'$  such that  $f$  associates each element in  $V$  with exactly one element in  $V'$  and vice versa;  $g$  associates each element in  $E$  with exactly one element in  $E'$  and vice versa, and for each  $v \in V$ , and each  $e \in E$ , if  $v$  is an endpoint of the edge  $e$ , then  $f(v)$  is an endpoint of the edge  $g(e)$ .

- ◆ If two graphs is isomorphic, they must have:
  - the same number of vertices and edges,
  - the same degrees for corresponding vertices,
  - the same number of connected components,
  - the same number of loops and parallel edges,
  - both graphs are connected or both graph are not connected,
  - pairs of connected vertices must have the corresponding pair of vertices connected.
- ◆ In general, it is easier to prove two graphs are not isomorphic by proving that one of the above properties fails.

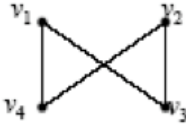


## Example 1

● Determine whether  $G$  is isomorphic to  $H$ .




$G$

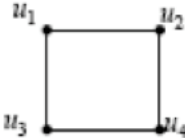


$H$

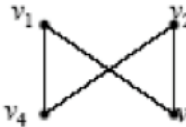
innovative • entrepreneurial • global
42
www.utm.my



## Example 1 - Solution




$G$

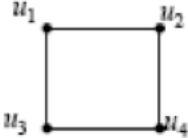


$H$

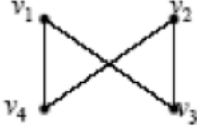
- Both graphs are simple and have the same number of vertices and the same number of edges.
- All the vertices of both graphs have degree 2.
- Define  $f: U \rightarrow V$ , where  $U = \{u_1, u_2, u_3, u_4\}$  and  $V = \{v_1, v_2, v_3, v_4\}$ ;  
 $f(u_1) = v_1$ ;  $f(u_2) = v_4$ ;  $f(u_3) = v_3$ ;  $f(u_4) = v_2$ .

innovative • entrepreneurial • global
43
www.utm.my






$G$



$H$

- To verify whether  $G$  and  $H$  are isomorphic, we examine the adjacency matrix  $A_G$  with rows and columns labeled in the order  $u_1, u_2, u_3, u_4$ , and the adjacency matrix  $A_H$  with rows and columns labeled in the order  $v_1, v_2, v_3, v_4$ .

innovative • entrepreneurial • global
44
www.utm.my



- $A_G$  and  $A_H$  are the same,  $G$  and  $H$  are isomorphic.

$$A_G = \begin{matrix} & \begin{matrix} u_1 & u_2 & u_3 & u_4 \end{matrix} \\ \begin{matrix} u_1 \\ u_2 \\ u_3 \\ u_4 \end{matrix} & \begin{pmatrix} 0 & 1 & 1 & 0 \\ 1 & 0 & 0 & 1 \\ 1 & 0 & 0 & 1 \\ 0 & 1 & 1 & 0 \end{pmatrix} \end{matrix}$$

$$A_H = \begin{matrix} & \begin{matrix} v_1 & v_4 & v_3 & v_2 \end{matrix} \\ \begin{matrix} v_1 \\ v_4 \\ v_3 \\ v_2 \end{matrix} & \begin{pmatrix} 0 & 1 & 1 & 0 \\ 1 & 0 & 0 & 1 \\ 1 & 0 & 0 & 1 \\ 0 & 1 & 1 & 0 \end{pmatrix} \end{matrix}$$

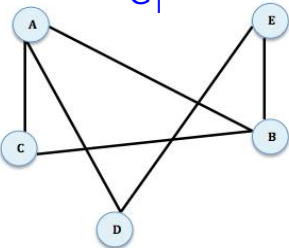
innovative • entrepreneurial • global
45
www.utm.my

**UTM**  
UNIVERSITI TEKNOLOGI MALAYSIA

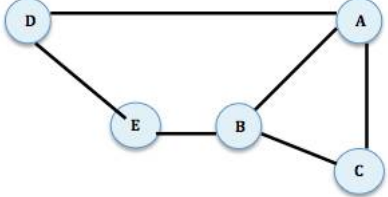
## Exercise

Q: Show that the following two graphs are isomorphic.

$G_1$



$G_2$



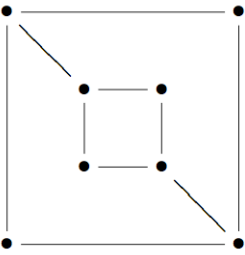
innovative • entrepreneurial • global
46
www.utm.my

**UTM**  
UNIVERSITI TEKNOLOGI MALAYSIA

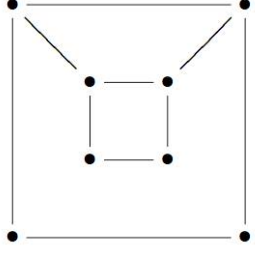
## Exercise

Q: Is these two graphs are isomorphic?


$G$  :



$H$  :

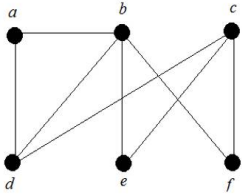


innovative • entrepreneurial • global
48
www.utm.my

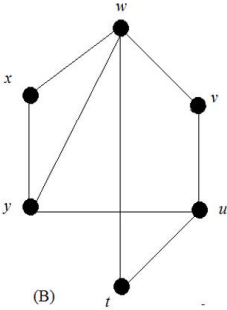
 **UTM**  
UNIVERSITI TEKNOLOGI MALAYSIA

## Exercise Past Year 2015/2016

Determine whether the graphs in Figure 2 (*A* and *B*) are isomorphic. If the graphs are isomorphic, find their adjacency matrices; otherwise, give an invariant that the graphs do not share. (6 marks)



(A)



(B)

50  
www.utm.my


innovative • entrepreneurial • global

 **UTM**  
UNIVERSITI TEKNOLOGI MALAYSIA

# Trails, Paths & Circuits

52  
www.utm.my


innovative • entrepreneurial • global



## Term and Description

- A **walk** from  $v$  to  $w$  is a finite alternating sequence of adjacent vertices and edges of  $G$ . Thus a walk has the form
 
$$(v_0, e_1, v_1, e_2, v_2, \dots, v_{n-1}, e_n, v_n)$$
 where the  $v$ 's represent vertices, the  $e$ 's represent edges,  $v = v_0$ ,  $w = v_n$ , and for  $i = 1, 2, \dots, n$ ,  $v_{i-1}$  and  $v_i$  are the endpoints of  $e_i$ .
- A **trivial walk** from  $v$  to  $w$  consist of the single vertex  $v$ .
- The **length of a walk** is the number of edges it has.

innovative • entrepreneurial • global
53
www.utm.my



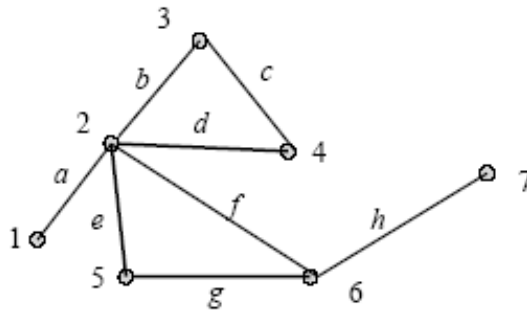
## Term and Description (cont.)

- A **trail** from  $v$  to  $w$  is a walk from  $v$  to  $w$  that does not contain a repeated edge.
- A **path** from  $v$  to  $w$  is a trail from  $v$  to  $w$  that does not contain a repeated vertex.
- A **closed walk** is a walk that start and ends at the same vertex.
- A **circuit/cycle** is a closed walk that contains at least one edge and does not contain a repeated edge.
- A **simple circuit** is a circuit that does not have any other repeated vertex except the first and the last.

innovative • entrepreneurial • global
54
www.utm.my

## Example 1 – Trail & Path

- $(1, a, 2, b, 3, c, 4, d, 2, e, 5)$  is a trail.
- $(6, g, 5, e, 2, d, 4)$  is a path.



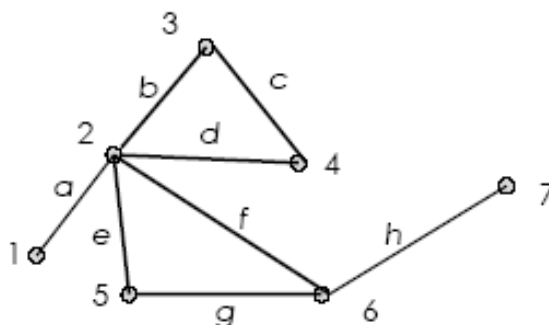
**Note:**

Trail: No repeated edge (can repeat vertex).

Path: No repeated vertex and edge.

## Example 2 – Cycle/circuit

- $(2, f, 6, g, 5, e, 2, d, 4, c, 3, b, 2)$  is a cycle.



**Note:** cycle → start and end at same vertex, no repeated edge.



**UTM**  
UNIVERSITI TEKNOLOGI MALAYSIA

## Example 3 – Simple Cycle

- $(5, g, 6, f, 2, e, 5)$  is a simple cycle.

**Note:** Simple cycle  $\rightarrow$  start and end at same vertex, no repeated edge or vertex except for the start and end vertex.

innovative • entrepreneurial • global 57 www.utm.my


**UTM**  
UNIVERSITI TEKNOLOGI MALAYSIA

## Exercise

Tell whether the following is either a walk, trail, path, cycle, simple cycle, closed walk or none of these.

- $(v_1, e_1, v_2)$
- $(v_2, e_2, v_3, e_3, v_4, e_4, v_3)$
- $(v_4, e_7, v_5, e_6, v_1, e_1, v_2, e_2, v_3, e_3, v_4)$
- $(v_4, e_4, v_3, e_3, v_4, e_5, v_2, e_1, v_1, e_6, v_5, e_7, v_4)$

innovative • entrepreneurial • global 58 www.utm.my



# Euler Path & Circuit

innovative • entrepreneurial • global 60 www.utm.my



The town of Königsberg in Prussia (now Kaliningrad in Russia) was built at a point where two branches of the Pregel River came together. It consisted of an island and some land along the river banks. These were connected by seven bridges as shown in figure below:

Königsberg Bridge Problem

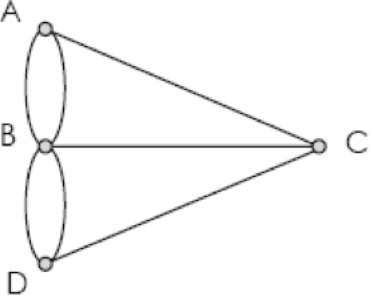


innovative • entrepreneurial • global 61 www.utm.my

**UTM**  
UNIVERSITI TEKNOLOGI MALAYSIA

**Problem:** Starting at one land area, is it possible to walk across all of the bridges exactly once and return to the starting land area?

- Graph of the Königsberg Bridge Problem

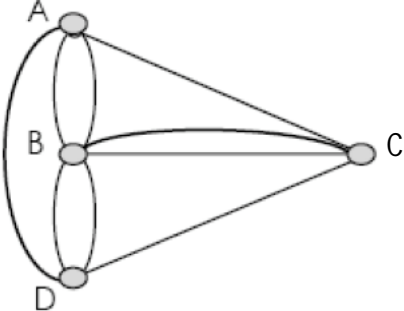


no Euler cycle

innovative • entrepreneurial • global 62 www.utm.my

**UTM**  
UNIVERSITI TEKNOLOGI MALAYSIA

**Solution:** It is not possible to walk across all of the bridges exactly once and return to the starting land area. Therefore, two additional bridges have been constructed on the Pregel river.

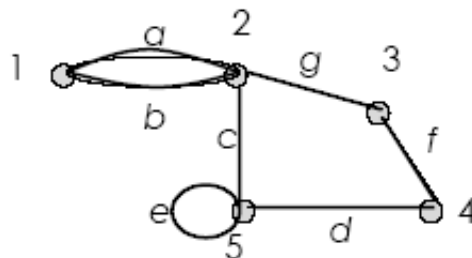


innovative • entrepreneurial • global 63 www.utm.my

## Euler Circuit

Let  $G$  be a graph. An **Euler circuit** for  $G$  is a circuit that contains every vertex and every edges of  $G$ . That is, an Euler circuit for  $G$  is a sequence of adjacent vertices and edges in  $G$  that has at least one edges, **starts and ends at the same vertex**, **uses every vertex of  $G$  at least once**, and **uses every edge of  $G$  exactly once**.

## Example 1

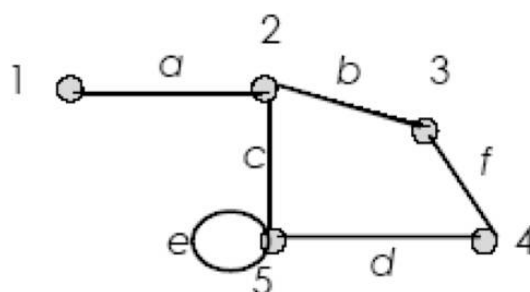


$(1, a, 2, c, 5, e, 5, d, 4, f, 3, g, 2, b, 1)$   
 is an Euler cycle


## Euler Trail

Let  $G$  be a graph, and let  $v$  and  $w$  be two distinct vertices of  $G$ . An **Euler trail** from  $v$  to  $w$  is a sequence of adjacent vertices and edges that **starts at  $v$**  and **ends at  $w$** , **passes through every vertex of  $G$  at least once**, and **traverses every edge of  $G$  exactly once**.

## Example 2




$(1, a, 2, c, 5, e, 5, d, 4, f, 3, b, 2)$   
 is an Euler trail



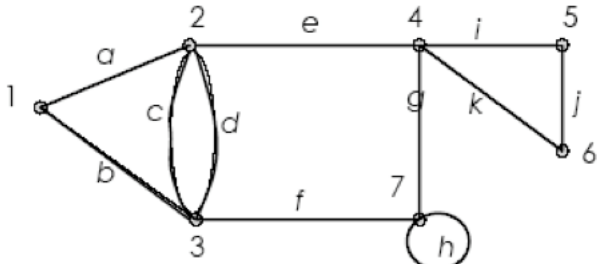
## Theorem - Euler

- If  $G$  is a connected graph and every vertex has even degree, then  $G$  has an Euler circuit.
- A graph has an Euler trail from  $v$  to  $w$  ( $v \neq w$ ) if and only if it is connected and  $v$  and  $w$  are the only vertices having odd degree.

innovative • entrepreneurial • global
68
www.utm.my




## Example 3



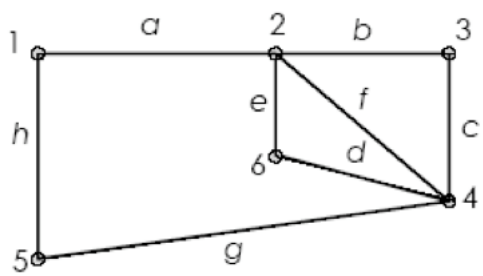
This graph has an Euler cycle

Vertex	1	2	3	4	5	6	7
Degree	2	4	4	4	2	2	4

innovative • entrepreneurial • global
69
www.utm.my



## Example 4




This graph has an Euler cycle

Vertex	1	2	3	4	5	6
Degree	2	4	2	4	2	2

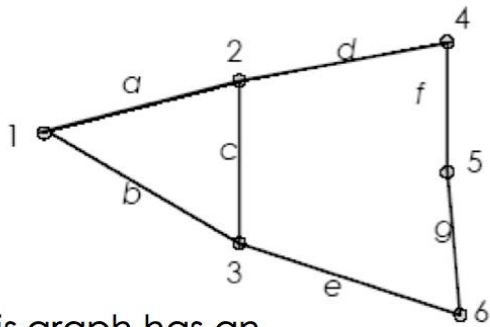
innovative • entrepreneurial • global

70

www.utm.my



## Example 5



This graph has an Euler trail.

Vertex	1	2	3	4	5	6
Degree	2	3	3	2	2	2

innovative • entrepreneurial • global

71

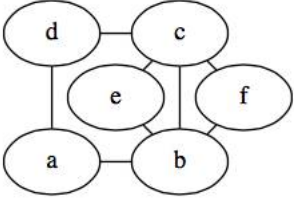
www.utm.my

**UTM**  
UNIVERSITI TEKNOLOGI MALAYSIA

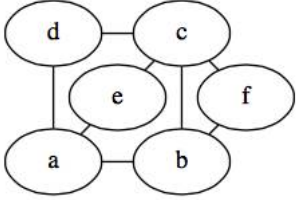
## Exercise

Q: Which of the following graphs has Euler circuit?  
Justify your answer.

**G<sub>1</sub>**



**G<sub>2</sub>**



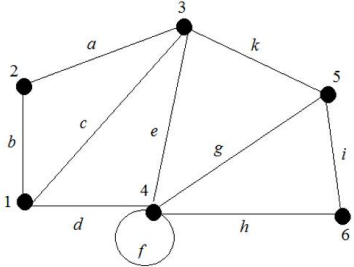
innovative • entrepreneurial • global
72
www.utm.my

**UTM**  
UNIVERSITI TEKNOLOGI MALAYSIA

## Exercise

### Past Year 2015/2016


Determine whether the graph in Figure 3 has an Euler cycle or Euler path. If the graph has an Euler cycle or Euler path, exhibit one; otherwise, give an argument that shows there is no Euler path. (4 marks)



**Figure 3**


innovative • entrepreneurial • global
73
www.utm.my





**Hamilton Circuits**


innovative • entrepreneurial • global 76 www.utm.my



**Hamiltonian Circuits**

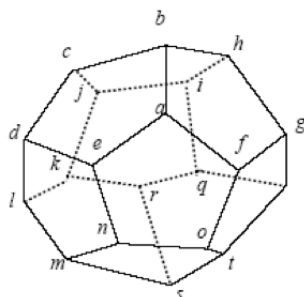
Given a graph  $G$ , a **Hamiltonian circuit** for  $G$  is a simple circuit that includes every vertex of  $G$  (but doesn't need to include all edges). That is, a Hamiltonian circuit for  $G$  is a sequence of adjacent vertices and distinct edges in which **every vertex of  $G$  appears exactly once, except for the first and the last, which are the same.**

innovative • entrepreneurial • global 77 www.utm.my



## Example


- Sir William Rowan Hamilton marketed a puzzle in the mid-1800s in the form of dodecahedron.
- Each corner bore the name of a city.
- The problem was to start at any city, travel along the edges, visit each city exactly one time and return to the initial city.

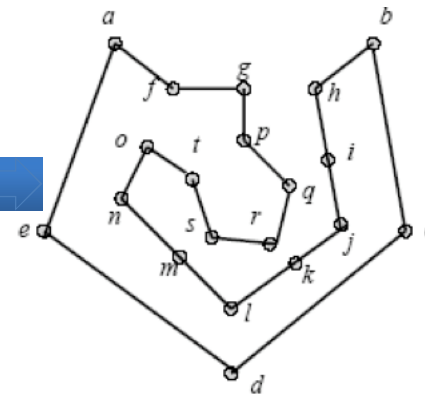
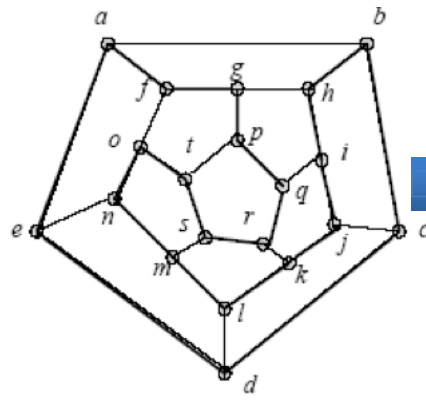


innovative • entrepreneurial • global

78

www.utm.my






(a): The graph

(b): Hamilton circuit

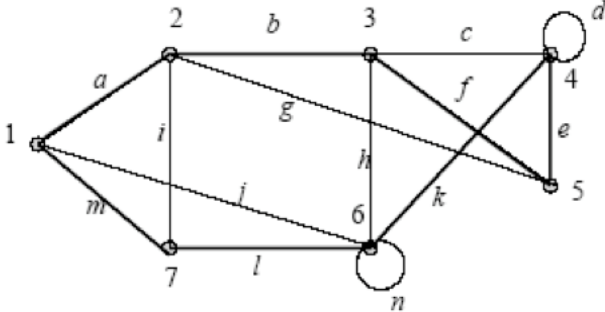
innovative • entrepreneurial • global

79

www.utm.my

 **UTM**  
UNIVERSITI TEKNOLOGI MALAYSIA

## Example




This graph has a Hamilton circuit.

(1, a, 2, b, 3, f, 5, e, 4, k, 6, l, 7, m, 1)

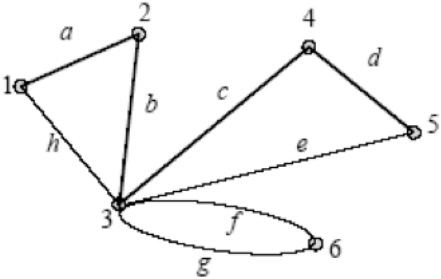
- Visit each vertex just once.

innovative • entrepreneurial • global 80 www.utm.my

 **UTM**  
UNIVERSITI TEKNOLOGI MALAYSIA

## Example

This graph does not contain Hamilton circuit.



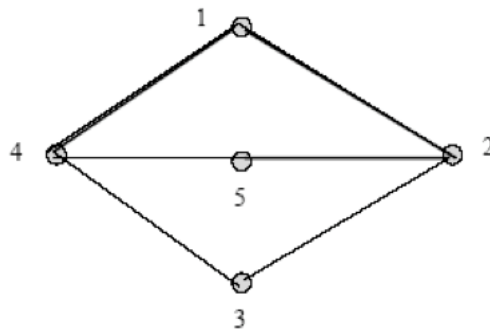
(1, a, 2, b, 3, g, 6, f, 3, e, 5, d, 4, c, 3, h, 1)

- Vertex (3) has to be visited more than once.

innovative • entrepreneurial • global 81 www.utm.my

## Example

**Question:** Is this graph has Hamiltonian cycle?

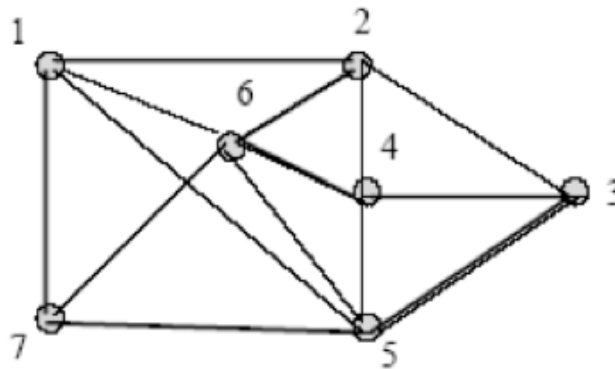


**Solution:** (1, 4, 3, 2, 5, 4, 1)

- Vertex (4) has to be visited more than once.

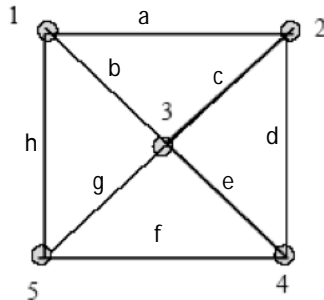
## Exercise

**Question:** Is this graph has Hamiltonian cycle?



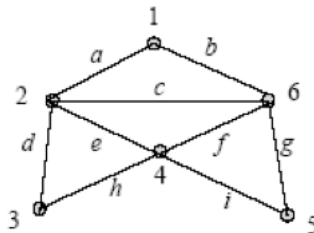
## Exercise


**Question:** Prove that this graph has Hamiltonian cycle.



## Exercise

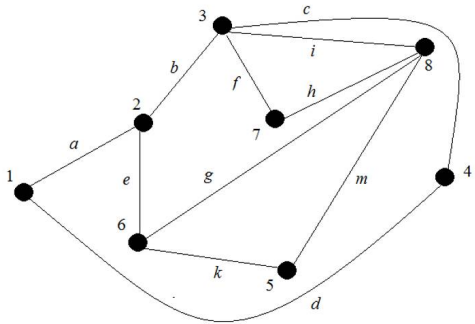
- Find a Hamiltonian cycle in this graph.



 **UTM**  
UNIVERSITI TEKNOLOGI MALAYSIA

## Exercise Past Year 2015/2016

Determine whether the graph in Figure 4 has an Hamiltonian cycle. If yes, exhibit one.  
(3 marks)




**Figure 4**

innovative • entrepreneurial • global 89  
www.utm.my

 **UTM**  
UNIVERSITI TEKNOLOGI MALAYSIA

# Shortest Path Problem


innovative • entrepreneurial • global 91  
www.utm.my



## Shortest Path

- Let  $G$  be a weighted graph.
- Let  $u$  and  $v$  be two vertices in  $G$ , and let  $P$  be a path in  $G$  from  $u$  to  $v$ .
- The length of path  $P$ , written  $L(P)$ , is the sum of the weights of all the edges on path  $P$ .
- A **shortest path** from a vertex to another vertex is a path with the shortest length between the vertices.

innovative • entrepreneurial • global 92 www.utm.my




## Dijkstra's Shortest Path Algorithm

- 1.  $S := \emptyset$
- 2.  $N := V$
- 3. For all vertices,  $u \in V, u \neq a, L(u) := \infty$
- 4.  $L(a) := 0$


[http://en.wikipedia.org/wiki/Dijkstra%27s\\_algorithm](http://en.wikipedia.org/wiki/Dijkstra%27s_algorithm)

innovative • entrepreneurial • global 93 www.utm.my

 **UTM**  
UNIVERSITI TEKNOLOGI MALAYSIA

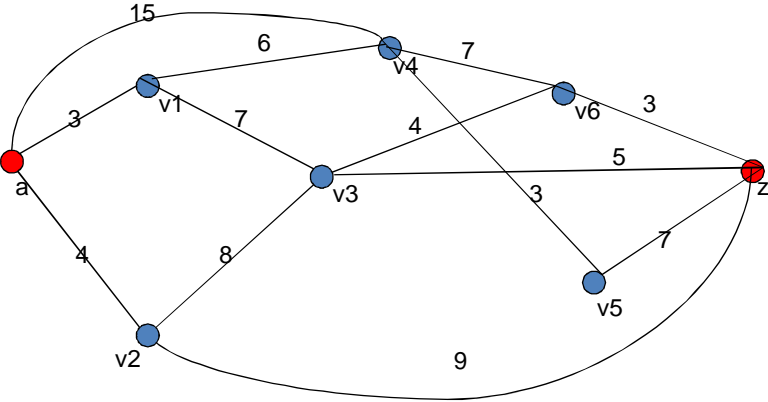
- 5. While  $z \notin S$  do,
  - 5.a : Let  $v \in N$  be such that
 
$$L(v) = \min\{L(u) \mid u \in N\}$$
  - 5.b :  $S := S \cup \{v\}$
  - 5.c :  $N := N - \{v\}$
  - 5.d : For all  $w \in N$  such that there is an edge from  $v$  to  $w$ 
    - 5.d.1: If  $L(v) + W[v, w] < L(w)$  then
 
$$L(w) = L(v) + W[v, w]$$

innovative • entrepreneurial • global 94 [www.utm.my](http://www.utm.my)

 **UTM**  
UNIVERSITI TEKNOLOGI MALAYSIA

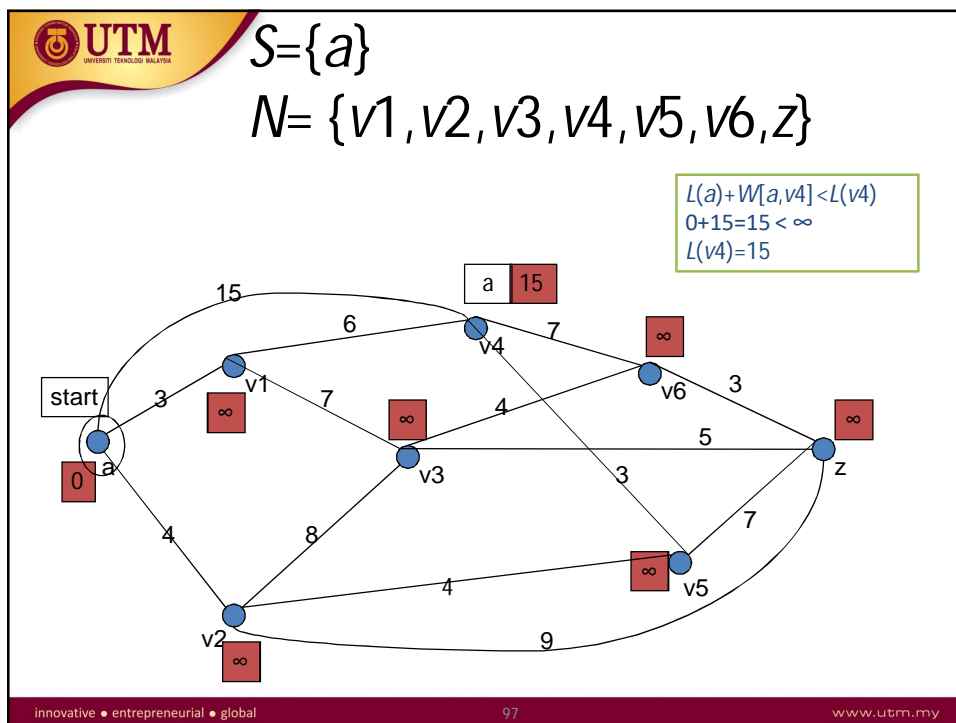
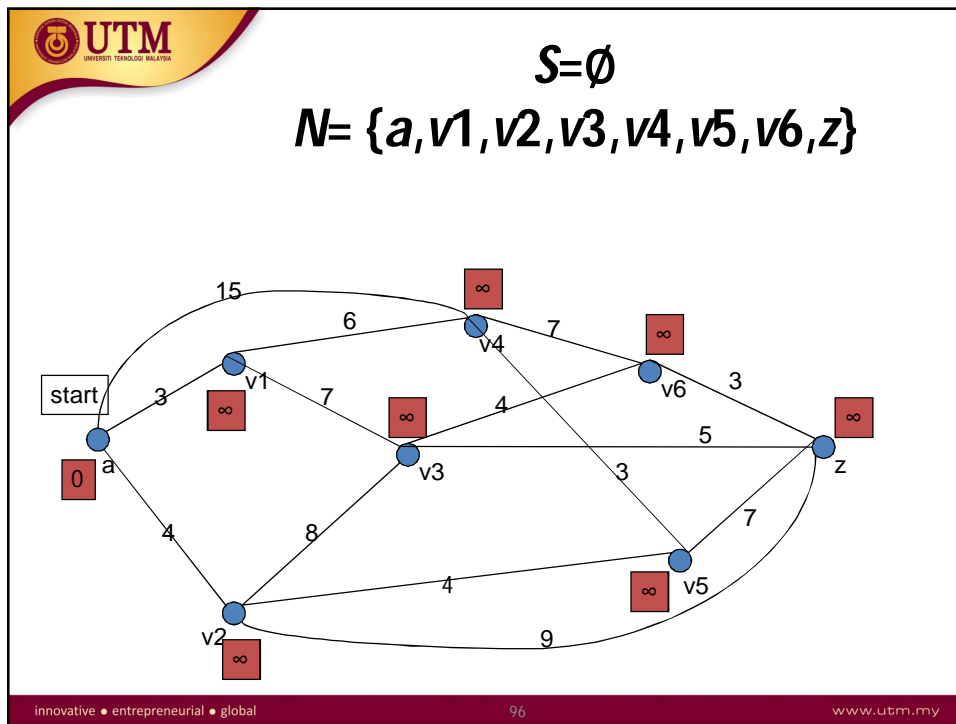
Example

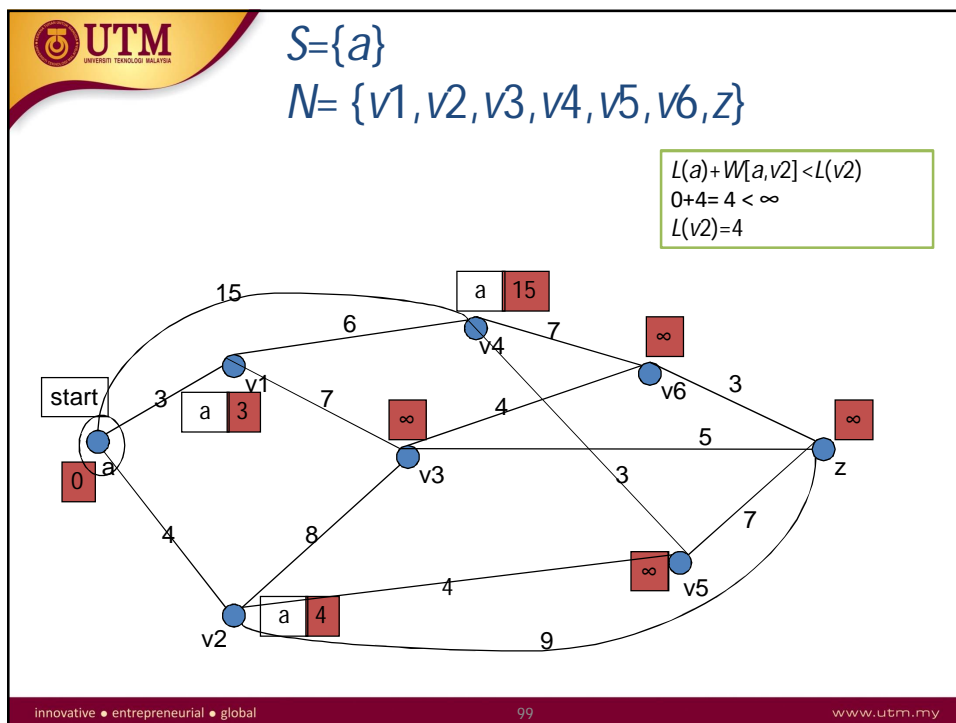
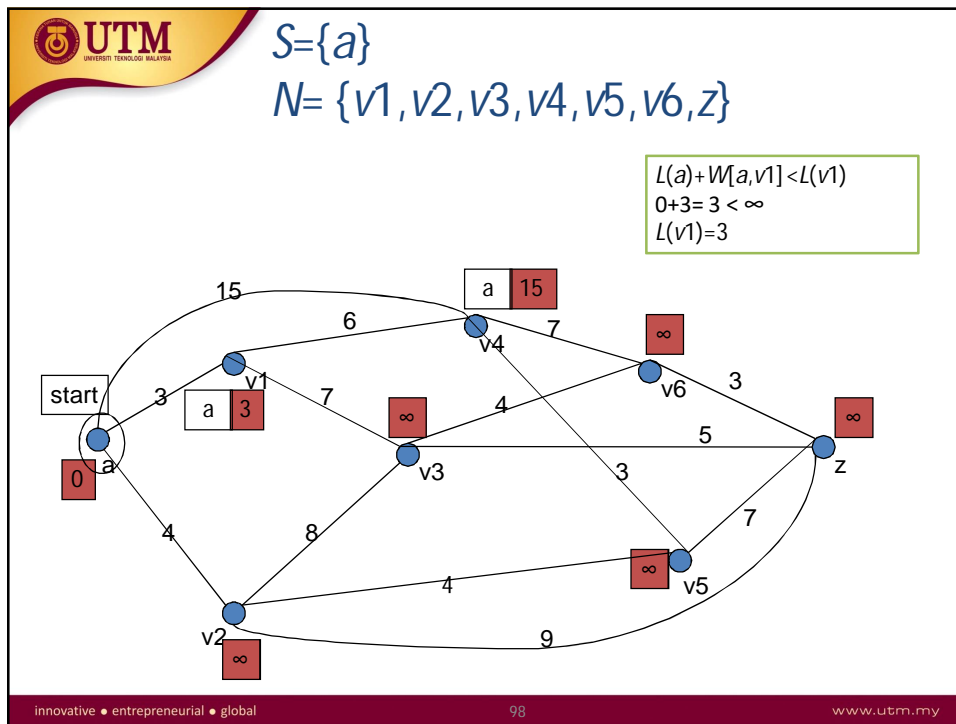
What is the shortest path from **a** to **z**?

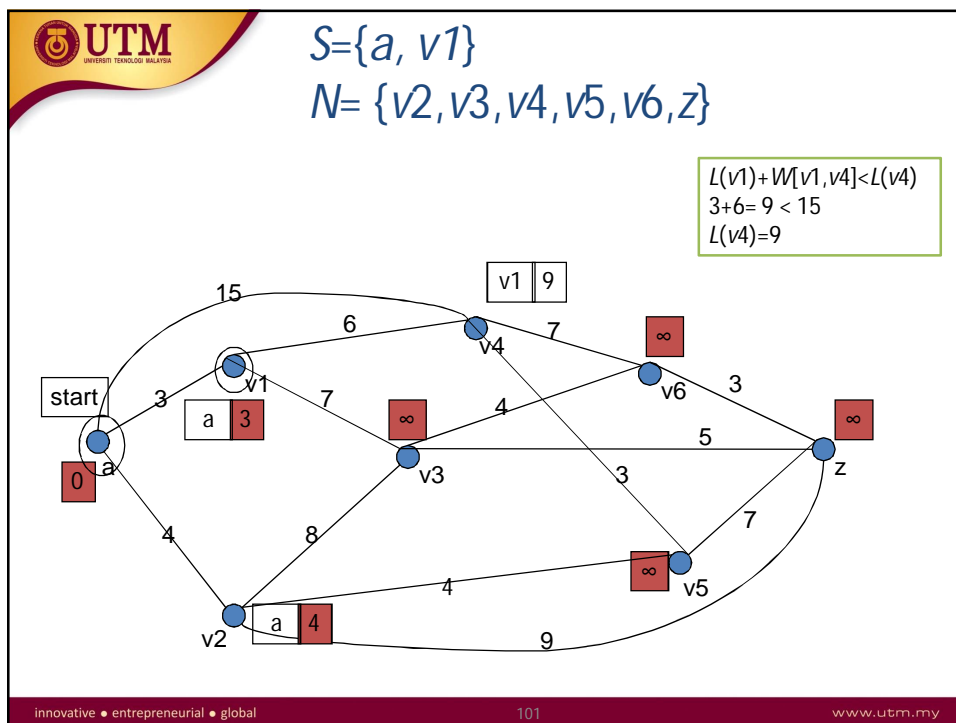
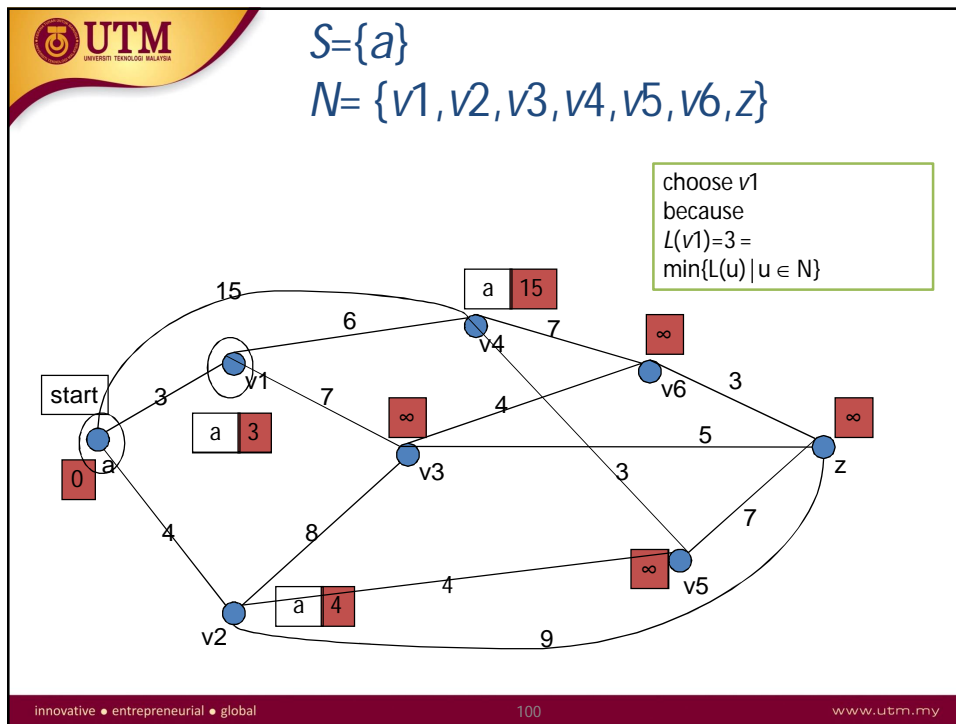


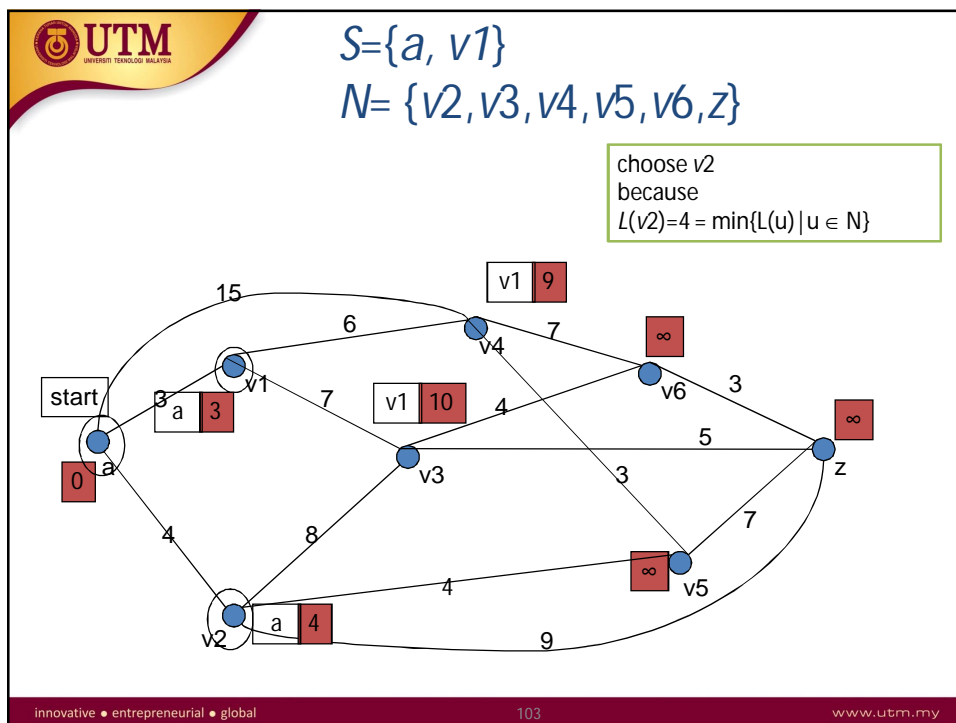
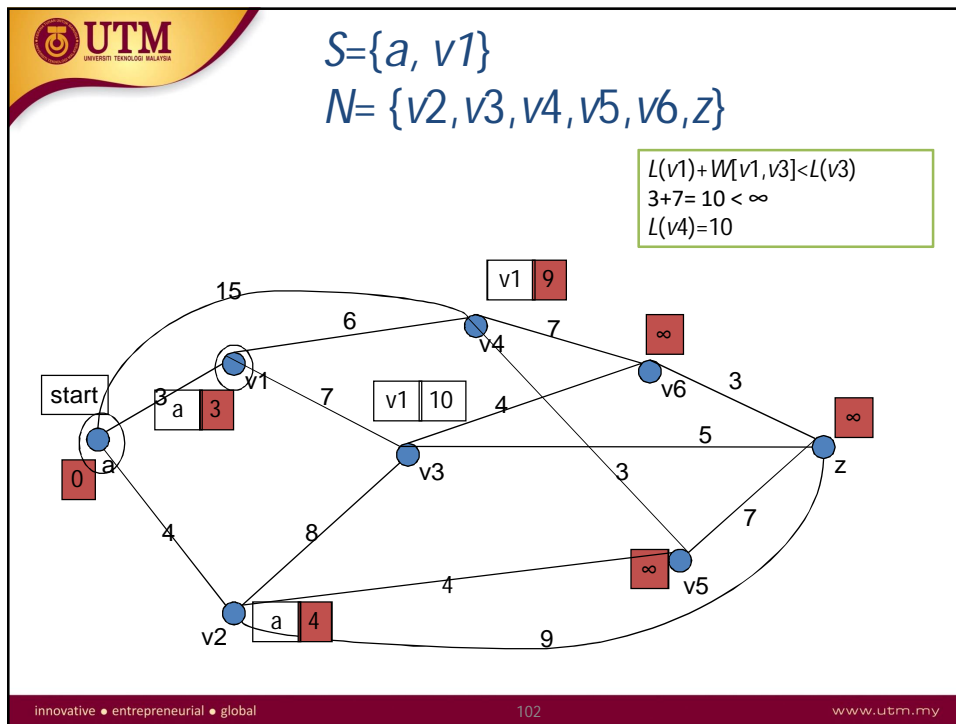
innovative • entrepreneurial • global 95 [www.utm.my](http://www.utm.my)

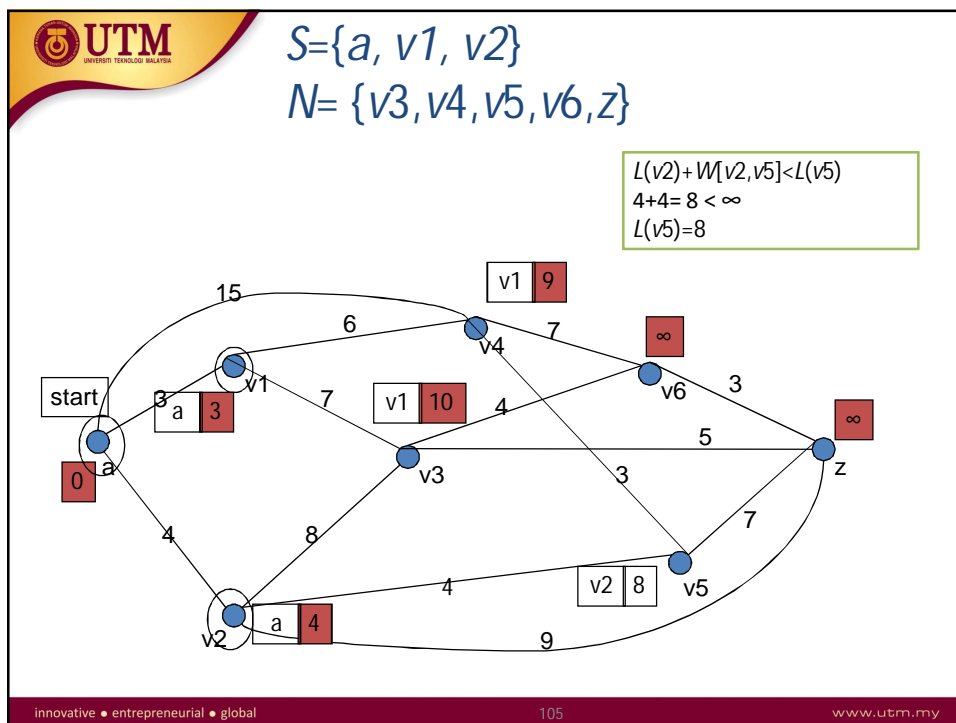
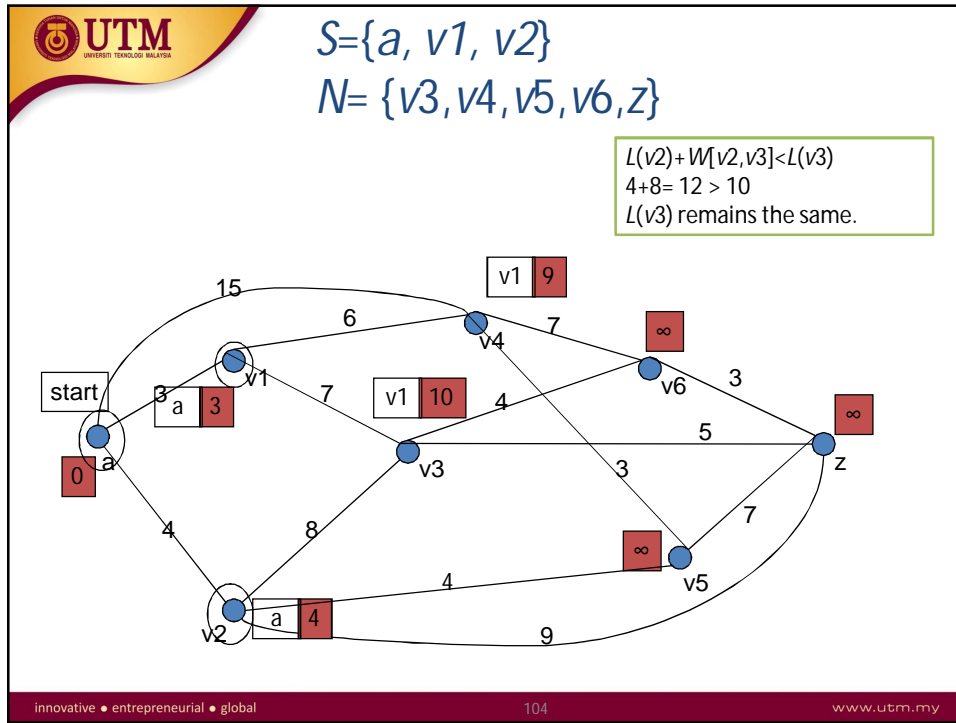


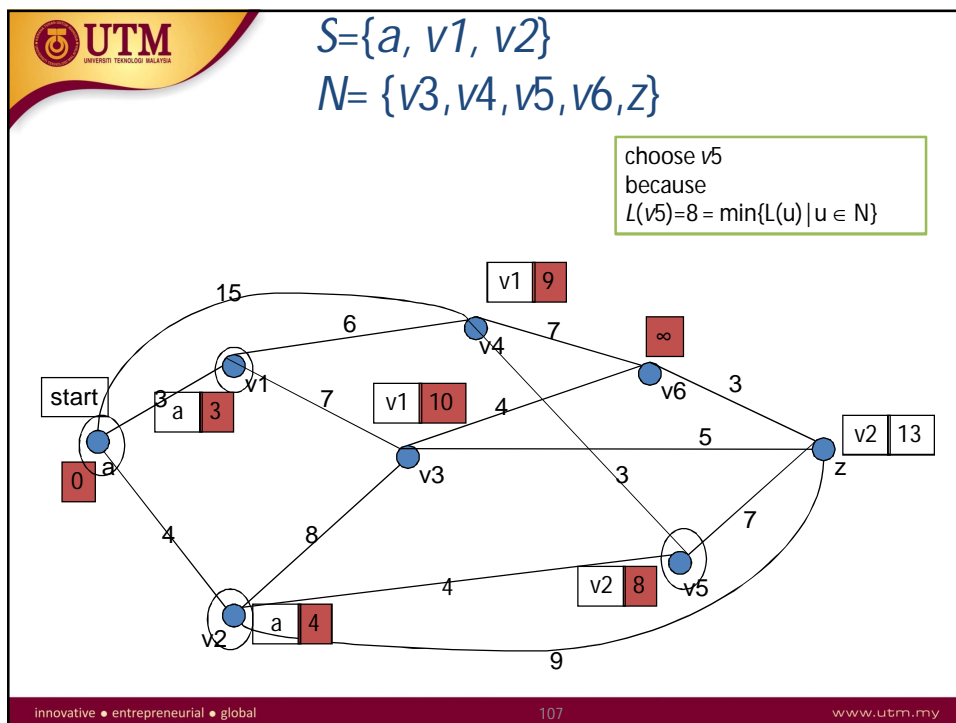
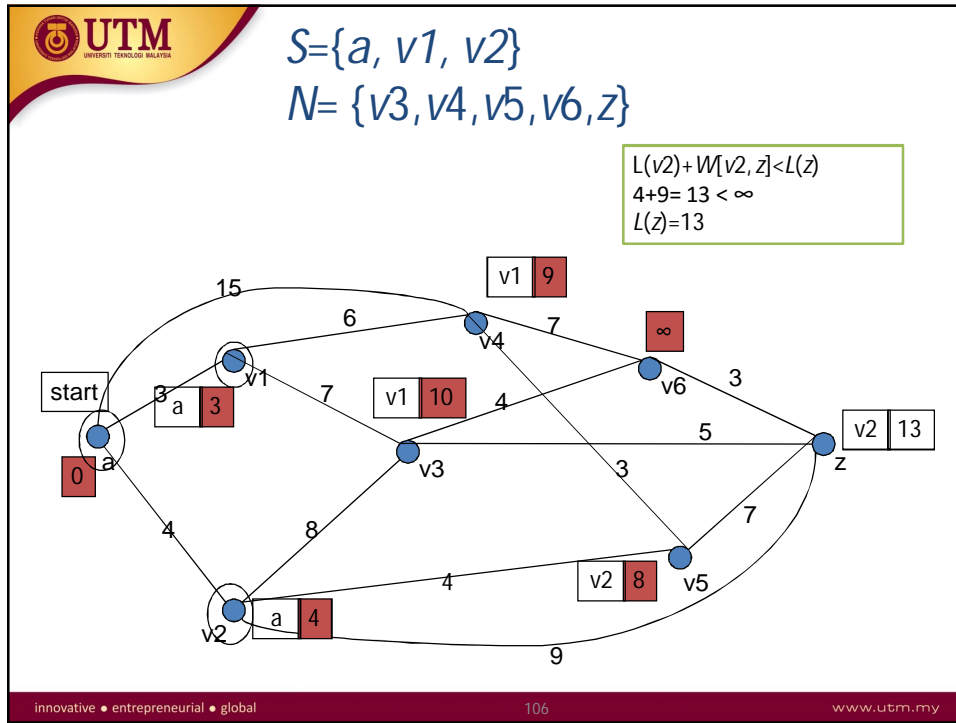


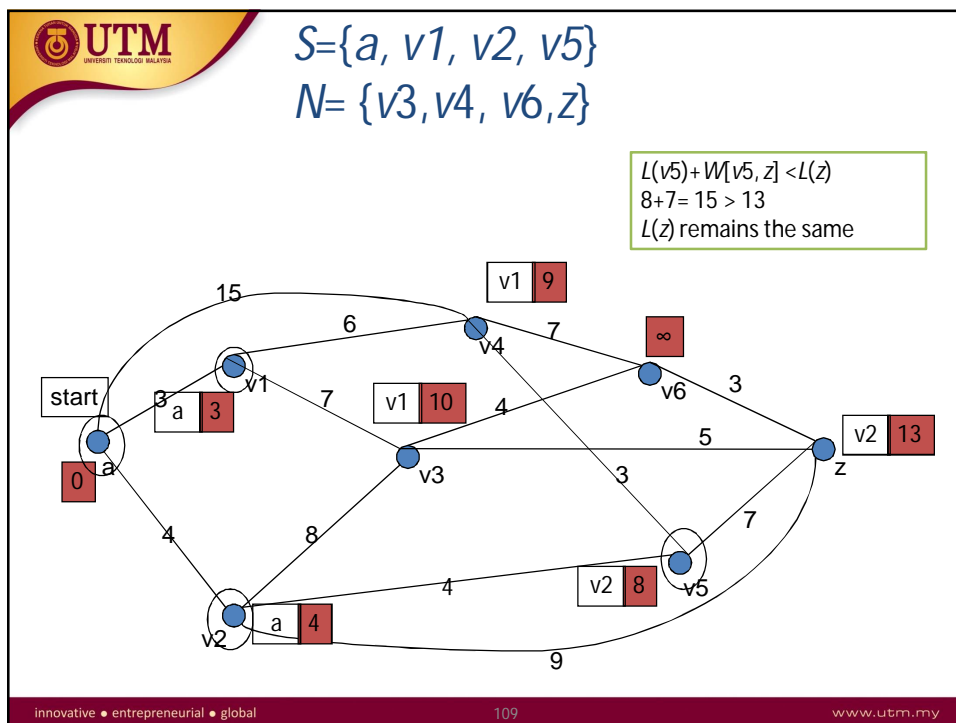
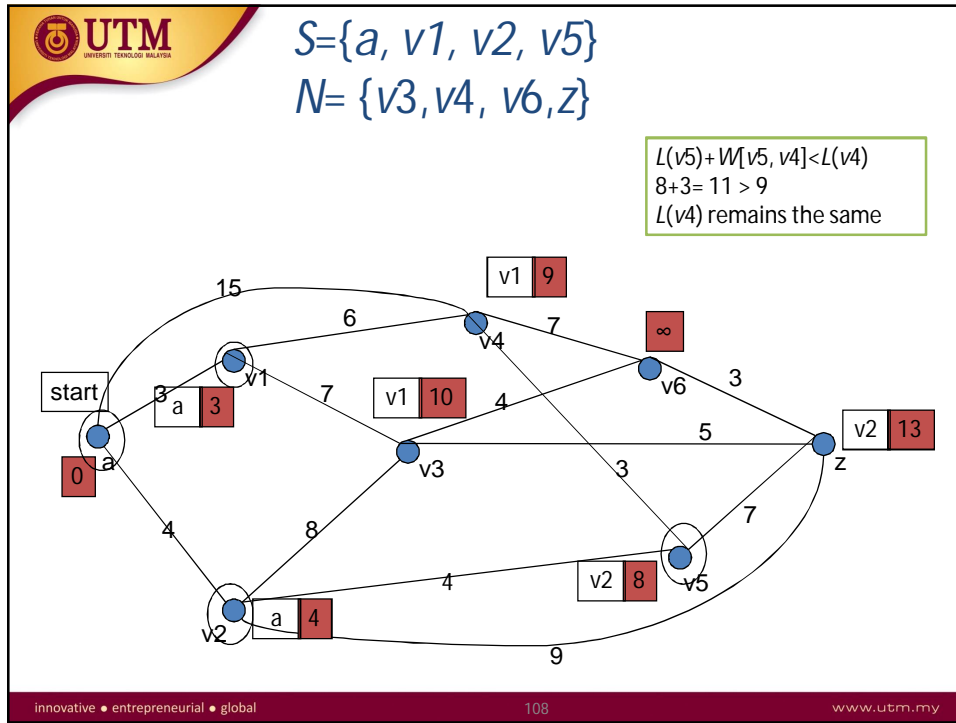


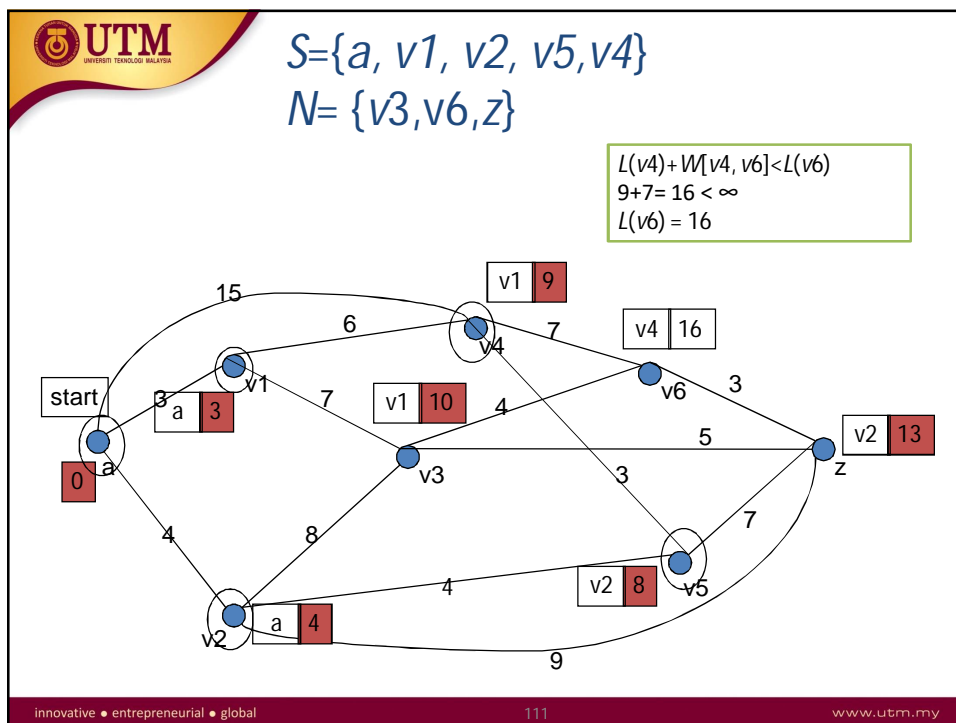
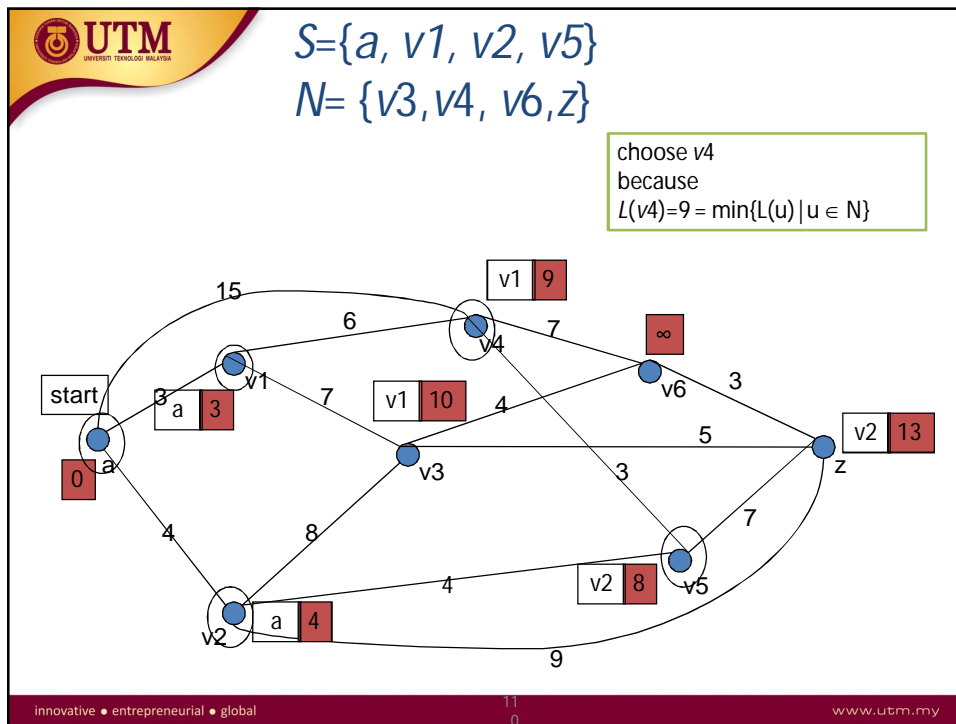




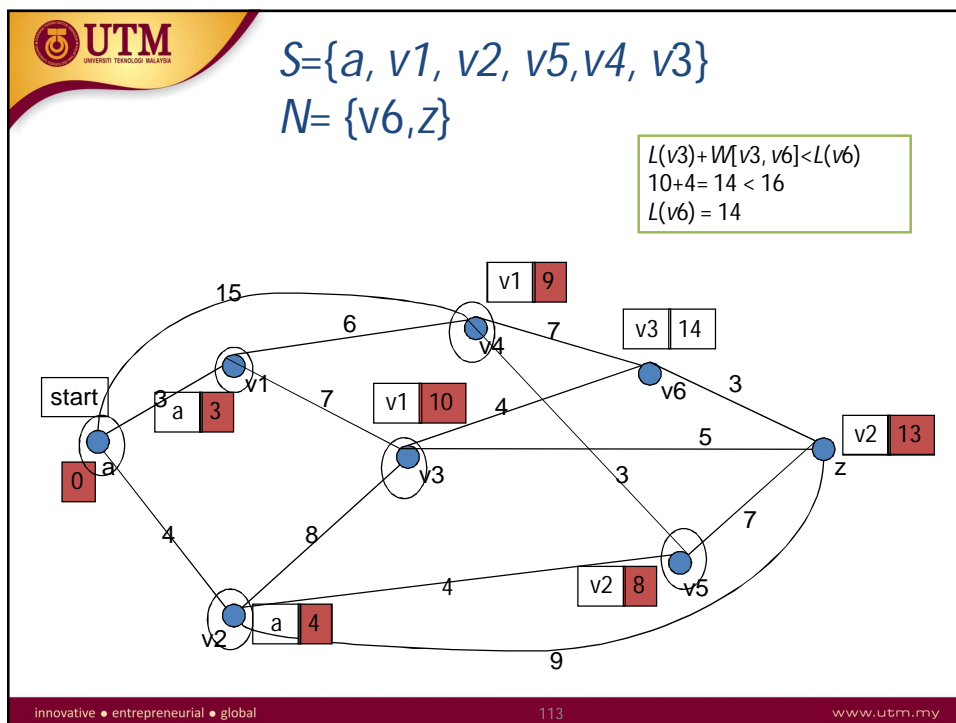
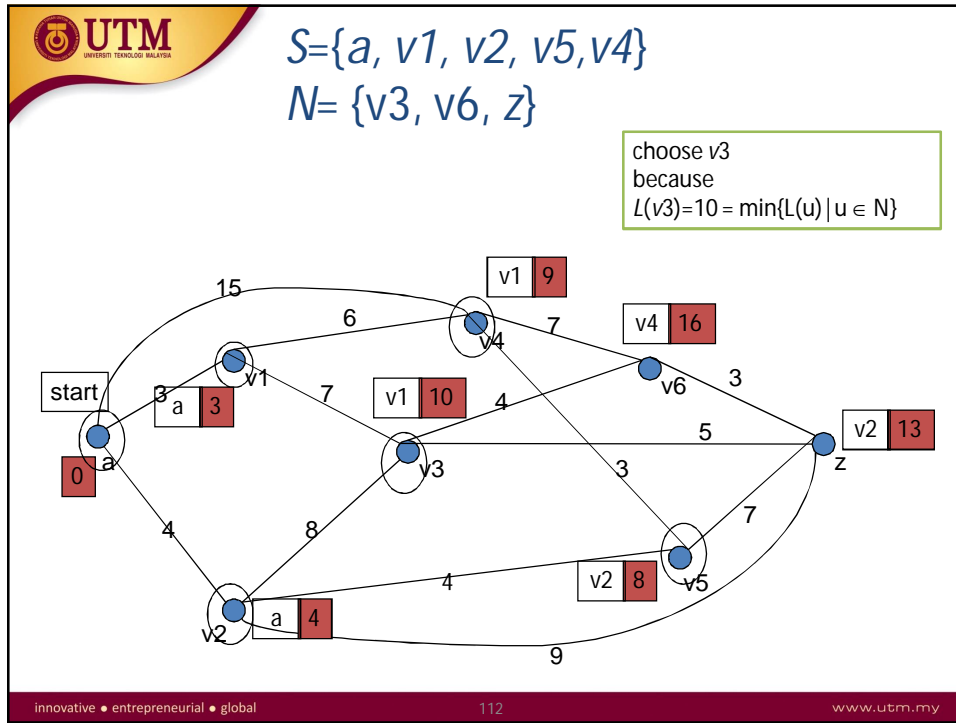


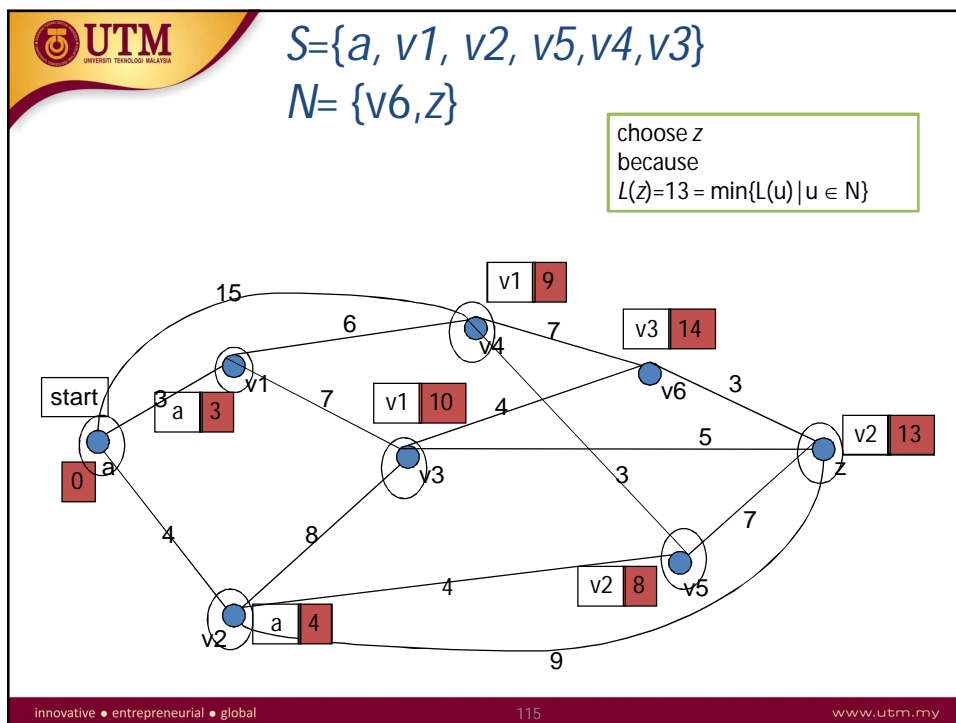
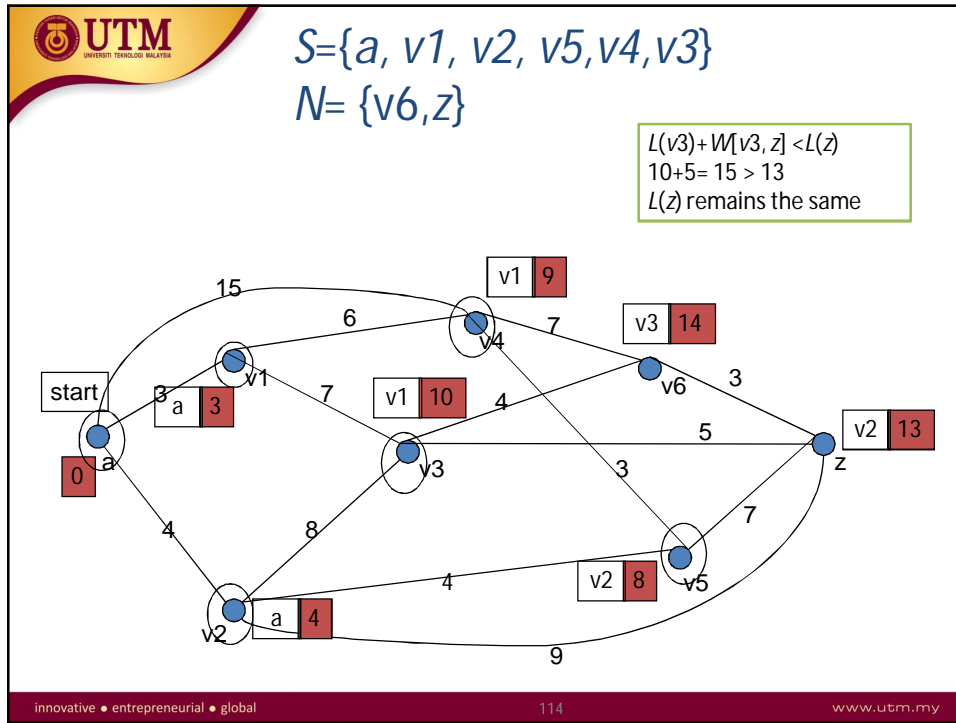


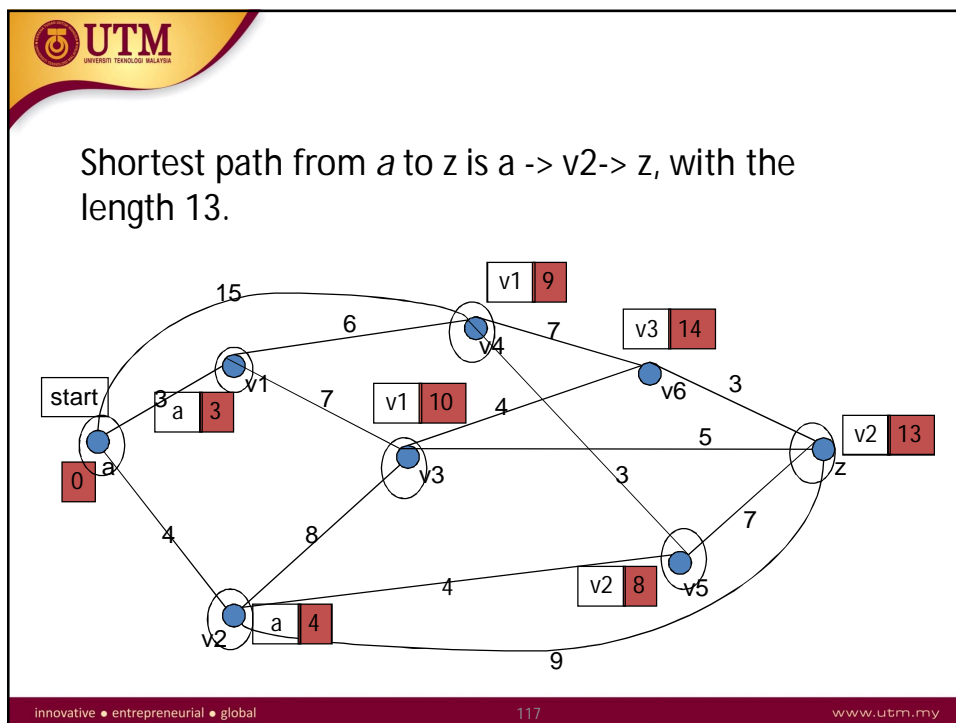
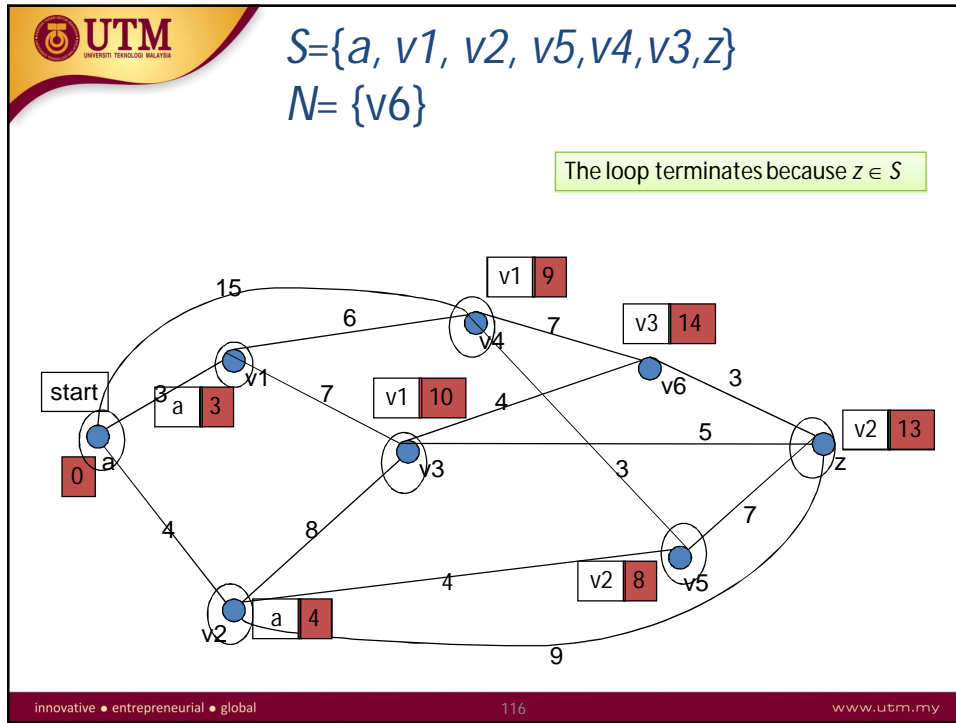








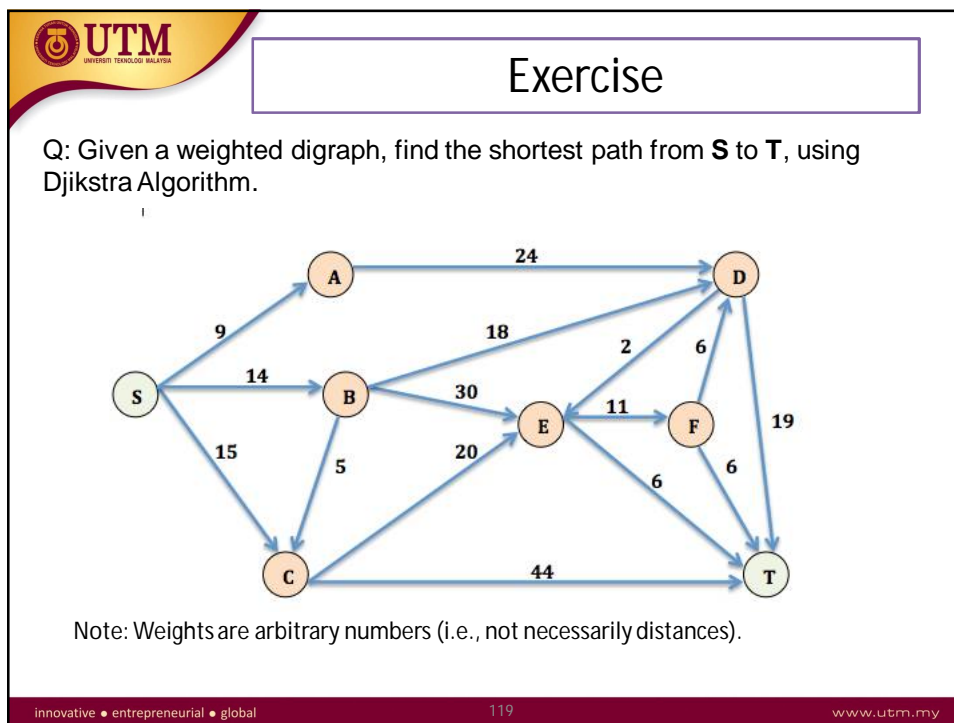





**Table – Dijkstra Algorithm**

No.	S	N	L(a)	L(V <sub>1</sub> )	L(V <sub>2</sub> )	L(V <sub>3</sub> )	L(V <sub>4</sub> )	L(V <sub>5</sub> )	L(V <sub>6</sub> )	L(z)
0	{ }	{a, V <sub>1</sub> , V <sub>2</sub> , V <sub>3</sub> , V <sub>4</sub> , V <sub>5</sub> , V <sub>6</sub> , z }	0	∞	∞	∞	∞	∞	∞	∞
1	{a}	{V <sub>1</sub> , V <sub>2</sub> , V <sub>3</sub> , V <sub>4</sub> , V <sub>5</sub> , V <sub>6</sub> , z }		3	4	∞	15	∞	∞	∞
2	{a, V <sub>1</sub> }	{V <sub>2</sub> , V <sub>3</sub> , V <sub>4</sub> , V <sub>5</sub> , V <sub>6</sub> , z }		3	4	10	9	∞	∞	∞
3	{a, V <sub>1</sub> , V <sub>2</sub> }	{V <sub>3</sub> , V <sub>4</sub> , V <sub>5</sub> , V <sub>6</sub> , z }			4	10	9	8	∞	13
4	{a, V <sub>1</sub> , V <sub>2</sub> , V <sub>3</sub> }	{V <sub>4</sub> , V <sub>5</sub> , V <sub>6</sub> , z }				10	9	8	∞	13
5	{a, V <sub>1</sub> , V <sub>2</sub> , V <sub>3</sub> , V <sub>4</sub> }	{V <sub>5</sub> , V <sub>6</sub> , z }				10	9		16	13
6	{a, V <sub>1</sub> , V <sub>2</sub> , V <sub>3</sub> , V <sub>4</sub> , V <sub>5</sub> }	{V <sub>6</sub> , z }					10		14	13
7	{a, V <sub>1</sub> , V <sub>2</sub> , V <sub>3</sub> , V <sub>4</sub> , V <sub>5</sub> , V <sub>6</sub> }	{z }							14	13

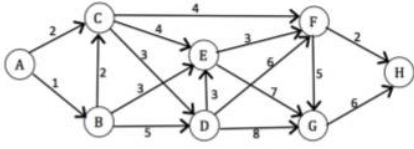
innovative • entrepreneurial • global
118
www.utm.my





**UTM**  
UNIVERSITI TEKNOLOGI MALAYSIA

The network in Figure 5 gives the distances in miles between pairs of cities A, B, ..., and H.



**Figure 5**

a) Based on Dijkstra's algorithm, complete Table 1 to find the shortest path from city A to city H. (Note: Copy Table 1 into your answer booklet). (8 marks)

**Table 1**

Iteration	S	N	L(A)	L(B)	L(C)	L(D)	L(E)	L(F)	L(G)	L(H)
0										
1										
2										
3										
4										
5										
6										
7										

b) State the minimum distance and the shortest path from city 1 to city 8. (2 marks)

innovative • entrepreneurial • global